




Use the groups to answer each question.

**Answers**

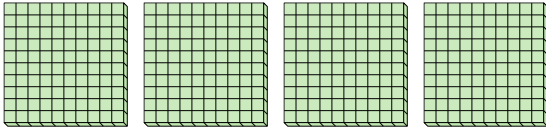
- 1) a. How many groups of 100 are there?
- b. How many small blocks are there total?



1a. \_\_\_\_\_

1b. \_\_\_\_\_

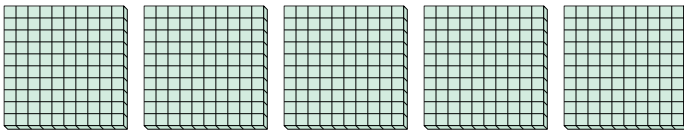
- 2) a. How many groups of 100 are there?
- b. How many small blocks are there total?



2a. \_\_\_\_\_

2b. \_\_\_\_\_

- 3) a. How many groups of 100 are there?
- b. How many small blocks are there total?



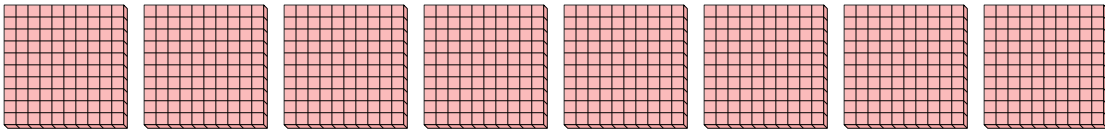
3a. \_\_\_\_\_

3b. \_\_\_\_\_

4a. \_\_\_\_\_

4b. \_\_\_\_\_

- 4) a. How many groups of 100 are there?
- b. How many small blocks are there total?




5a. \_\_\_\_\_

5b. \_\_\_\_\_

6a. \_\_\_\_\_

- 5) a. How many groups of 100 are there?
- b. How many small blocks are there total?

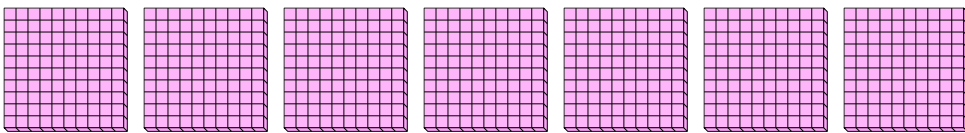


6b. \_\_\_\_\_

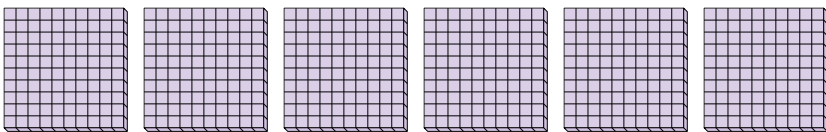
7a. \_\_\_\_\_

7b. \_\_\_\_\_

- 6) a. How many groups of 100 are there?
- b. How many small blocks are there total?



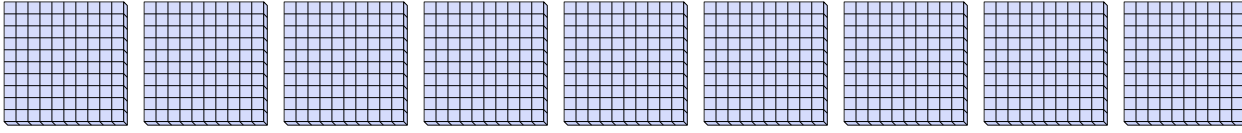
- 7) a. How many groups of 100 are there?
- b. How many small blocks are there total?



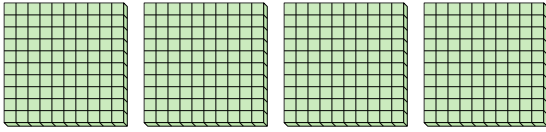


Use the groups to answer each question.

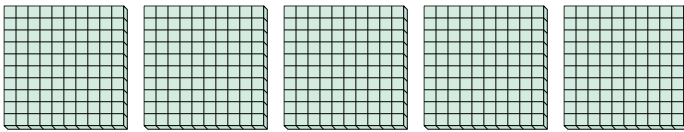
- 1) a. How many groups of 100 are there?  
 b. How many small blocks are there total?



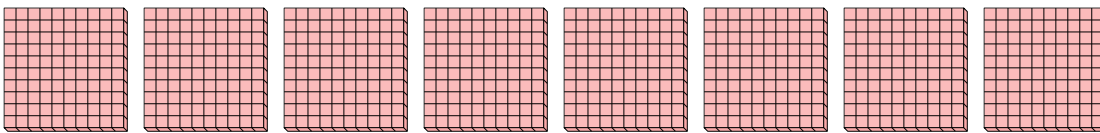
- 2) a. How many groups of 100 are there?  
 b. How many small blocks are there total?



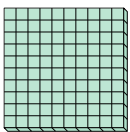
- 3) a. How many groups of 100 are there?  
 b. How many small blocks are there total?




- 4) a. How many groups of 100 are there?  
 b. How many small blocks are there total?



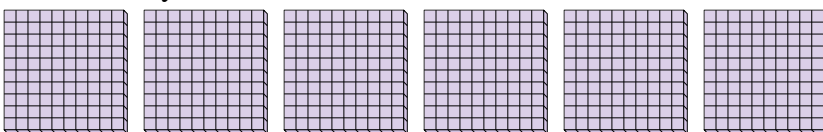
- 5) a. How many groups of 100 are there?  
 b. How many small blocks are there total?



- 6) a. How many groups of 100 are there?  
 b. How many small blocks are there total?



- 7) a. How many groups of 100 are there?  
 b. How many small blocks are there total?



**Answers**

1a. 9

1b. 900

2a. 4

2b. 400

3a. 5

3b. 500

4a. 8

4b. 800

5a. 1

5b. 100

6a. 7

6b. 700

7a. 6

7b. 600