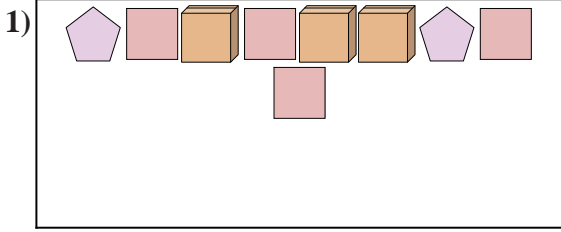


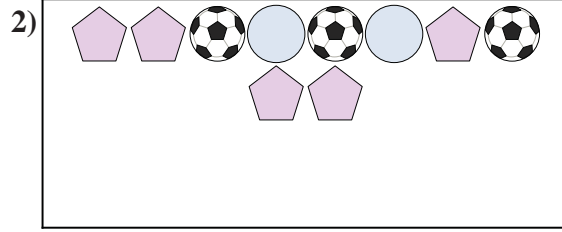


Compare the number of shapes.




Are there less or less ?

- A.
- B.




Are there less or less ?

- A.
- B.



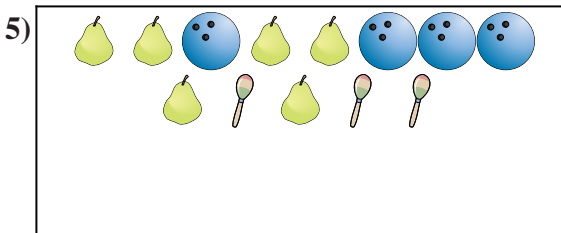
Are there less or less ?

- A.
- B.




Are there less or less ?

- A.
- B.



Are there more or more ?

- A.
- B.



Are there less or less ?

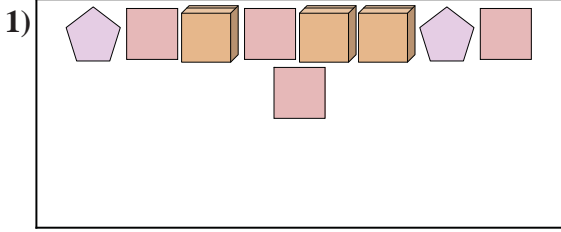
- A.
- B.

**Answers**

1. \_\_\_\_\_
2. \_\_\_\_\_
3. \_\_\_\_\_
4. \_\_\_\_\_
5. \_\_\_\_\_
6. \_\_\_\_\_

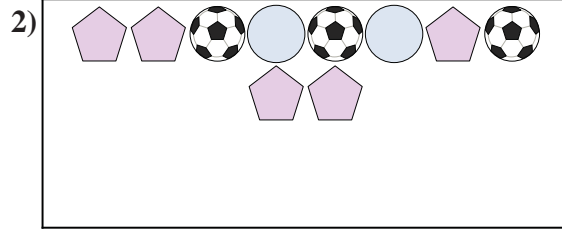


Compare the number of shapes.




Are there less or less ?

- A.
- B.




Are there less or less ?

- A.
- B.



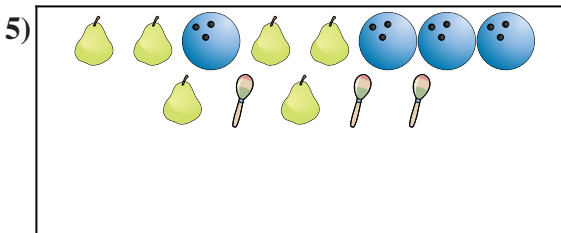
Are there less or less ?

- A.
- B.




Are there less or less ?

- A.
- B.



Are there more or more ?

- A.
- B.



Are there less or less ?

- A.
- B.

**Answers**

- 1.   **A**
- 2.   **A**
- 3.   **B**
- 4.   **B**
- 5.   **B**
- 6.   **B**