




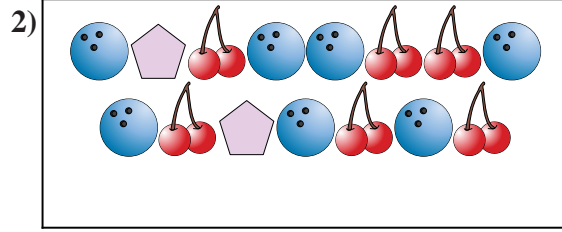
Compare the number of shapes.



Are there less or less ?

A.

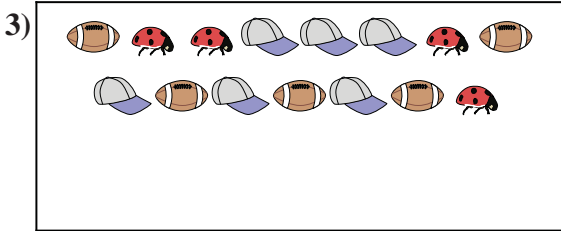
B.



Are there more or more ?

A.

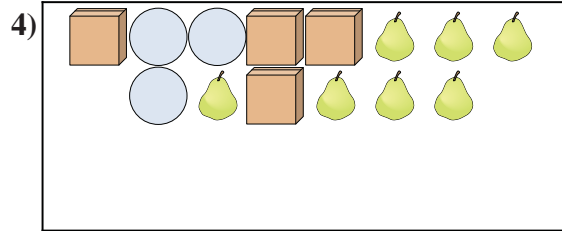
B.



Are there more or more ?

A.

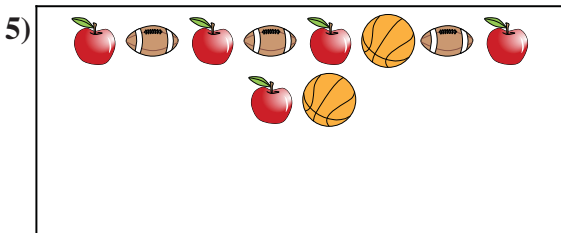
B.



Are there less or less ?

A.

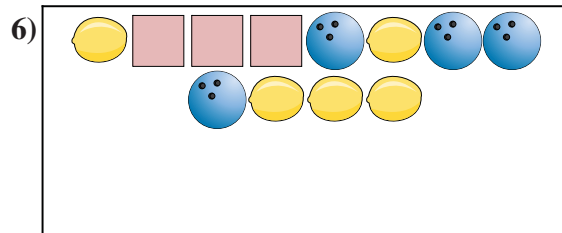
B.



Are there more or more ?

A.

B.



Are there less or less ?

A.

B.

Answers

1. _____

2. _____

3. _____


4. _____

5. _____

6. _____



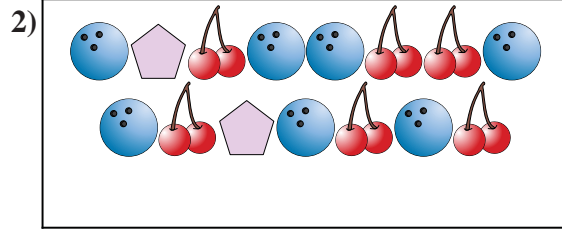
Compare the number of shapes.



Are there less or less ?

A.

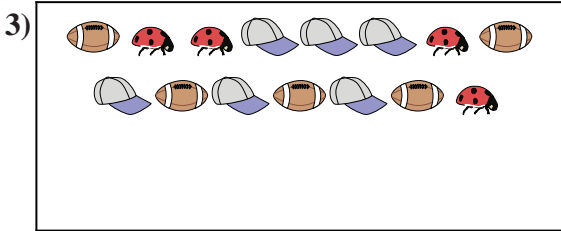
B.



Are there more or more ?

A.

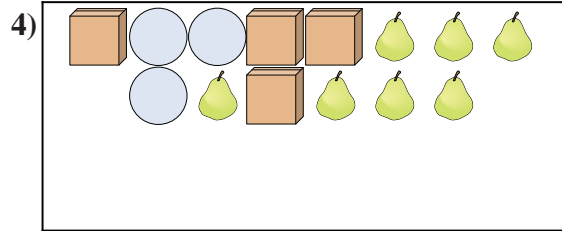
B.



Are there more or more ?

A.

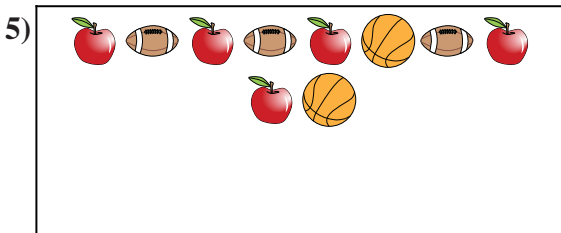
B.



Are there less or less ?

A.

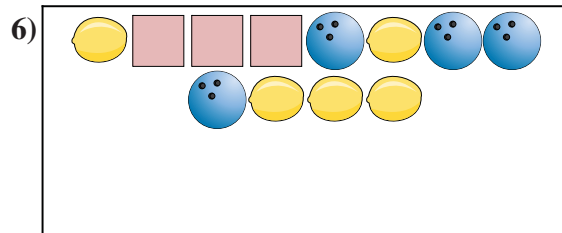
B.



Are there more or more ?

A.

B.



Are there less or less ?

A.

B.

Answers

1. **B**

2. **B**

3. **B**

4. **B**

5. **A**

6. **A**