


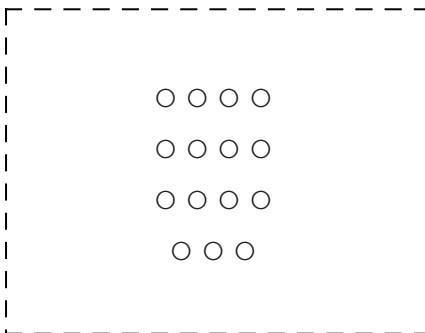


Determine if the number of shapes in the box is even or odd.


1)



2)




3)




4)



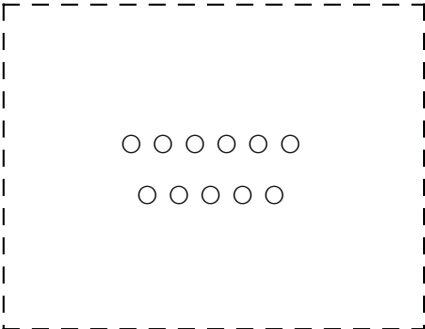
5)




6)




7)




8)



9)



10)



Answers

1. _____

2. _____

3. _____

4. _____

5. _____

6. _____

7. _____

8. _____

9. _____

10. _____



Determine if the number of shapes in the box is even or odd.

1) 20

2) 15

3) 18

4) 12

5) 14

6) 6

7) 11

8) 10

9) 7

10) 9

Answers

1. Even

2. Odd

3. Even

4. Even

5. Even

6. Even

7. Odd

8. Even

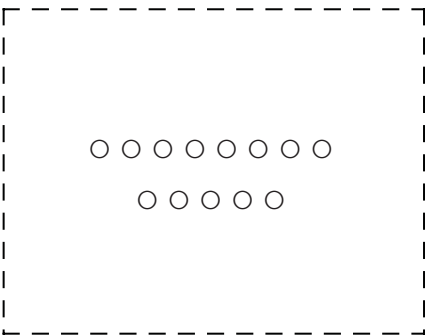
9. Odd

10. Odd




Determine if the number of shapes in the box is even or odd.


1)




2)




3)



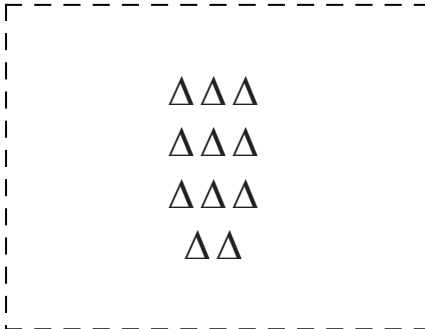
4)



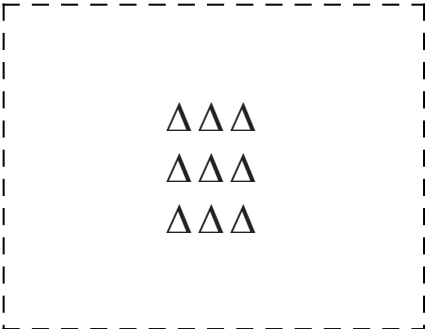
5)




6)



7)




8)



9)



10)



Answers

1. _____

2. _____

3. _____

4. _____

5. _____

6. _____

7. _____

8. _____

9. _____

10. _____



Determine if the number of shapes in the box is even or odd.

1) **13**

2) **7**

3) **14**

4) **15**

5) **10**

6) **11**

7) **9**

8) **20**

9) **16**

10) **6**

Answers

1. Odd

2. Odd

3. Even

4. Odd

5. Even

6. Odd

7. Odd

8. Even

9. Even

10. Even




Determine if the number of shapes in the box is even or odd.

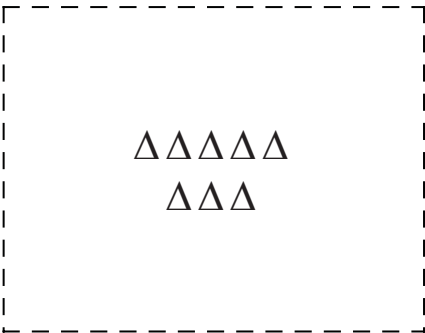
1)




2)



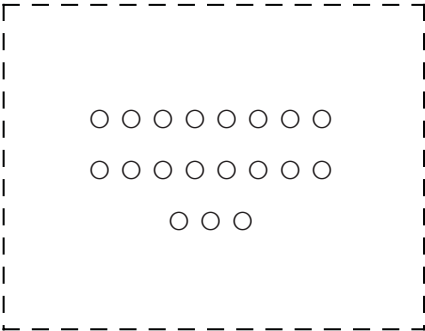
3)




4)



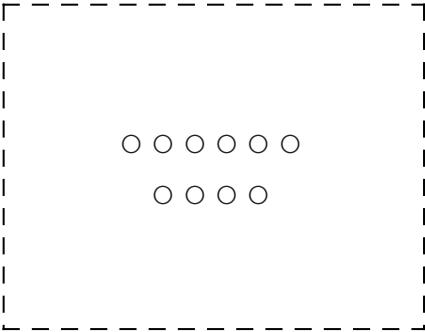
5)




6)




7)




8)



9)



10)



Answers

1. _____

2. _____

3. _____

4. _____

5. _____

6. _____

7. _____

8. _____

9. _____

10. _____



Determine if the number of shapes in the box is even or odd.

1) **9**

2) **13**

3) **8**

4) **11**

5) **19**

6) **16**

7) **10**

8) **15**

9) **20**

10) **17**

Answers

1. Odd
2. Odd
3. Even
4. Odd
5. Odd
6. Even
7. Even
8. Odd
9. Even
10. Odd



Determine if the number of shapes in the box is even or odd.

Answers

1)

2)

3)

4)

5)

6)

7)

8)

9)

10)

1. _____
2. _____
3. _____
4. _____
5. _____
6. _____
7. _____
8. _____
9. _____
10. _____



Determine if the number of shapes in the box is even or odd.

1) **14**

2) **6**

3) **15**

4) **8**

5) **16**

6) **11**

7) **13**

8) **12**

9) **20**

10) **9**

Answers

1. Even

2. Even

3. Odd

4. Even

5. Even

6. Odd

7. Odd

8. Even

9. Even

10. Odd



Determine if the number of shapes in the box is even or odd.

1)

2)

3)

4)

5)

6)

7)

8)

9)


10)


Answers


1. _____
2. _____
3. _____
4. _____
5. _____
6. _____
7. _____
8. _____
9. _____
10. _____




Determine if the number of shapes in the box is even or odd.


1)  **14**


2)  **15**


3)  **20**

4)  **13**


5)  **18**

6)  **9**

7)  **17**

8)  **11**

9)  **7**

10)  **6**

Answers

1. Even
2. Odd
3. Even
4. Odd
5. Even
6. Odd
7. Odd
8. Odd
9. Odd
10. Even



Determine if the number of shapes in the box is even or odd.

Answers

1)

2)

3)

4)

5)

6)

7)

8)


9)


10)

1. _____
2. _____
3. _____
4. _____
5. _____
6. _____
7. _____
8. _____
9. _____
10. _____




Determine if the number of shapes in the box is even or odd.

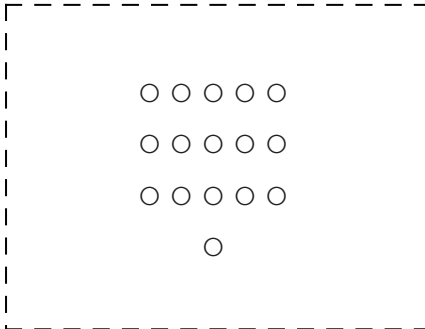
1)  **20**

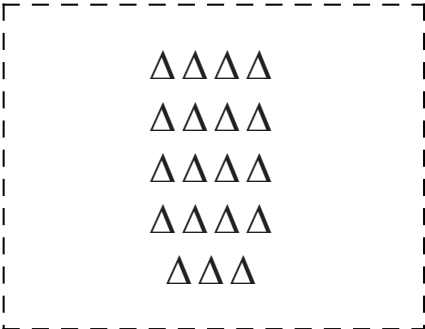
2)  **18**


3)  **8**


4)  **6**


5)  **13**

6)  **16**

7)  **19**

8)  **12**

9)  **17**

10)  **14**


Answers

1. Even
2. Even
3. Even
4. Even
5. Odd
6. Even
7. Odd
8. Even
9. Odd
10. Even




Determine if the number of shapes in the box is even or odd.

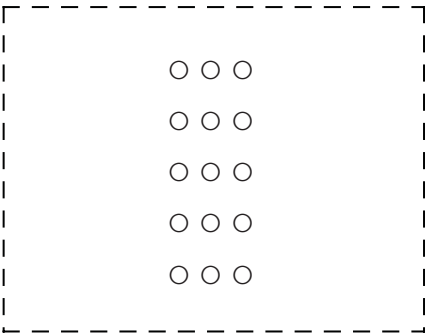
1)




2)




3)



4)




5)



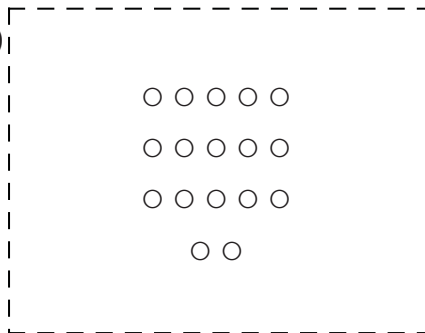
6)



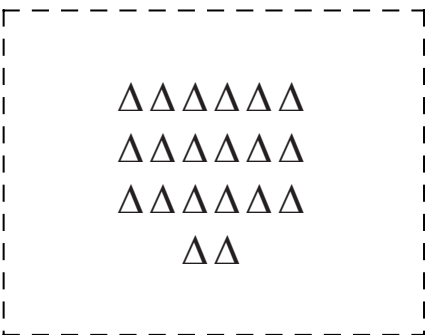
7)




8)



9)



10)




Answers

1. _____
2. _____
3. _____
4. _____
5. _____
6. _____
7. _____
8. _____
9. _____
10. _____




Determine if the number of shapes in the box is even or odd.

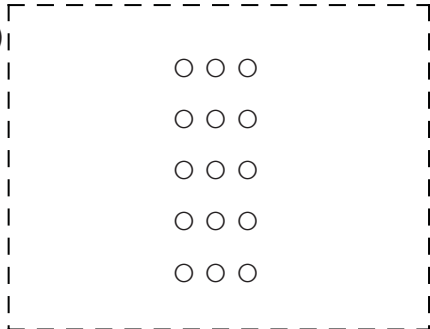
1) **11**




2) **7**




3) **15**



4) **13**



5) **6**



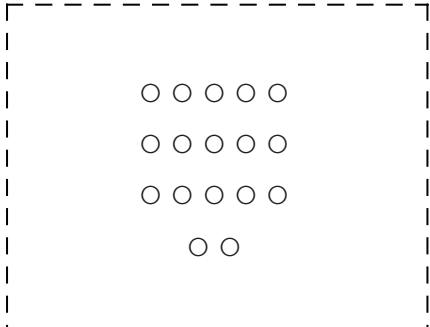
6) **9**



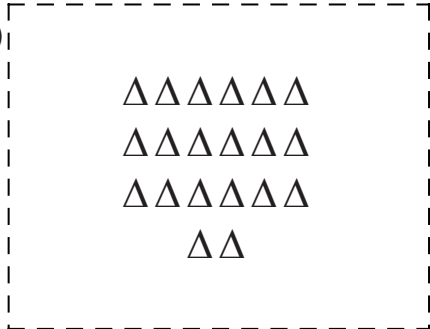
7) **19**




8) **17**



9) **20**



10) **16**



Answers

1. Odd

2. Odd

3. Odd

4. Odd

5. Even

6. Odd

7. Odd

8. Odd

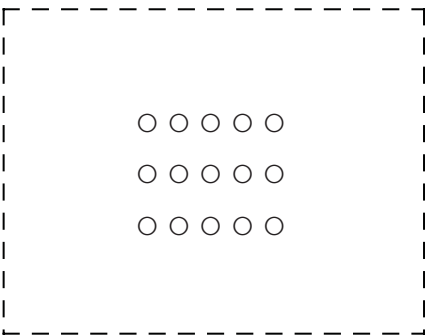
9. Even

10. Even



Determine if the number of shapes in the box is even or odd.


1)




2)



3)




4)




5)



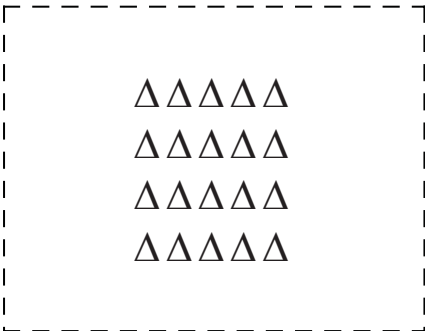
6)




7)




8)



9)



10)



Answers

1. _____

2. _____

3. _____

4. _____

5. _____

6. _____

7. _____

8. _____

9. _____

10. _____



Determine if the number of shapes in the box is even or odd.

1) **15**

2) **6**

3) **10**

4) **8**

5) **12**

6) **7**

7) **16**

8) **20**

9) **17**

10) **9**

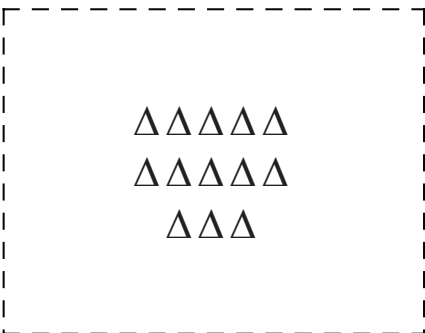
Answers

1. Odd
2. Even
3. Even
4. Even
5. Even
6. Odd
7. Even
8. Even
9. Odd
10. Odd




Determine if the number of shapes in the box is even or odd.

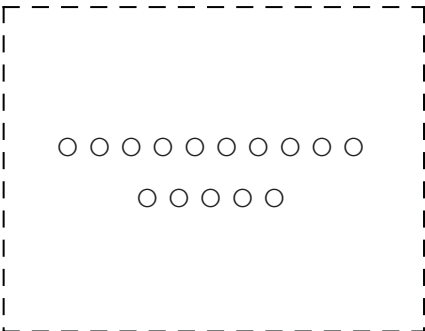
1)



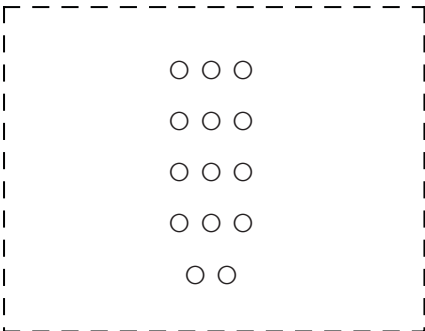
2)




3)




4)




5)




6)



7)




8)



9)



10)



Answers

1. _____

2. _____

3. _____

4. _____

5. _____

6. _____

7. _____

8. _____

9. _____

10. _____



Determine if the number of shapes in the box is even or odd.

1) **13**

2) **17**

3) **15**

4) **14**

5) **8**

6) **6**

7) **7**

8) **10**

9) **20**

10) **18**

Answers

1. Odd
2. Odd
3. Odd
4. Even
5. Even
6. Even
7. Odd
8. Even
9. Even
10. Even




Determine if the number of shapes in the box is even or odd.

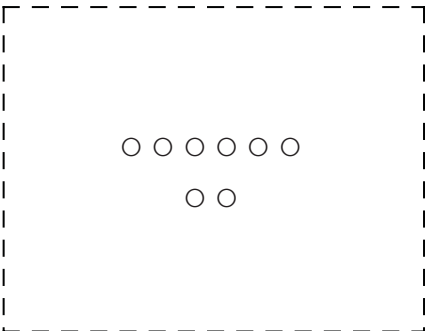
1)



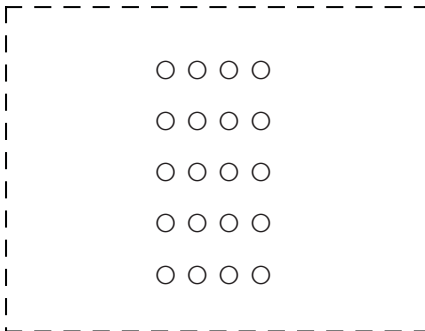
2)




3)




4)



5)




6)




7)



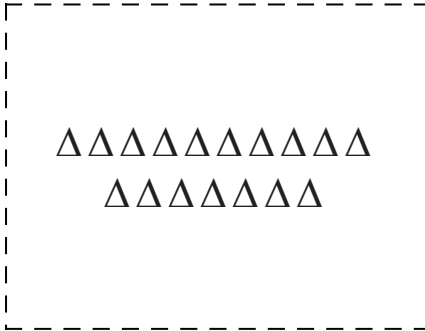
8)



9)



10)





Answers


1. _____
2. _____
3. _____
4. _____
5. _____
6. _____
7. _____
8. _____
9. _____
10. _____





Determine if the number of shapes in the box is even or odd.


1)  **11**


2)  **10**

3)  **8**

4)  **20**

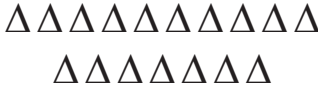
5)  **6**

6)  **13**

7)  **18**

8)  **12**

9)  **7**

10)  **17**

Answers

1. Odd

2. Even

3. Even

4. Even

5. Even

6. Odd

7. Even

8. Even

9. Odd

10. Odd