



Determine if the number of shapes in the box is even or odd.

1)

2)

3)

4)

5)

6)

7)

8)

9)


10)


Answers


1. \_\_\_\_\_
2. \_\_\_\_\_
3. \_\_\_\_\_
4. \_\_\_\_\_
5. \_\_\_\_\_
6. \_\_\_\_\_
7. \_\_\_\_\_
8. \_\_\_\_\_
9. \_\_\_\_\_
10. \_\_\_\_\_




Determine if the number of shapes in the box is even or odd.


1)  **14**


2)  **15**


3)  **20**

4)  **13**


5)  **18**

6)  **9**

7)  **17**

8)  **11**

9)  **7**

10)  **6**

Answers

1. Even
2. Odd
3. Even
4. Odd
5. Even
6. Odd
7. Odd
8. Odd
9. Odd
10. Even