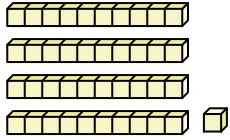




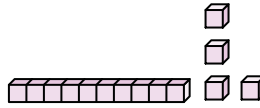
Count the total number of small blocks.

Answers

1)



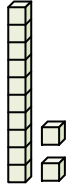
2)



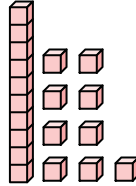
1. _____

2. _____

3)



4)

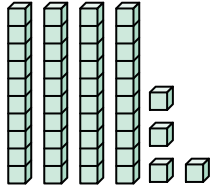


3. _____

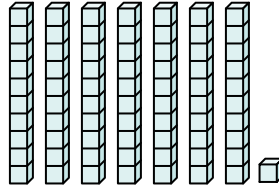
4. _____

5. _____

5)



6)

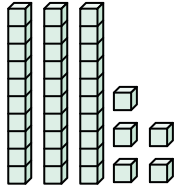


6. _____

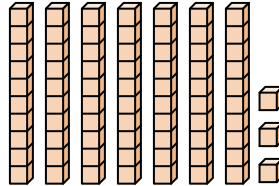
7. _____

8. _____

7)



8)



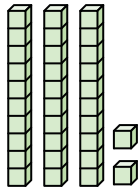
9. _____

10. _____

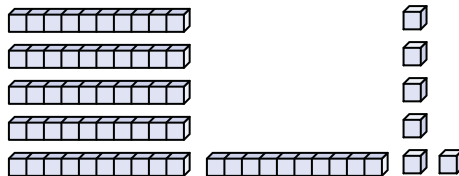
11. _____

12. _____

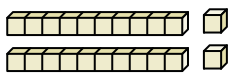
9)



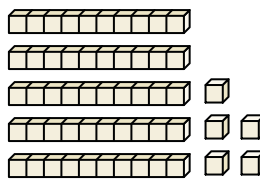
10)



11)



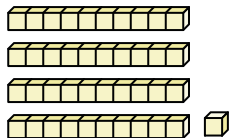
12)



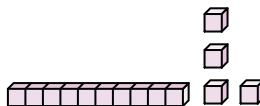


Count the total number of small blocks.

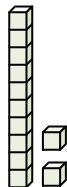
1)



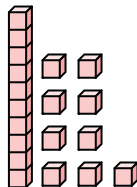
2)



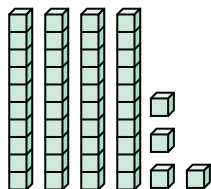
3)



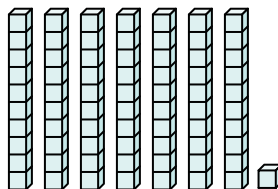
4)



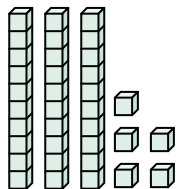
5)



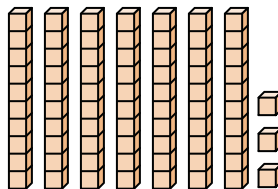
6)



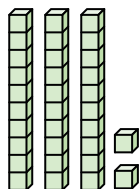
7)



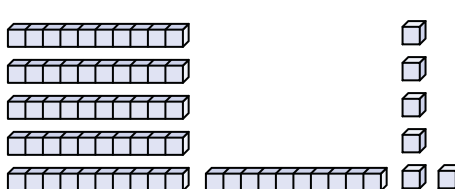
8)



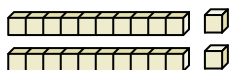
9)



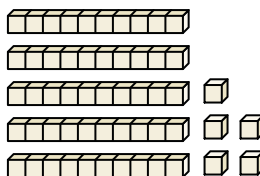
10)



11)



12)



Answers

1. 41

2. 14

3. 12

4. 19

5. 44

6. 71

7. 35

8. 73

9. 32

10. 66

11. 22

12. 55



Count the total number of small blocks.

Answers

66

14

41

19

71

44

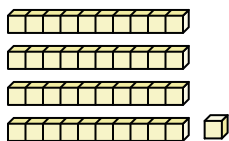
32

35

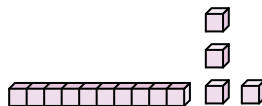
12

73

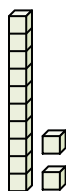
1)



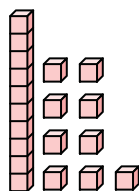
2)



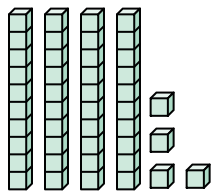
3)



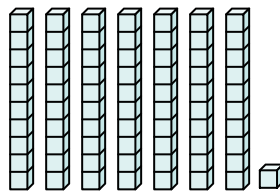
4)



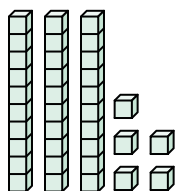
5)



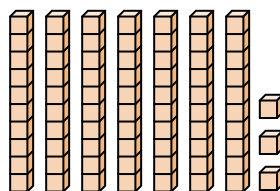
6)



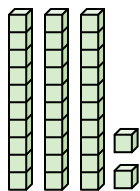
7)



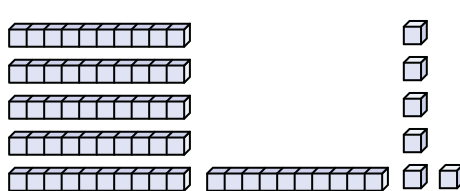
8)



9)



10)



1. _____

2. _____

3. _____

4. _____

5. _____

6. _____

7. _____

8. _____

9. _____

10. _____