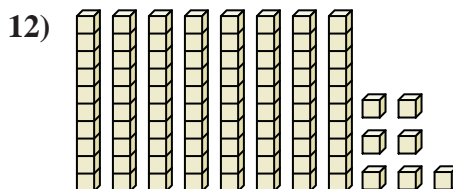
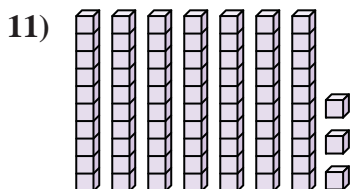
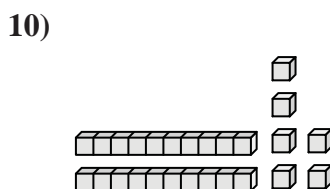
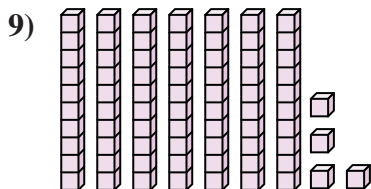
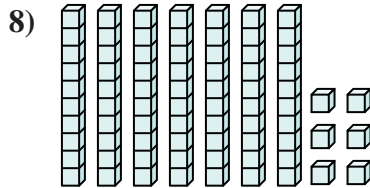
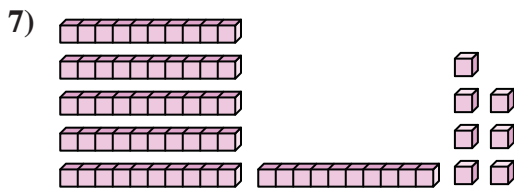
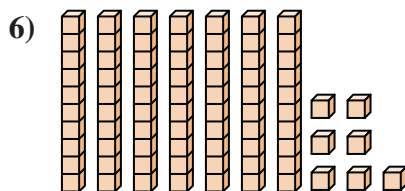
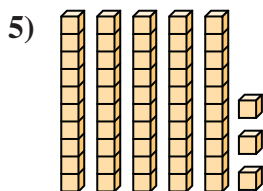
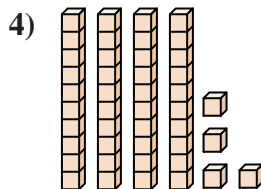
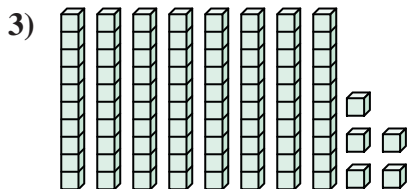
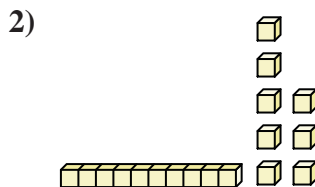
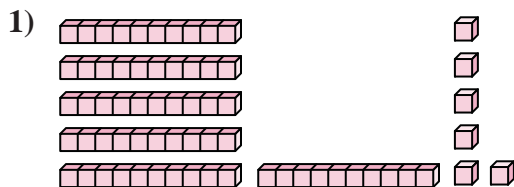




Count the total number of small blocks.

Answers



1. \_\_\_\_\_

2. \_\_\_\_\_

3. \_\_\_\_\_

4. \_\_\_\_\_

5. \_\_\_\_\_

6. \_\_\_\_\_

7. \_\_\_\_\_

8. \_\_\_\_\_

9. \_\_\_\_\_

10. \_\_\_\_\_

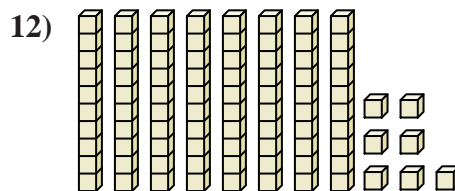
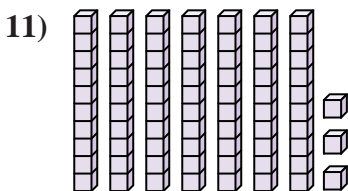
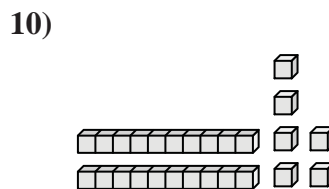
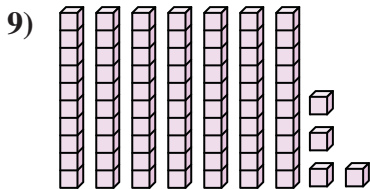
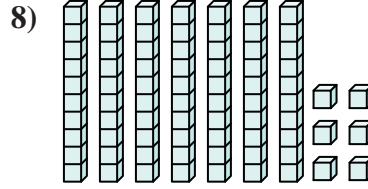
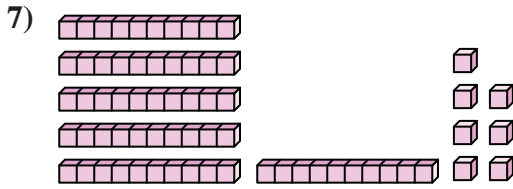
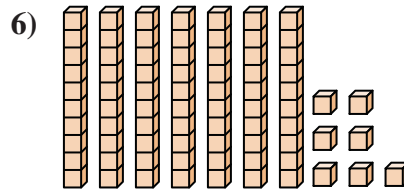
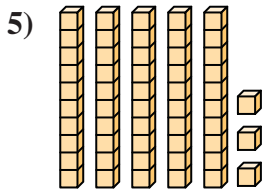
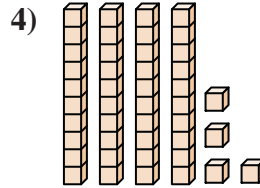
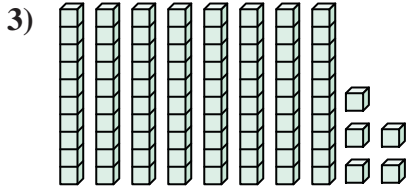
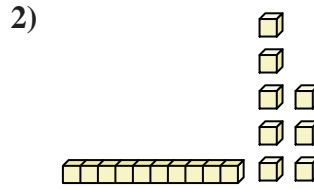
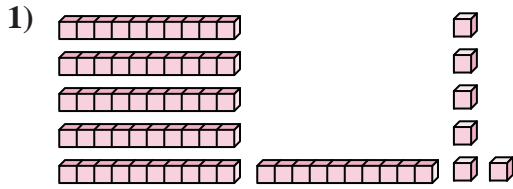
11. \_\_\_\_\_

12. \_\_\_\_\_



Count the total number of small blocks.

Answers



1. 66

2. 18

3. 85

4. 44

5. 53

6. 77

7. 67

8. 76

9. 74

10. 26

11. 73

12. 87



Count the total number of small blocks.

Answers

53	66	67	77	85
26	18	76	74	44

1. \_\_\_\_\_
2. \_\_\_\_\_
3. \_\_\_\_\_
4. \_\_\_\_\_
5. \_\_\_\_\_
6. \_\_\_\_\_
7. \_\_\_\_\_
8. \_\_\_\_\_
9. \_\_\_\_\_
10. \_\_\_\_\_

