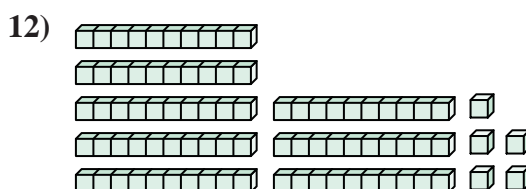
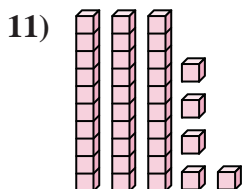
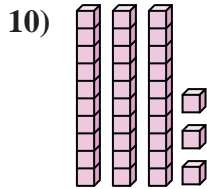
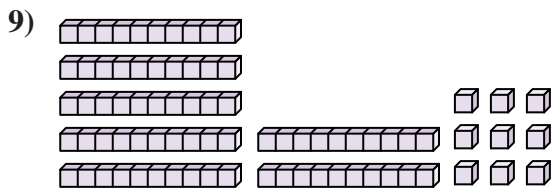
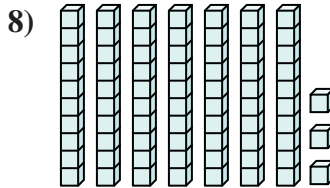
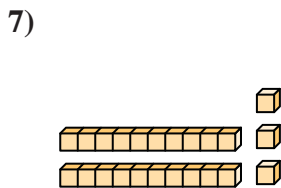
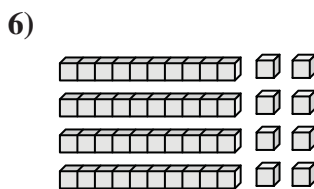

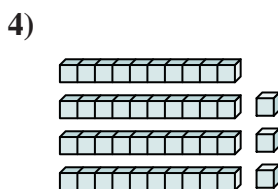
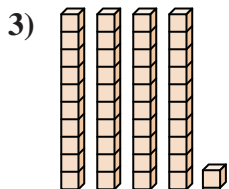
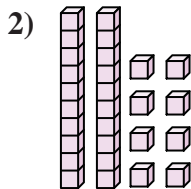
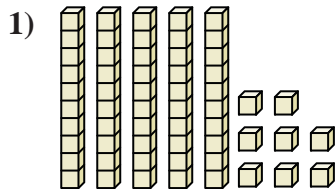




Count the total number of small blocks.

Answers



1. \_\_\_\_\_

2. \_\_\_\_\_

3. \_\_\_\_\_

4. \_\_\_\_\_

5. \_\_\_\_\_

6. \_\_\_\_\_

7. \_\_\_\_\_

8. \_\_\_\_\_

9. \_\_\_\_\_

10. \_\_\_\_\_

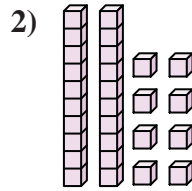
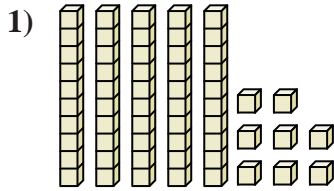
11. \_\_\_\_\_

12. \_\_\_\_\_



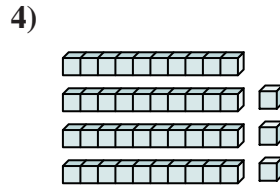
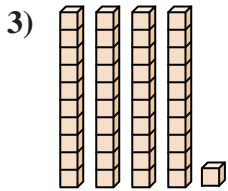
Count the total number of small blocks.

Answers



1. 58

2. 28

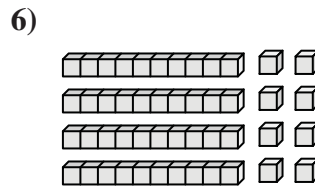
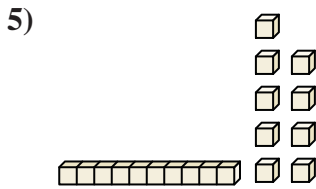


3. 41

4. 43

5. 19

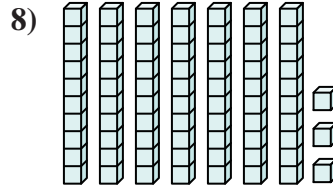
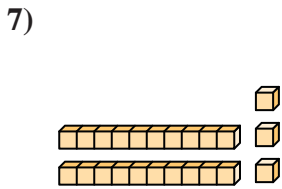
6. 48



7. 23

8. 73

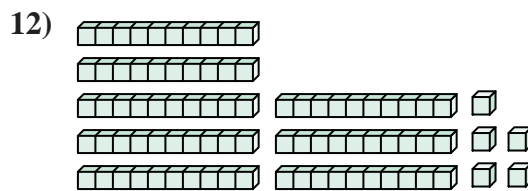
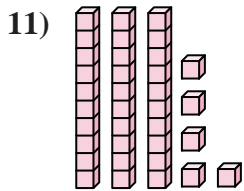
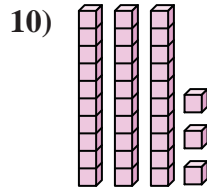
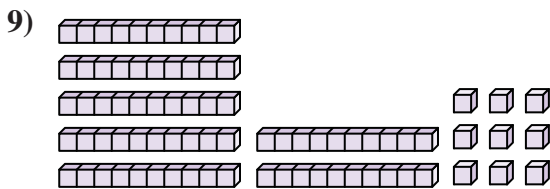
9. 79



10. 33

11. 35

12. 85





Count the total number of small blocks.

Answers

58

43

73

41

19

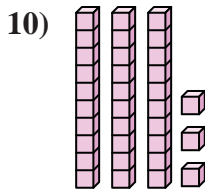
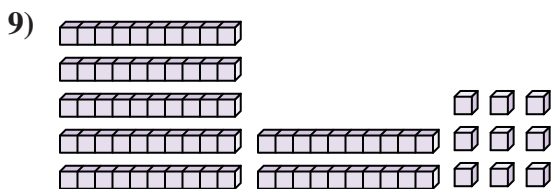
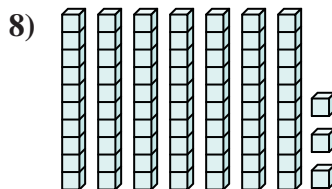
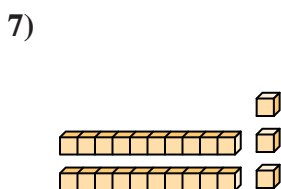
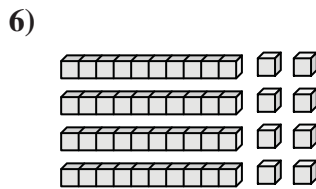
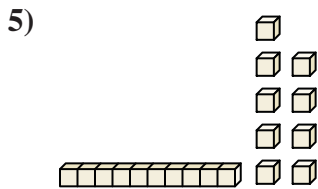
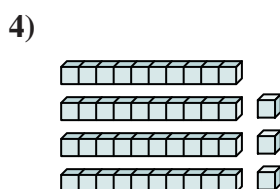
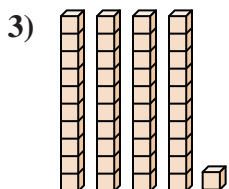
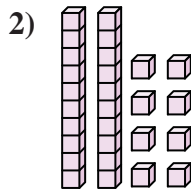
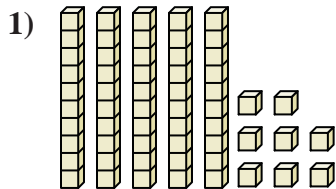
48

79

28

33

23



1. \_\_\_\_\_

2. \_\_\_\_\_

3. \_\_\_\_\_

4. \_\_\_\_\_

5. \_\_\_\_\_

6. \_\_\_\_\_

7. \_\_\_\_\_

8. \_\_\_\_\_

9. \_\_\_\_\_

10. \_\_\_\_\_