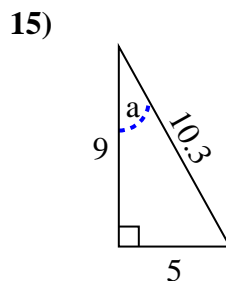
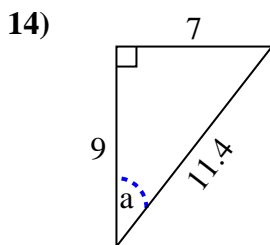
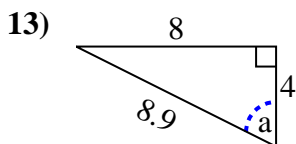
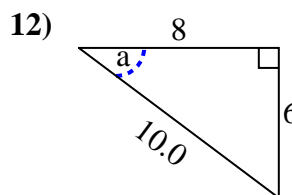
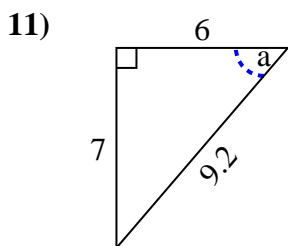
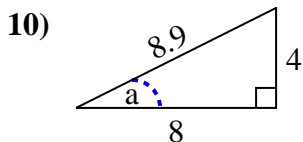
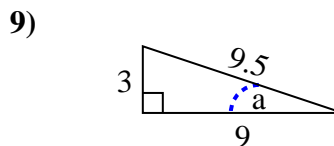
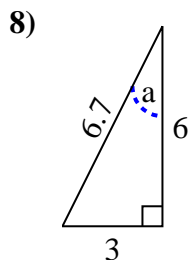
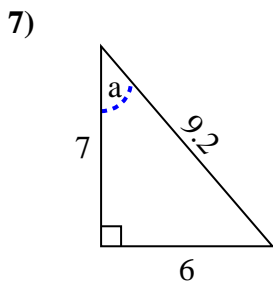
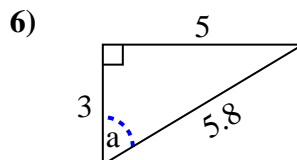
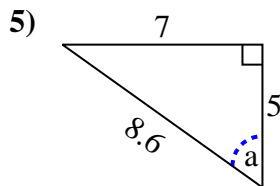
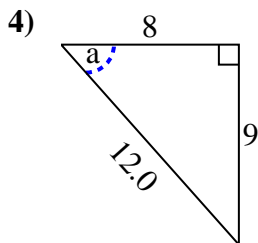
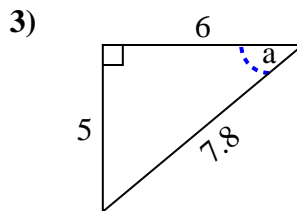
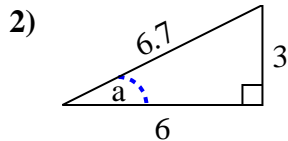
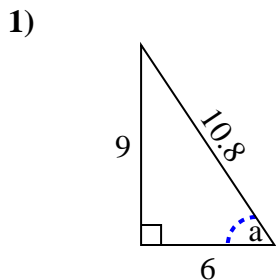




Identify the Opposite, Adjacent and Hypotenuse of Angle a.

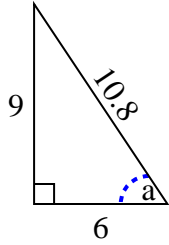
Answers



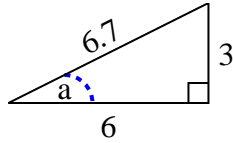
1. \_\_\_\_\_
2. \_\_\_\_\_
3. \_\_\_\_\_
4. \_\_\_\_\_
5. \_\_\_\_\_
6. \_\_\_\_\_
7. \_\_\_\_\_
8. \_\_\_\_\_
9. \_\_\_\_\_
10. \_\_\_\_\_
11. \_\_\_\_\_
12. \_\_\_\_\_
13. \_\_\_\_\_
14. \_\_\_\_\_
15. \_\_\_\_\_

Identify the Opposite, Adjacent and Hypotenuse of Angle  $a$ .

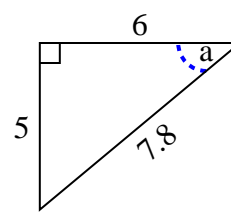
1)



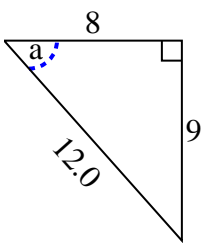
2)



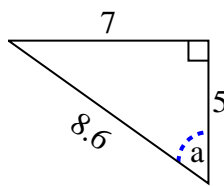
3)



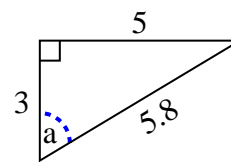
4)



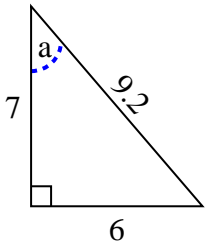
5)



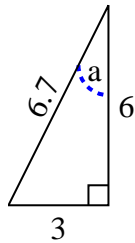
6)



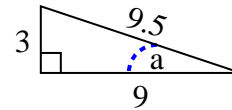
7)



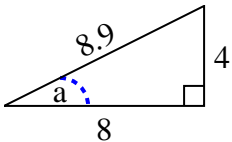
8)



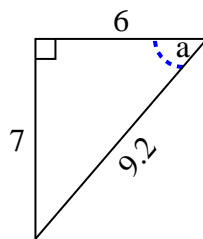
9)



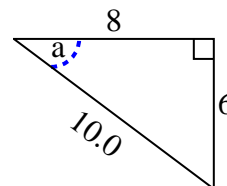
10)



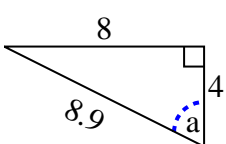
11)



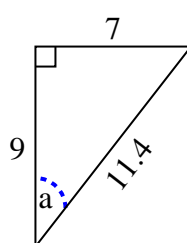
12)



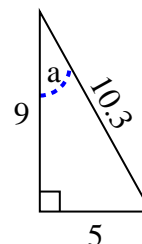
13)



14)



15)

**Answers**1. **9, 6, 10.8**2. **3, 6, 6.7**3. **5, 6, 7.8**4. **9, 8, 12.0**5. **7, 5, 8.6**6. **5, 3, 5.8**7. **6, 7, 9.2**8. **3, 6, 6.7**9. **3, 9, 9.5**10. **4, 8, 8.9**11. **7, 6, 9.2**12. **6, 8, 10.0**13. **8, 4, 8.9**14. **7, 9, 11.4**15. **5, 9, 10.3**