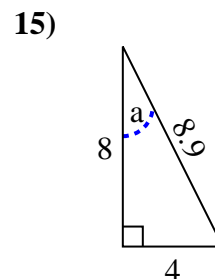
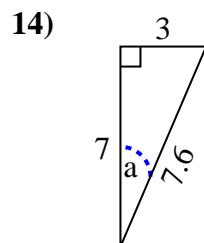
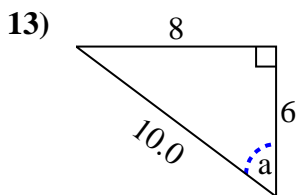
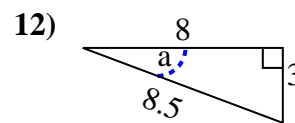
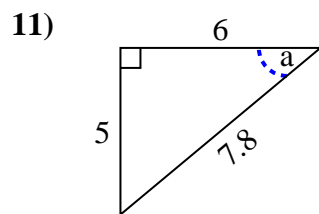
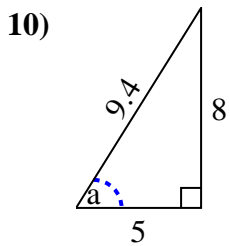
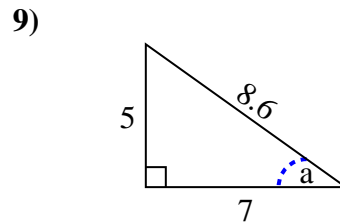
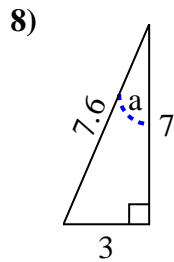
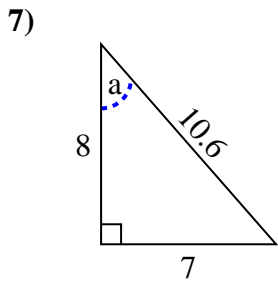
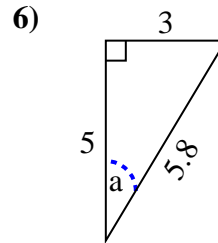
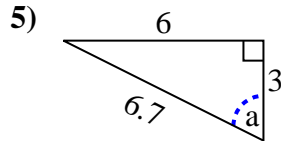
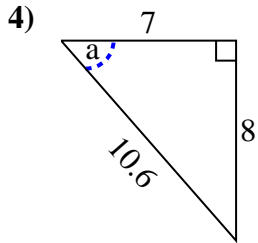
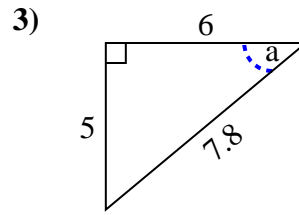
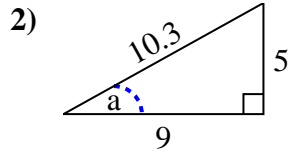
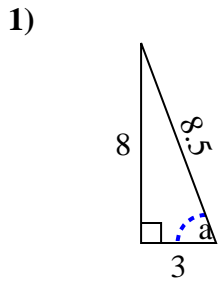




Identify the Opposite, Adjacent and Hypotenuse of Angle a.

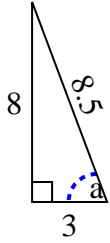
Answers



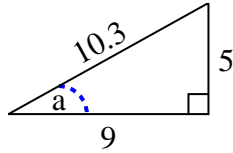
1. _____
2. _____
3. _____
4. _____
5. _____
6. _____
7. _____
8. _____
9. _____
10. _____
11. _____
12. _____
13. _____
14. _____
15. _____

Identify the Opposite, Adjacent and Hypotenuse of Angle a .

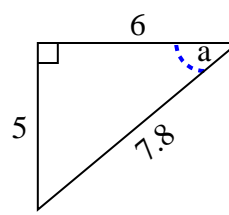
1)



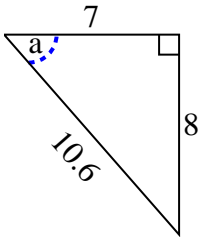
2)



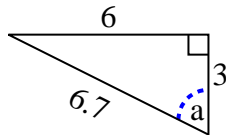
3)



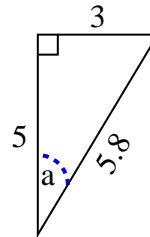
4)



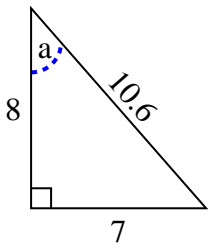
5)



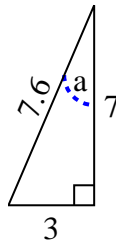
6)



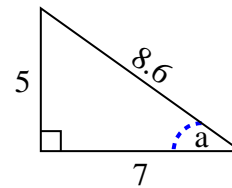
7)



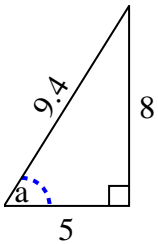
8)



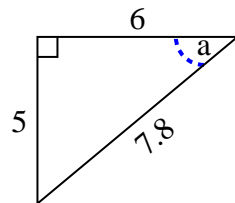
9)



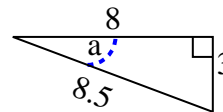
10)



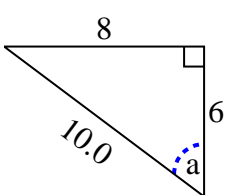
11)



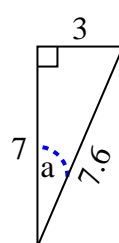
12)



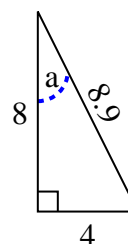
13)



14)



15)

**Answers**1. 8, 3, 8.52. 5, 9, 10.33. 5, 6, 7.84. 8, 7, 10.65. 6, 3, 6.76. 3, 5, 5.87. 7, 8, 10.68. 3, 7, 7.69. 5, 7, 8.610. 8, 5, 9.411. 5, 6, 7.812. 3, 8, 8.513. 8, 6, 10.014. 3, 7, 7.615. 4, 8, 8.9