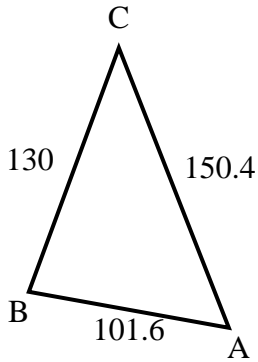


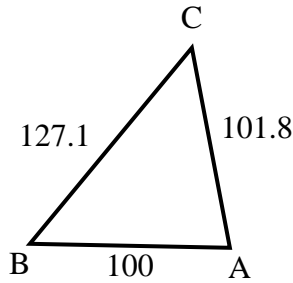


Find the length of the side listed.

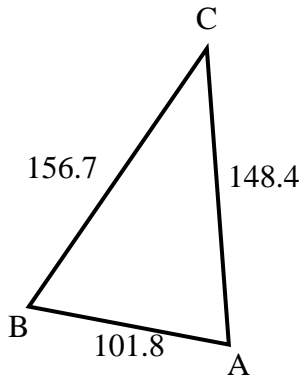
1) Find the length of side A.



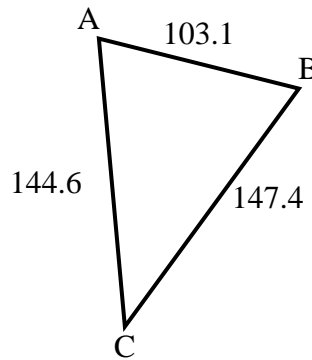
2) Find the length of side B.



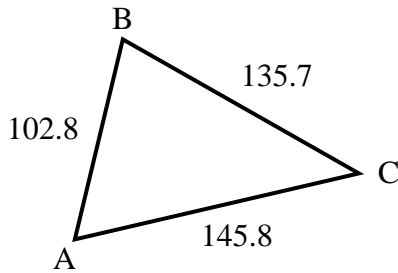
3) Find the length of side B.



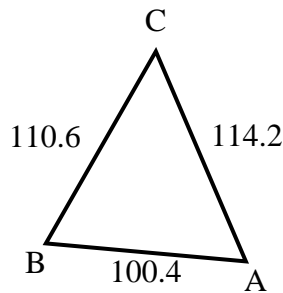
4) Find the length of side C.



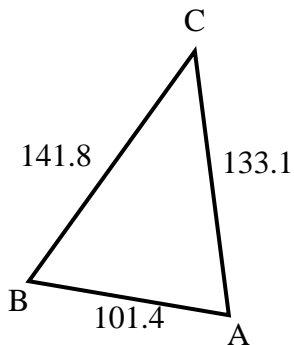
5) Find the length of side A.



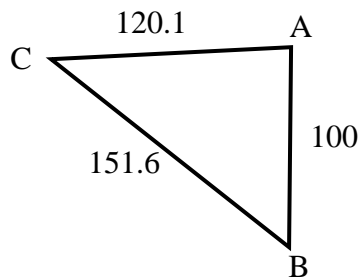
6) Find the length of side C.



7) Find the length of side B.



8) Find the length of side C.



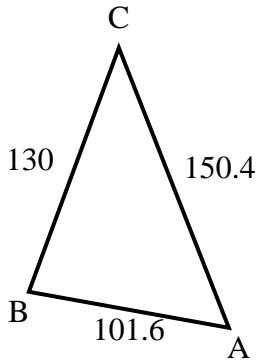
Answers

1. _____
2. _____
3. _____
4. _____
5. _____
6. _____
7. _____
8. _____

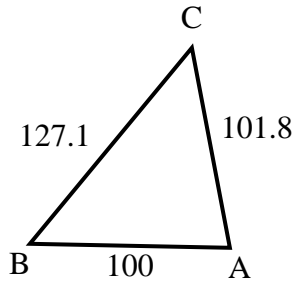


Find the length of the side listed.

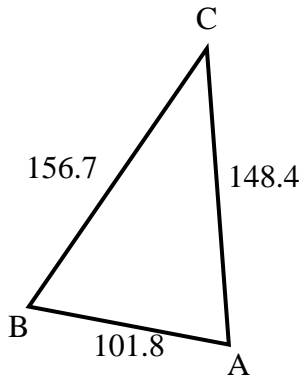
1) Find the length of side A.



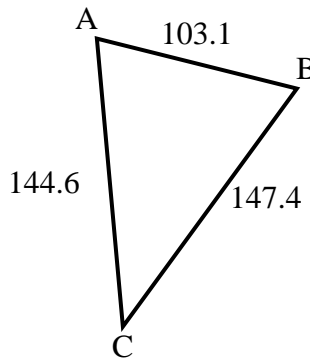
2) Find the length of side B.



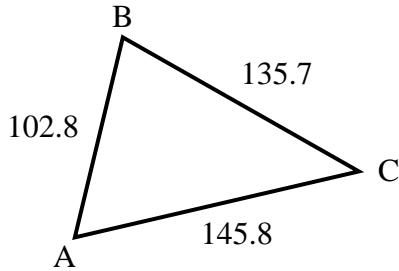
3) Find the length of side B.



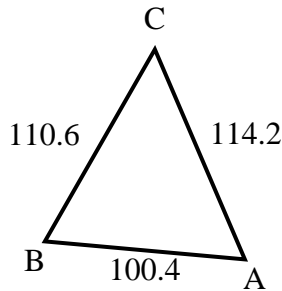
4) Find the length of side C.



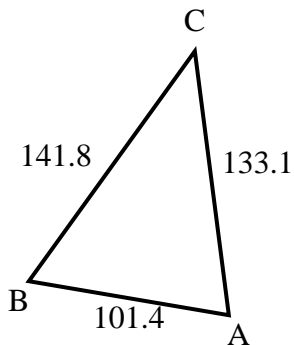
5) Find the length of side A.



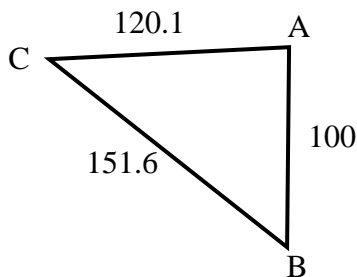
6) Find the length of side C.



7) Find the length of side B.



8) Find the length of side C.



Answers

1. 130
2. 101.8
3. 148.4
4. 103.1
5. 135.7
6. 100.4
7. 133.1
8. 100