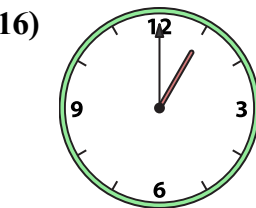
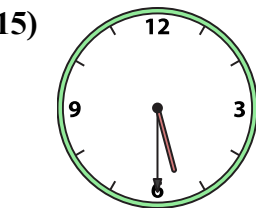
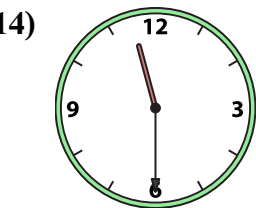
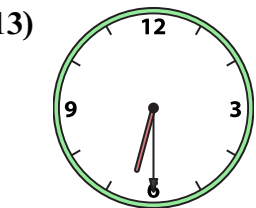
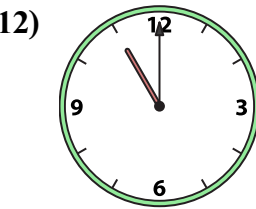
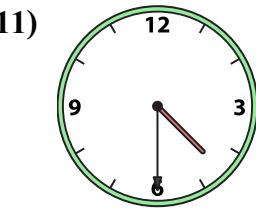
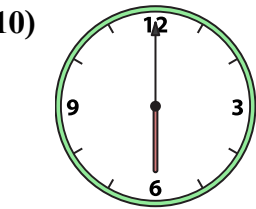
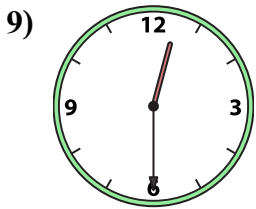
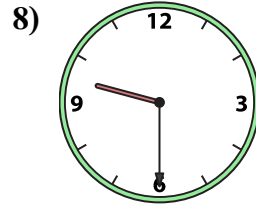

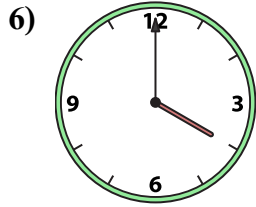
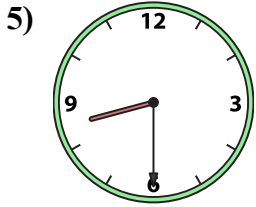
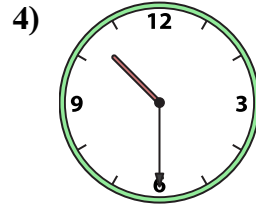
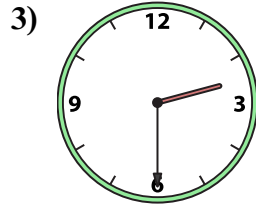
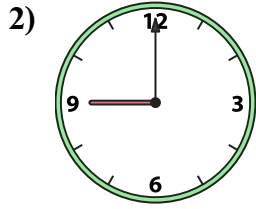





Match the analog clock on the top to the digital clock on the bottom.



Answers

1. \_\_\_\_\_

2. \_\_\_\_\_

3. \_\_\_\_\_

4. \_\_\_\_\_

5. \_\_\_\_\_

6. \_\_\_\_\_

7. \_\_\_\_\_

8. \_\_\_\_\_

9. \_\_\_\_\_

10. \_\_\_\_\_

11. \_\_\_\_\_

12. \_\_\_\_\_

13. \_\_\_\_\_

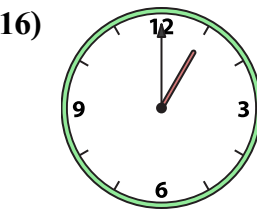
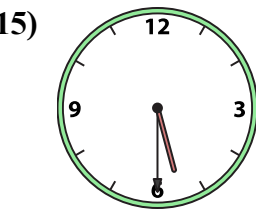
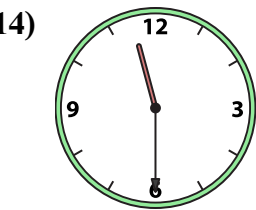
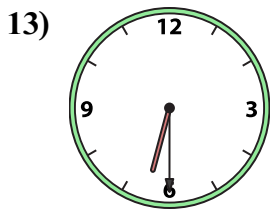
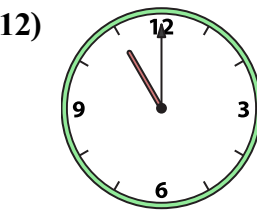
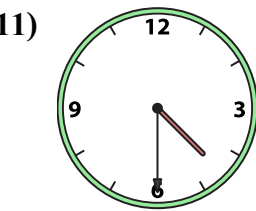
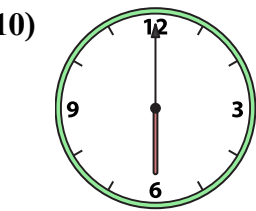
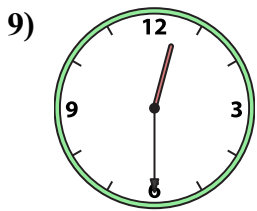
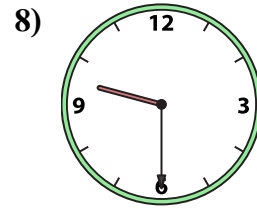

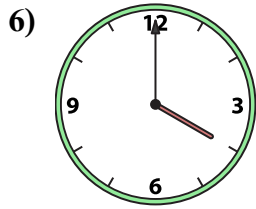
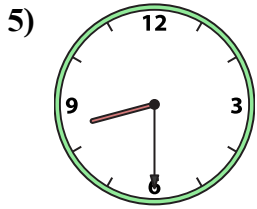
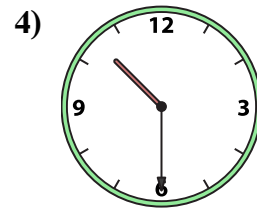
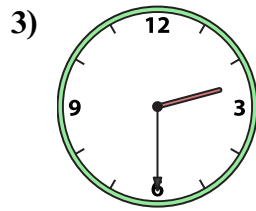
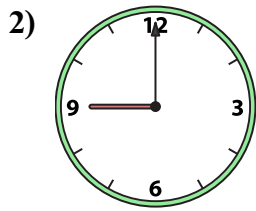
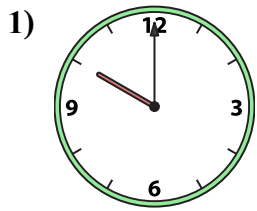
14. \_\_\_\_\_

15. \_\_\_\_\_

16. \_\_\_\_\_



Match the analog clock on the top to the digital clock on the bottom.



Answers

1. **G**

2. **H**

3. **I**

4. **F**

5. **E**

6. **C**

7. **A**

8. **B**

9. **M**

10. **N**

11. **D**

12. **P**

13. **K**

14. **O**

15. **J**

16. **L**