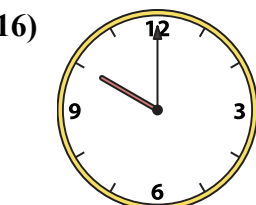



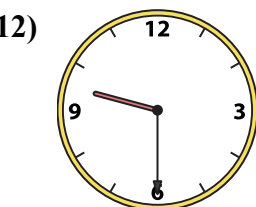
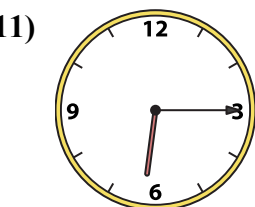
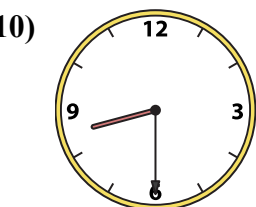
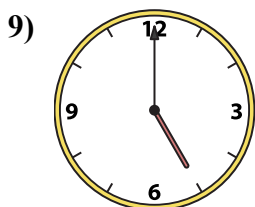
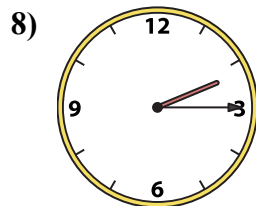
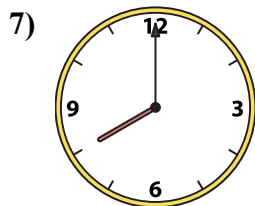
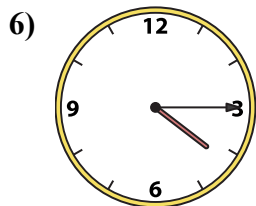
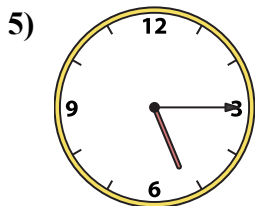
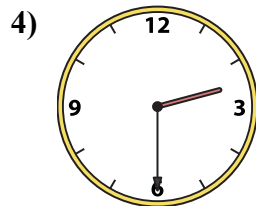
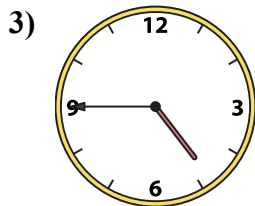
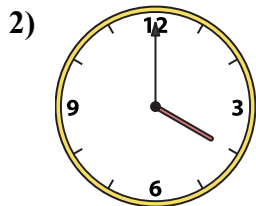
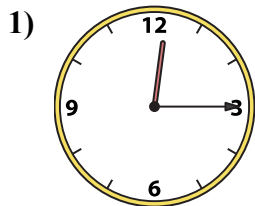




Match the analog clock on the top to the digital clock on the bottom.



**Answers**

1. \_\_\_\_\_

2. \_\_\_\_\_

3. \_\_\_\_\_

4. \_\_\_\_\_

5. \_\_\_\_\_

6. \_\_\_\_\_

7. \_\_\_\_\_

8. \_\_\_\_\_

9. \_\_\_\_\_

10. \_\_\_\_\_

11. \_\_\_\_\_

12. \_\_\_\_\_

13. \_\_\_\_\_

14. \_\_\_\_\_

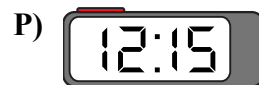
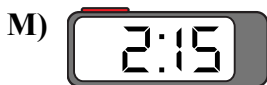
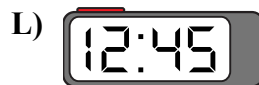
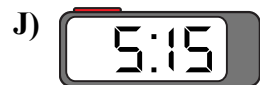

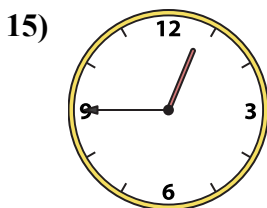
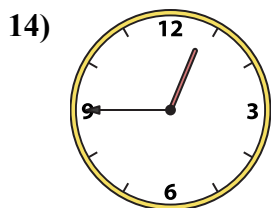
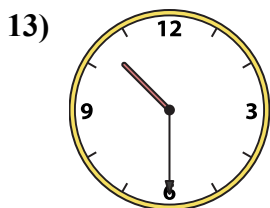
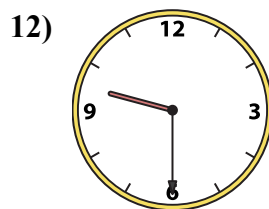
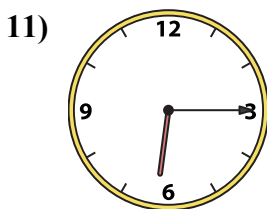
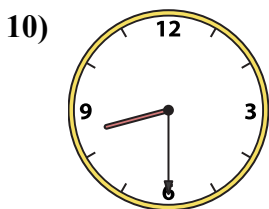
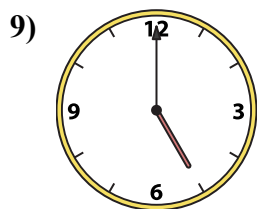
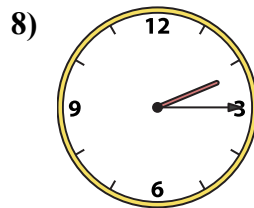
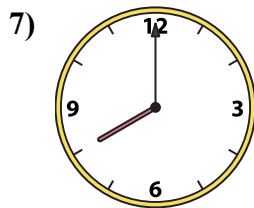
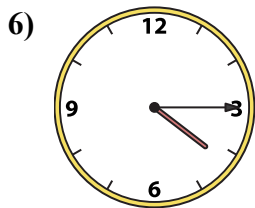
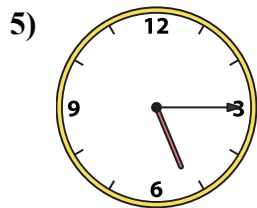
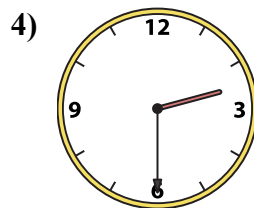
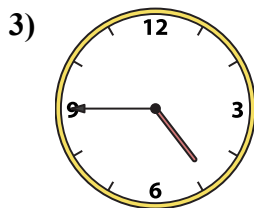
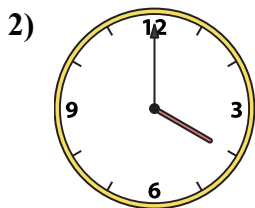
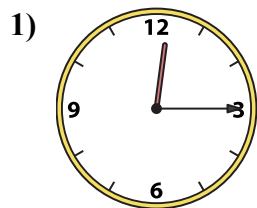
15. \_\_\_\_\_

16. \_\_\_\_\_





Match the analog clock on the top to the digital clock on the bottom.



**Answers**

1. **O**

2. **D**

3. **I**

4. **K**

5. **E**

6. **L**

7. **H**

8. **F**

9. **B**

10. **C**

11. **P**

12. **G**

13. **A**

14. **M**

15. **N**

16. **J**