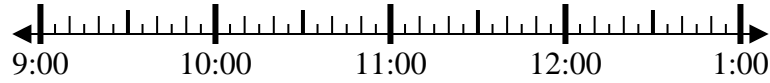




Solve each problem.

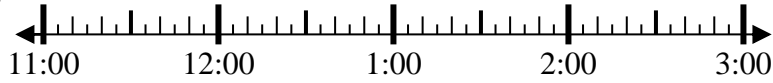
Answers

1) Start: _____
 Elapsed: 2 hrs & 25 mins
 End: 12:10



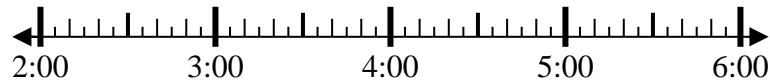
1. _____

2) Start: _____
 Elapsed: 2 hrs & 30 mins
 End: 2:00



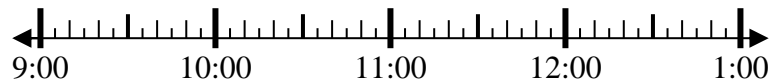
2. _____

3) Start: _____
 Elapsed: 1 hr & 10 mins
 End: 3:55



3. _____

4) Start: _____
 Elapsed: 1 hr & 45 mins
 End: 10:50



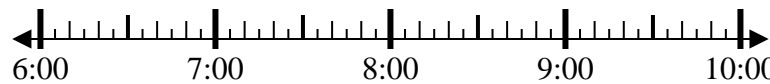
4. _____

5) Start: _____
 Elapsed: 2 hrs & 25 mins
 End: 5:15



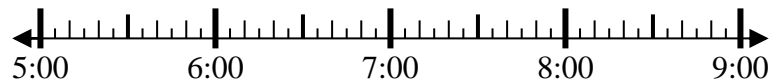
5. _____

6) Start: _____
 Elapsed: 2 hrs & 40 mins
 End: 9:15



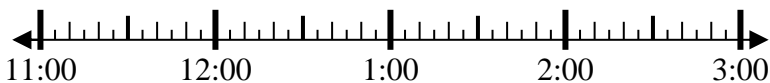
6. _____

7) Start: _____
 Elapsed: 2 hrs & 20 mins
 End: 8:05



7. _____

8) Start: _____
 Elapsed: 2 hrs & 55 mins
 End: 2:40



8. _____

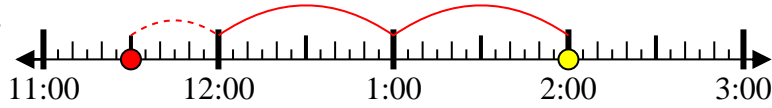


Solve each problem.

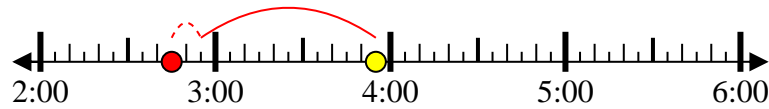
1) Start: 9:45
 Elapsed: 2 hrs & 25 mins
 End: 12:10



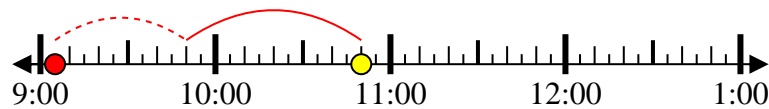
2) Start: 11:30
 Elapsed: 2 hrs & 30 mins
 End: 2:00



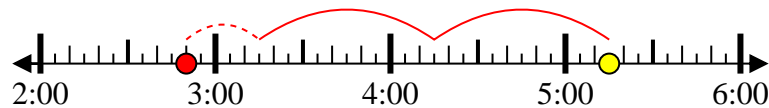
3) Start: 2:45
 Elapsed: 1 hr & 10 mins
 End: 3:55



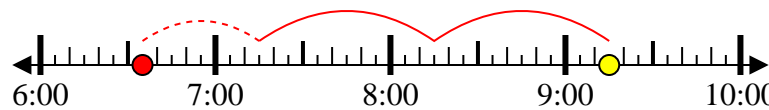
4) Start: 9:05
 Elapsed: 1 hr & 45 mins
 End: 10:50



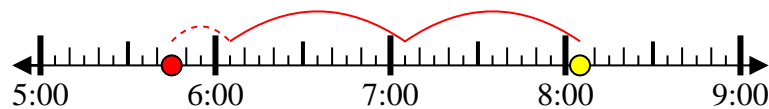
5) Start: 2:50
 Elapsed: 2 hrs & 25 mins
 End: 5:15



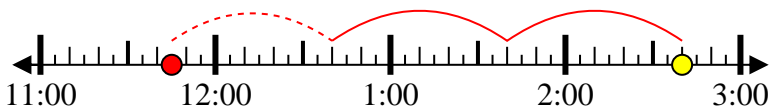
6) Start: 6:35
 Elapsed: 2 hrs & 40 mins
 End: 9:15



7) Start: 5:45
 Elapsed: 2 hrs & 20 mins
 End: 8:05



8) Start: 11:45
 Elapsed: 2 hrs & 55 mins
 End: 2:40



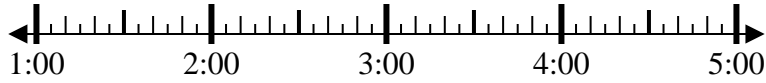
Answers

1. 9:45
2. 11:30
3. 2:45
4. 9:05
5. 2:50
6. 6:35
7. 5:45
8. 11:45



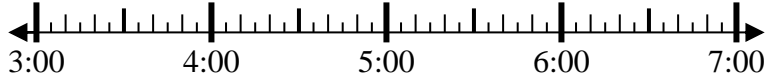
Solve each problem.

1) Start: _____
 Elapsed: 2 hrs & 10 mins
 End: 3:25



1. _____

2) Start: _____
 Elapsed: 1 hr & 30 mins
 End: 4:55



2. _____

3) Start: _____
 Elapsed: 1 hr & 30 mins
 End: 9:05



3. _____

4) Start: _____
 Elapsed: 2 hrs & 35 mins
 End: 2:15



4. _____

5) Start: _____
 Elapsed: 2 hrs & 20 mins
 End: 9:30



5. _____

6) Start: _____
 Elapsed: 2 hrs & 10 mins
 End: 7:15



6. _____

7) Start: _____
 Elapsed: 2 hrs & 20 mins
 End: 1:00



7. _____

8) Start: _____
 Elapsed: 2 hrs & 35 mins
 End: 8:50



8. _____

Answers



Solve each problem.

1) Start: 1:15
 Elapsed: 2 hrs & 10 mins
 End: 3:25



2) Start: 3:25
 Elapsed: 1 hr & 30 mins
 End: 4:55



3) Start: 7:35
 Elapsed: 1 hr & 30 mins
 End: 9:05



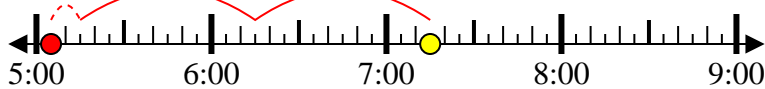
4) Start: 11:40
 Elapsed: 2 hrs & 35 mins
 End: 2:15



5) Start: 7:10
 Elapsed: 2 hrs & 20 mins
 End: 9:30



6) Start: 5:05
 Elapsed: 2 hrs & 10 mins
 End: 7:15



7) Start: 10:40
 Elapsed: 2 hrs & 20 mins
 End: 1:00



8) Start: 6:15
 Elapsed: 2 hrs & 35 mins
 End: 8:50



Answers

1. 1:15
2. 3:25
3. 7:35
4. 11:40
5. 7:10
6. 5:05
7. 10:40
8. 6:15



Solve each problem.

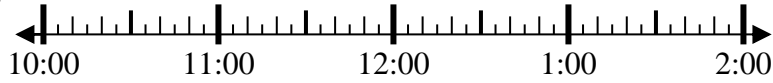
Answers

1) Start: _____
 Elapsed: 2 hrs & 40 mins
 End: 9:30



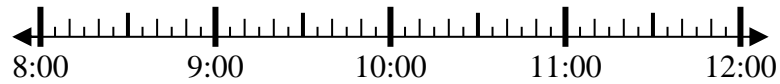
1. _____

2) Start: _____
 Elapsed: 2 hrs & 55 mins
 End: 12:55



2. _____

3) Start: _____
 Elapsed: 2 hrs & 45 mins
 End: 10:55



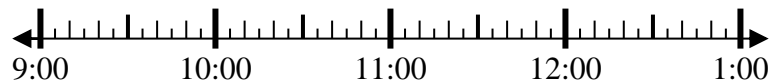
3. _____

4) Start: _____
 Elapsed: 1 hr & 45 mins
 End: 9:00



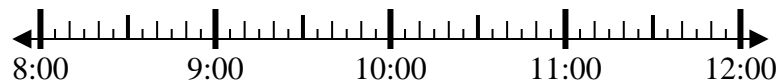
4. _____

5) Start: _____
 Elapsed: 2 hrs & 40 mins
 End: 12:00



5. _____

6) Start: _____
 Elapsed: 1 hr & 10 mins
 End: 9:25



6. _____

7) Start: _____
 Elapsed: 1 hr & 45 mins
 End: 6:55



7. _____

8) Start: _____
 Elapsed: 1 hr & 35 mins
 End: 10:25



8. _____



Solve each problem.

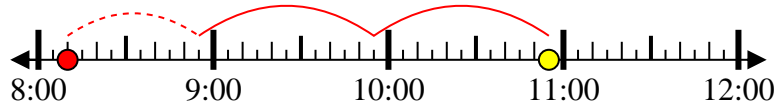
1) Start: 6:50
 Elapsed: 2 hrs & 40 mins
 End: 9:30



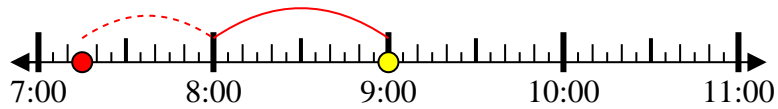
2) Start: 10:00
 Elapsed: 2 hrs & 55 mins
 End: 12:55



3) Start: 8:10
 Elapsed: 2 hrs & 45 mins
 End: 10:55



4) Start: 7:15
 Elapsed: 1 hr & 45 mins
 End: 9:00



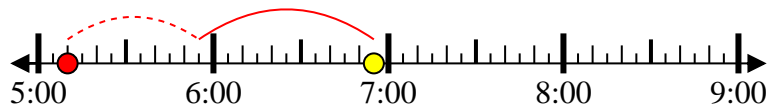
5) Start: 9:20
 Elapsed: 2 hrs & 40 mins
 End: 12:00



6) Start: 8:15
 Elapsed: 1 hr & 10 mins
 End: 9:25



7) Start: 5:10
 Elapsed: 1 hr & 45 mins
 End: 6:55



8) Start: 8:50
 Elapsed: 1 hr & 35 mins
 End: 10:25



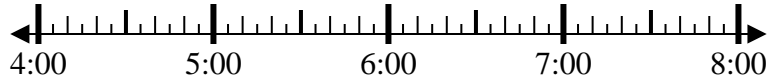
Answers

1. 6:50
2. 10:00
3. 8:10
4. 7:15
5. 9:20
6. 8:15
7. 5:10
8. 8:50



Solve each problem.

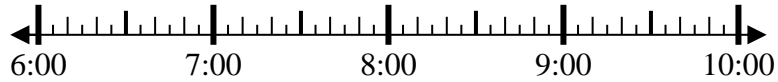
1) Start: _____
 Elapsed: 1 hr & 35 mins
 End: 5:35



2) Start: _____
 Elapsed: 2 hrs & 30 mins
 End: 6:30



3) Start: _____
 Elapsed: 1 hr & 45 mins
 End: 7:55



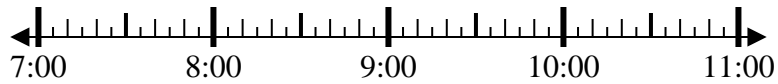
4) Start: _____
 Elapsed: 2 hrs & 50 mins
 End: 6:50



5) Start: _____
 Elapsed: 1 hr & 30 mins
 End: 8:55



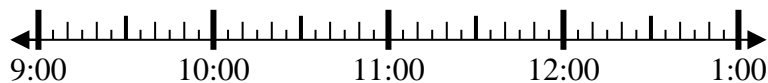
6) Start: _____
 Elapsed: 1 hr & 40 mins
 End: 9:35



7) Start: _____
 Elapsed: 1 hr & 15 mins
 End: 3:45



8) Start: _____
 Elapsed: 1 hr & 20 mins
 End: 11:00



Answers

1. _____
2. _____
3. _____
4. _____
5. _____
6. _____
7. _____
8. _____



Solve each problem.

1) Start: 4:00
 Elapsed: 1 hr & 35 mins
 End: 5:35



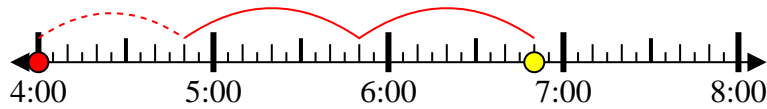
2) Start: 4:00
 Elapsed: 2 hrs & 30 mins
 End: 6:30



3) Start: 6:10
 Elapsed: 1 hr & 45 mins
 End: 7:55



4) Start: 4:00
 Elapsed: 2 hrs & 50 mins
 End: 6:50



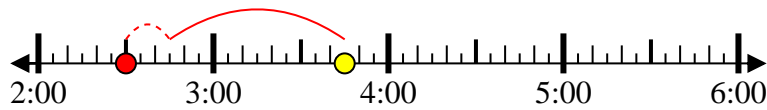
5) Start: 7:25
 Elapsed: 1 hr & 30 mins
 End: 8:55



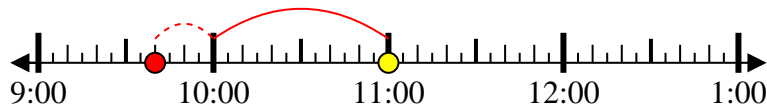
6) Start: 7:55
 Elapsed: 1 hr & 40 mins
 End: 9:35



7) Start: 2:30
 Elapsed: 1 hr & 15 mins
 End: 3:45



8) Start: 9:40
 Elapsed: 1 hr & 20 mins
 End: 11:00



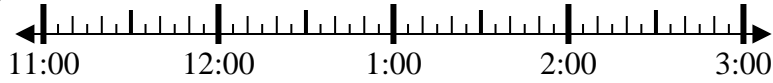
Answers

1. 4:00
2. 4:00
3. 6:10
4. 4:00
5. 7:25
6. 7:55
7. 2:30
8. 9:40



Solve each problem.

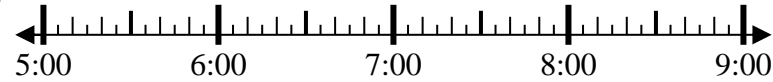
1) Start: _____
 Elapsed: 2 hrs & 45 mins
 End: 1:45



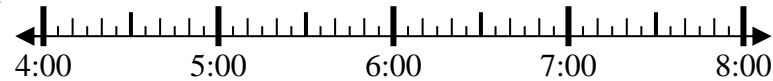
2) Start: _____
 Elapsed: 1 hr & 45 mins
 End: 1:55



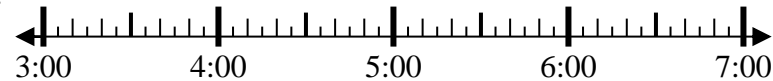
3) Start: _____
 Elapsed: 1 hr & 10 mins
 End: 6:30



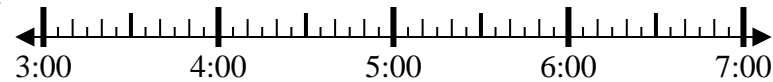
4) Start: _____
 Elapsed: 1 hr & 30 mins
 End: 5:30



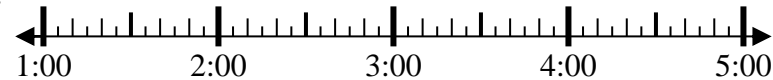
5) Start: _____
 Elapsed: 1 hr & 40 mins
 End: 5:15



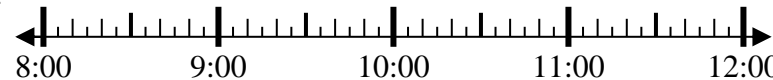
6) Start: _____
 Elapsed: 1 hr & 35 mins
 End: 5:00



7) Start: _____
 Elapsed: 2 hrs & 35 mins
 End: 3:55



8) Start: _____
 Elapsed: 2 hrs & 40 mins
 End: 11:05



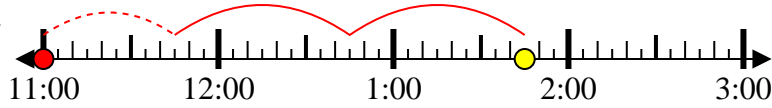
Answers

1. _____
2. _____
3. _____
4. _____
5. _____
6. _____
7. _____
8. _____



Solve each problem.

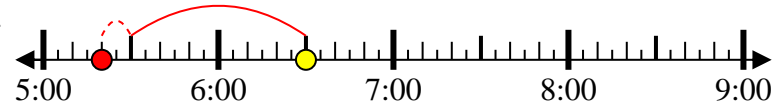
1) Start: 11:00
 Elapsed: 2 hrs & 45 mins
 End: 1:45



2) Start: 12:10
 Elapsed: 1 hr & 45 mins
 End: 1:55



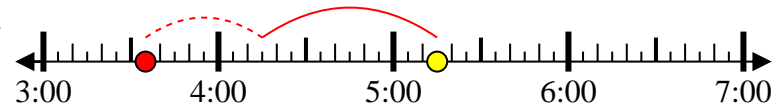
3) Start: 5:20
 Elapsed: 1 hr & 10 mins
 End: 6:30



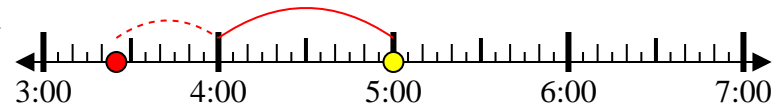
4) Start: 4:00
 Elapsed: 1 hr & 30 mins
 End: 5:30



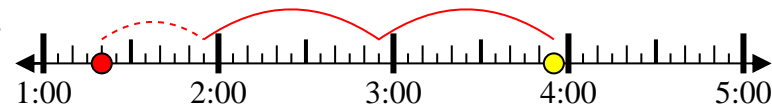
5) Start: 3:35
 Elapsed: 1 hr & 40 mins
 End: 5:15



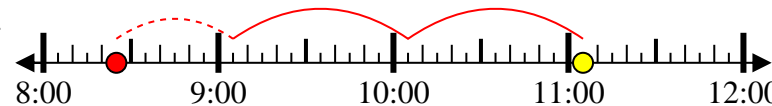
6) Start: 3:25
 Elapsed: 1 hr & 35 mins
 End: 5:00



7) Start: 1:20
 Elapsed: 2 hrs & 35 mins
 End: 3:55



8) Start: 8:25
 Elapsed: 2 hrs & 40 mins
 End: 11:05



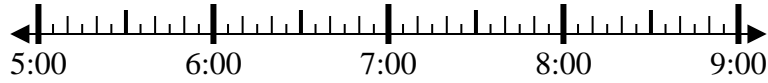
Answers

1. 11:00
2. 12:10
3. 5:20
4. 4:00
5. 3:35
6. 3:25
7. 1:20
8. 8:25



Solve each problem.

1) Start: _____
 Elapsed: 2 hrs & 25 mins
 End: 7:40



2) Start: _____
 Elapsed: 2 hrs & 50 mins
 End: 9:20



3) Start: _____
 Elapsed: 1 hr & 30 mins
 End: 7:05



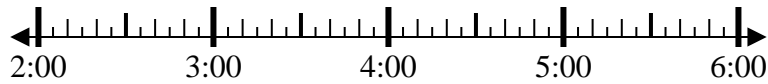
4) Start: _____
 Elapsed: 2 hrs & 40 mins
 End: 4:20



5) Start: _____
 Elapsed: 2 hrs & 45 mins
 End: 10:50



6) Start: _____
 Elapsed: 1 hr & 35 mins
 End: 4:15



7) Start: _____
 Elapsed: 1 hr & 15 mins
 End: 12:25



8) Start: _____
 Elapsed: 1 hr & 20 mins
 End: 9:40



Answers

1. _____
2. _____
3. _____
4. _____
5. _____
6. _____
7. _____
8. _____



Solve each problem.

1) Start: 5:15
 Elapsed: 2 hrs & 25 mins
 End: 7:40



2) Start: 6:30
 Elapsed: 2 hrs & 50 mins
 End: 9:20



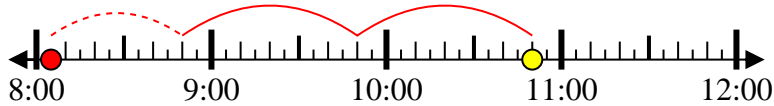
3) Start: 5:35
 Elapsed: 1 hr & 30 mins
 End: 7:05



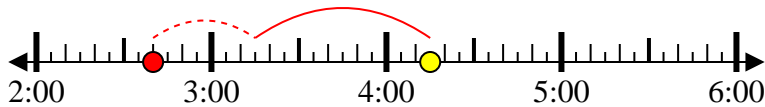
4) Start: 1:40
 Elapsed: 2 hrs & 40 mins
 End: 4:20



5) Start: 8:05
 Elapsed: 2 hrs & 45 mins
 End: 10:50



6) Start: 2:40
 Elapsed: 1 hr & 35 mins
 End: 4:15



7) Start: 11:10
 Elapsed: 1 hr & 15 mins
 End: 12:25



8) Start: 8:20
 Elapsed: 1 hr & 20 mins
 End: 9:40



Answers

1. 5:15
2. 6:30
3. 5:35
4. 1:40
5. 8:05
6. 2:40
7. 11:10
8. 8:20



Solve each problem.

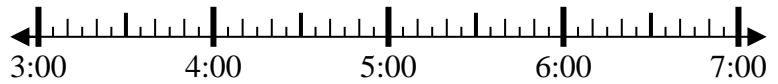
1) Start: _____
 Elapsed: 2 hrs & 35 mins
 End: 10:35



2) Start: _____
 Elapsed: 1 hr & 15 mins
 End: 8:40



3) Start: _____
 Elapsed: 2 hrs & 15 mins
 End: 5:40



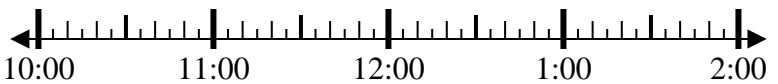
4) Start: _____
 Elapsed: 2 hrs & 15 mins
 End: 5:00



5) Start: _____
 Elapsed: 1 hr & 15 mins
 End: 7:50



6) Start: _____
 Elapsed: 1 hr & 30 mins
 End: 12:10



7) Start: _____
 Elapsed: 2 hrs & 20 mins
 End: 4:35



8) Start: _____
 Elapsed: 1 hr & 45 mins
 End: 4:35



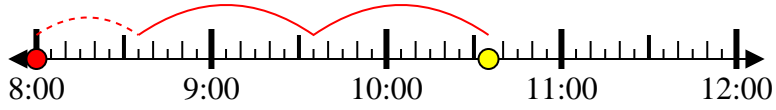
Answers

1. _____
2. _____
3. _____
4. _____
5. _____
6. _____
7. _____
8. _____



Solve each problem.

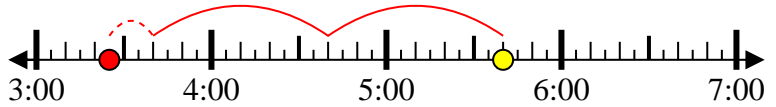
1) Start: 8:00
 Elapsed: 2 hrs & 35 mins
 End: 10:35



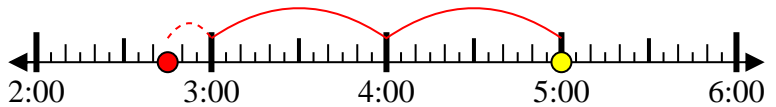
2) Start: 7:25
 Elapsed: 1 hr & 15 mins
 End: 8:40



3) Start: 3:25
 Elapsed: 2 hrs & 15 mins
 End: 5:40



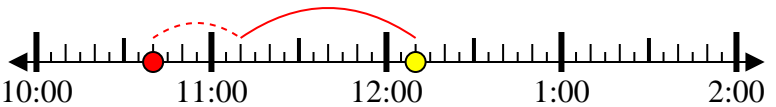
4) Start: 2:45
 Elapsed: 2 hrs & 15 mins
 End: 5:00



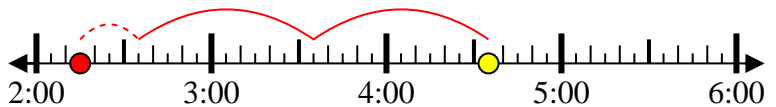
5) Start: 6:35
 Elapsed: 1 hr & 15 mins
 End: 7:50



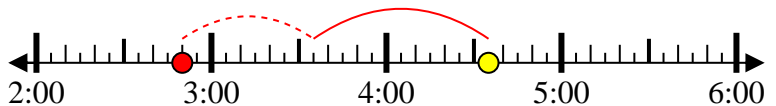
6) Start: 10:40
 Elapsed: 1 hr & 30 mins
 End: 12:10



7) Start: 2:15
 Elapsed: 2 hrs & 20 mins
 End: 4:35



8) Start: 2:50
 Elapsed: 1 hr & 45 mins
 End: 4:35



Answers

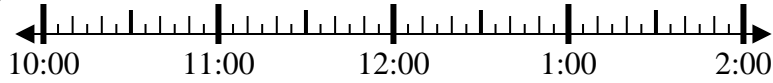
1. 8:00
2. 7:25
3. 3:25
4. 2:45
5. 6:35
6. 10:40
7. 2:15
8. 2:50



Solve each problem.

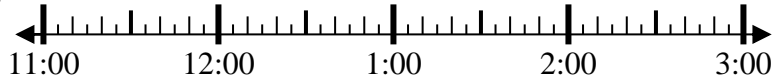
Answers

1) Start: _____
 Elapsed: 1 hr & 50 mins
 End: 12:30



1. _____

2) Start: _____
 Elapsed: 2 hrs & 50 mins
 End: 2:00



2. _____

3) Start: _____
 Elapsed: 1 hr & 50 mins
 End: 1:35



3. _____

4) Start: _____
 Elapsed: 2 hrs & 50 mins
 End: 4:50



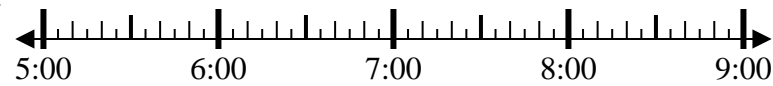
4. _____

5) Start: _____
 Elapsed: 2 hrs & 50 mins
 End: 10:30



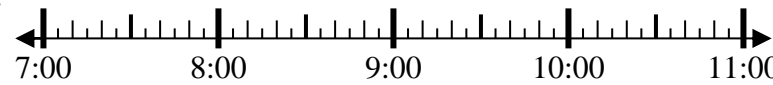
5. _____

6) Start: _____
 Elapsed: 1 hr & 50 mins
 End: 7:20



6. _____

7) Start: _____
 Elapsed: 2 hrs & 40 mins
 End: 10:00



7. _____

8) Start: _____
 Elapsed: 2 hrs & 30 mins
 End: 8:00



8. _____

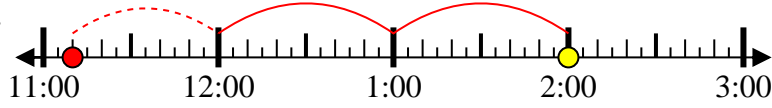


Solve each problem.

1) Start: 10:40
 Elapsed: 1 hr & 50 mins
 End: 12:30



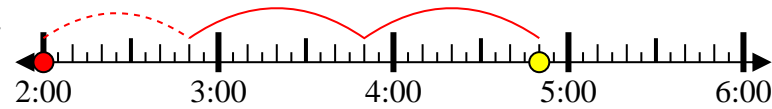
2) Start: 11:10
 Elapsed: 2 hrs & 50 mins
 End: 2:00



3) Start: 11:45
 Elapsed: 1 hr & 50 mins
 End: 1:35



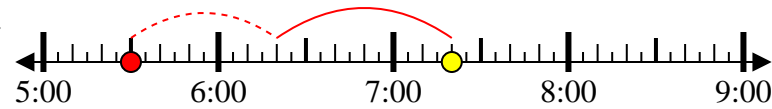
4) Start: 2:00
 Elapsed: 2 hrs & 50 mins
 End: 4:50



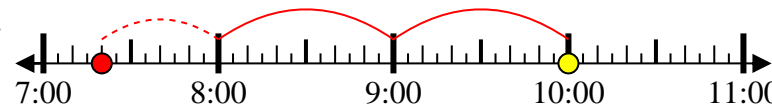
5) Start: 7:40
 Elapsed: 2 hrs & 50 mins
 End: 10:30



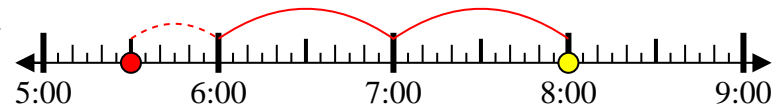
6) Start: 5:30
 Elapsed: 1 hr & 50 mins
 End: 7:20



7) Start: 7:20
 Elapsed: 2 hrs & 40 mins
 End: 10:00



8) Start: 5:30
 Elapsed: 2 hrs & 30 mins
 End: 8:00



Answers

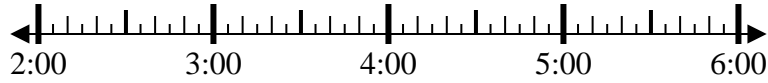
1. 10:40
2. 11:10
3. 11:45
4. 2:00
5. 7:40
6. 5:30
7. 7:20
8. 5:30



Solve each problem.

Answers

1) Start: _____
 Elapsed: 2 hrs & 10 mins
 End: 4:30



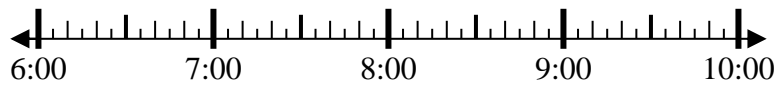
1. _____

2) Start: _____
 Elapsed: 2 hrs & 40 mins
 End: 10:25



2. _____

3) Start: _____
 Elapsed: 1 hr & 35 mins
 End: 8:25



3. _____

4) Start: _____
 Elapsed: 2 hrs & 35 mins
 End: 4:10



4. _____

5) Start: _____
 Elapsed: 1 hr & 25 mins
 End: 1:20



5. _____

6) Start: _____
 Elapsed: 2 hrs & 35 mins
 End: 4:25



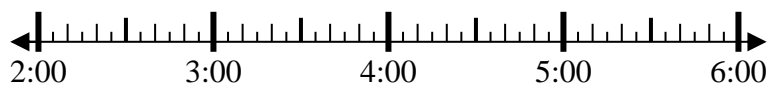
6. _____

7) Start: _____
 Elapsed: 1 hr & 10 mins
 End: 2:30



7. _____

8) Start: _____
 Elapsed: 1 hr & 30 mins
 End: 3:50



8. _____



Solve each problem.

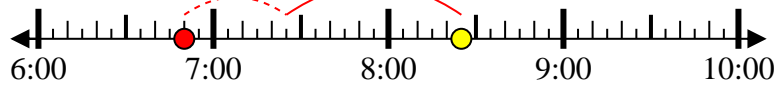
1) Start: 2:20
 Elapsed: 2 hrs & 10 mins
 End: 4:30



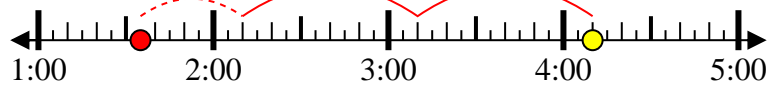
2) Start: 7:45
 Elapsed: 2 hrs & 40 mins
 End: 10:25



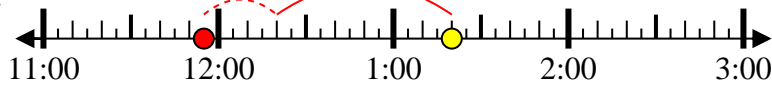
3) Start: 6:50
 Elapsed: 1 hr & 35 mins
 End: 8:25



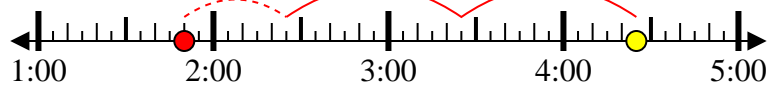
4) Start: 1:35
 Elapsed: 2 hrs & 35 mins
 End: 4:10



5) Start: 11:55
 Elapsed: 1 hr & 25 mins
 End: 1:20



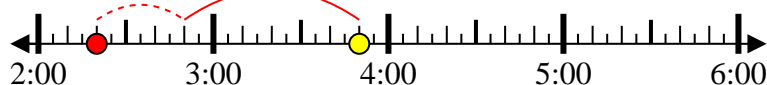
6) Start: 1:50
 Elapsed: 2 hrs & 35 mins
 End: 4:25



7) Start: 1:20
 Elapsed: 1 hr & 10 mins
 End: 2:30



8) Start: 2:20
 Elapsed: 1 hr & 30 mins
 End: 3:50



Answers

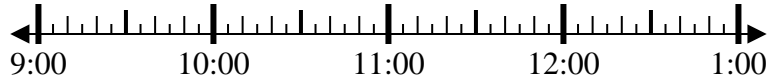
1. 2:20
2. 7:45
3. 6:50
4. 1:35
5. 11:55
6. 1:50
7. 1:20
8. 2:20



Solve each problem.

Answers

1) Start: _____
 Elapsed: 2 hrs & 20 mins
 End: 11:55



1. _____

2) Start: _____
 Elapsed: 1 hr & 50 mins
 End: 4:35



2. _____

3) Start: _____
 Elapsed: 2 hrs & 50 mins
 End: 4:35



3. _____

4) Start: _____
 Elapsed: 2 hrs & 10 mins
 End: 6:45



4. _____

5) Start: _____
 Elapsed: 2 hrs & 30 mins
 End: 7:15



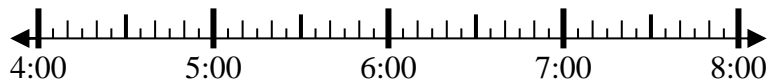
5. _____

6) Start: _____
 Elapsed: 1 hr & 10 mins
 End: 12:15



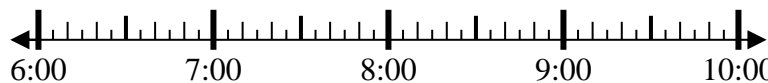
6. _____

7) Start: _____
 Elapsed: 2 hrs & 45 mins
 End: 6:55



7. _____

8) Start: _____
 Elapsed: 2 hrs & 30 mins
 End: 9:25



8. _____

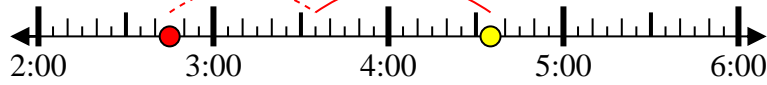


Solve each problem.

1) Start: 9:35
 Elapsed: 2 hrs & 20 mins
 End: 11:55



2) Start: 2:45
 Elapsed: 1 hr & 50 mins
 End: 4:35



3) Start: 1:45
 Elapsed: 2 hrs & 50 mins
 End: 4:35



4) Start: 4:35
 Elapsed: 2 hrs & 10 mins
 End: 6:45



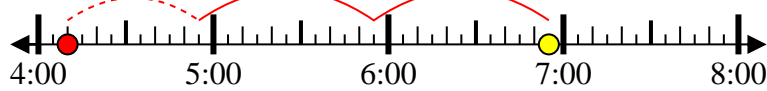
5) Start: 4:45
 Elapsed: 2 hrs & 30 mins
 End: 7:15



6) Start: 11:05
 Elapsed: 1 hr & 10 mins
 End: 12:15



7) Start: 4:10
 Elapsed: 2 hrs & 45 mins
 End: 6:55



8) Start: 6:55
 Elapsed: 2 hrs & 30 mins
 End: 9:25



Answers

1. 9:35
2. 2:45
3. 1:45
4. 4:35
5. 4:45
6. 11:05
7. 4:10
8. 6:55