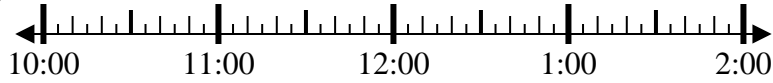


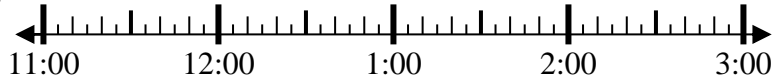


Solve each problem.

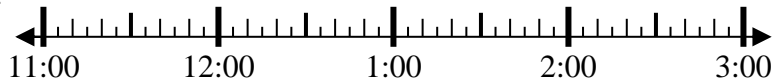
1) Start: _____
 Elapsed: 1 hr & 50 mins
 End: 12:30



2) Start: _____
 Elapsed: 2 hrs & 50 mins
 End: 2:00



3) Start: _____
 Elapsed: 1 hr & 50 mins
 End: 1:35



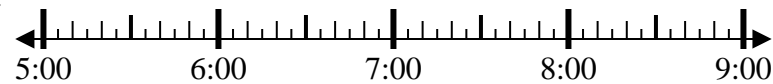
4) Start: _____
 Elapsed: 2 hrs & 50 mins
 End: 4:50



5) Start: _____
 Elapsed: 2 hrs & 50 mins
 End: 10:30



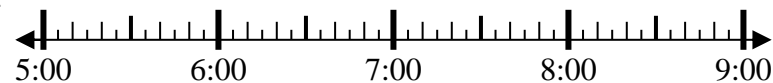
6) Start: _____
 Elapsed: 1 hr & 50 mins
 End: 7:20



7) Start: _____
 Elapsed: 2 hrs & 40 mins
 End: 10:00



8) Start: _____
 Elapsed: 2 hrs & 30 mins
 End: 8:00



Answers

1. _____
2. _____
3. _____
4. _____
5. _____
6. _____
7. _____
8. _____

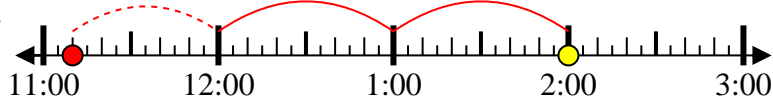


Solve each problem.

1) Start: 10:40
 Elapsed: 1 hr & 50 mins
 End: 12:30



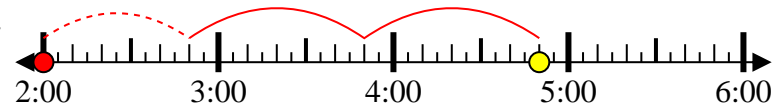
2) Start: 11:10
 Elapsed: 2 hrs & 50 mins
 End: 2:00



3) Start: 11:45
 Elapsed: 1 hr & 50 mins
 End: 1:35



4) Start: 2:00
 Elapsed: 2 hrs & 50 mins
 End: 4:50



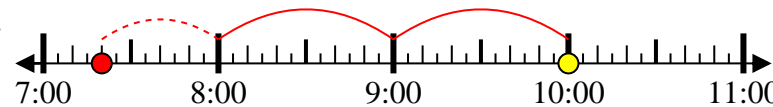
5) Start: 7:40
 Elapsed: 2 hrs & 50 mins
 End: 10:30



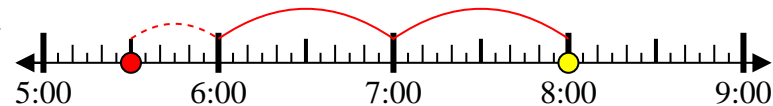
6) Start: 5:30
 Elapsed: 1 hr & 50 mins
 End: 7:20



7) Start: 7:20
 Elapsed: 2 hrs & 40 mins
 End: 10:00



8) Start: 5:30
 Elapsed: 2 hrs & 30 mins
 End: 8:00



Answers

1. 10:40
2. 11:10
3. 11:45
4. 2:00
5. 7:40
6. 5:30
7. 7:20
8. 5:30