



Solve each problem.

1) Start: _____
 Elapsed: 2 hrs & 35 mins
 End: 10:35



2) Start: _____
 Elapsed: 1 hr & 15 mins
 End: 8:40



3) Start: _____
 Elapsed: 2 hrs & 15 mins
 End: 5:40



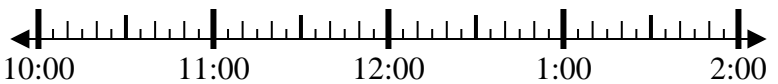
4) Start: _____
 Elapsed: 2 hrs & 15 mins
 End: 5:00



5) Start: _____
 Elapsed: 1 hr & 15 mins
 End: 7:50



6) Start: _____
 Elapsed: 1 hr & 30 mins
 End: 12:10



7) Start: _____
 Elapsed: 2 hrs & 20 mins
 End: 4:35



8) Start: _____
 Elapsed: 1 hr & 45 mins
 End: 4:35



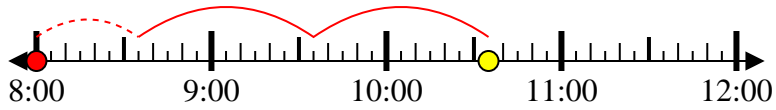
Answers

1. _____
2. _____
3. _____
4. _____
5. _____
6. _____
7. _____
8. _____

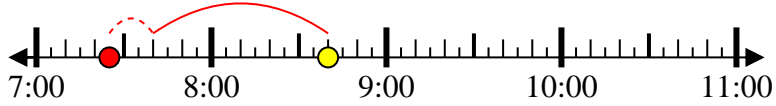


Solve each problem.

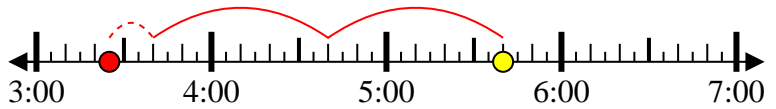
1) Start: 8:00
 Elapsed: 2 hrs & 35 mins
 End: 10:35



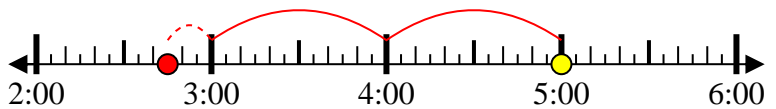
2) Start: 7:25
 Elapsed: 1 hr & 15 mins
 End: 8:40



3) Start: 3:25
 Elapsed: 2 hrs & 15 mins
 End: 5:40



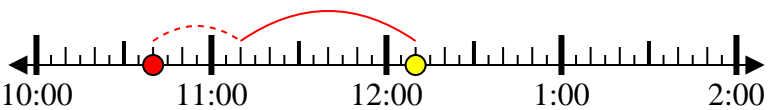
4) Start: 2:45
 Elapsed: 2 hrs & 15 mins
 End: 5:00



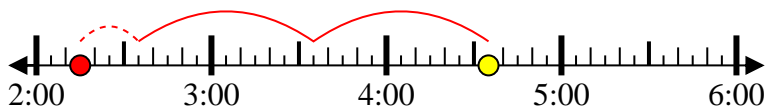
5) Start: 6:35
 Elapsed: 1 hr & 15 mins
 End: 7:50



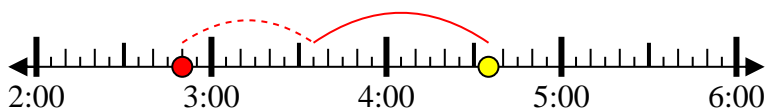
6) Start: 10:40
 Elapsed: 1 hr & 30 mins
 End: 12:10



7) Start: 2:15
 Elapsed: 2 hrs & 20 mins
 End: 4:35



8) Start: 2:50
 Elapsed: 1 hr & 45 mins
 End: 4:35



Answers

1. 8:00
2. 7:25
3. 3:25
4. 2:45
5. 6:35
6. 10:40
7. 2:15
8. 2:50