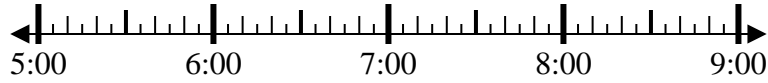




Solve each problem.

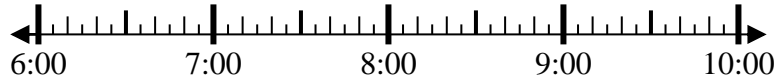
Answers

1) Start: _____
 Elapsed: 2 hrs & 25 mins
 End: 7:40



1. _____

2) Start: _____
 Elapsed: 2 hrs & 50 mins
 End: 9:20



2. _____

3) Start: _____
 Elapsed: 1 hr & 30 mins
 End: 7:05



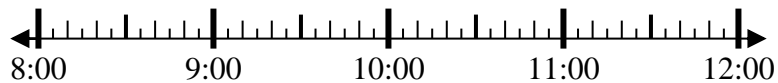
3. _____

4) Start: _____
 Elapsed: 2 hrs & 40 mins
 End: 4:20



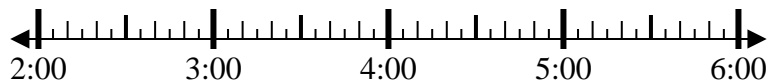
4. _____

5) Start: _____
 Elapsed: 2 hrs & 45 mins
 End: 10:50



5. _____

6) Start: _____
 Elapsed: 1 hr & 35 mins
 End: 4:15



6. _____

7) Start: _____
 Elapsed: 1 hr & 15 mins
 End: 12:25



7. _____

8) Start: _____
 Elapsed: 1 hr & 20 mins
 End: 9:40



8. _____



Solve each problem.

1) Start: 5:15
 Elapsed: 2 hrs & 25 mins
 End: 7:40



2) Start: 6:30
 Elapsed: 2 hrs & 50 mins
 End: 9:20



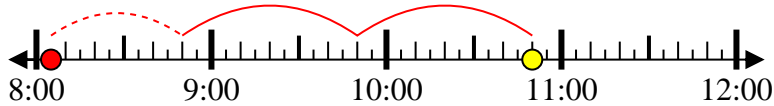
3) Start: 5:35
 Elapsed: 1 hr & 30 mins
 End: 7:05



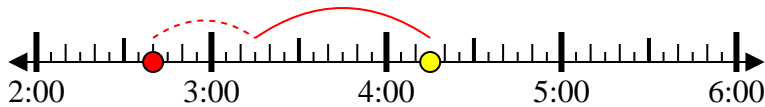
4) Start: 1:40
 Elapsed: 2 hrs & 40 mins
 End: 4:20



5) Start: 8:05
 Elapsed: 2 hrs & 45 mins
 End: 10:50



6) Start: 2:40
 Elapsed: 1 hr & 35 mins
 End: 4:15



7) Start: 11:10
 Elapsed: 1 hr & 15 mins
 End: 12:25



8) Start: 8:20
 Elapsed: 1 hr & 20 mins
 End: 9:40



Answers

1. 5:15
2. 6:30
3. 5:35
4. 1:40
5. 8:05
6. 2:40
7. 11:10
8. 8:20