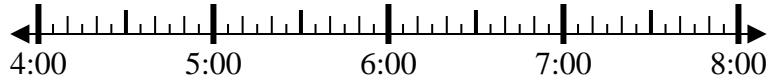




Solve each problem.

Answers

1) Start: _____
 Elapsed: 1 hr & 35 mins
 End: 5:35



1. _____

2) Start: _____
 Elapsed: 2 hrs & 30 mins
 End: 6:30



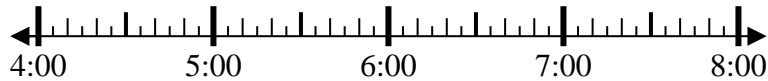
2. _____

3) Start: _____
 Elapsed: 1 hr & 45 mins
 End: 7:55



3. _____

4) Start: _____
 Elapsed: 2 hrs & 50 mins
 End: 6:50



4. _____

5) Start: _____
 Elapsed: 1 hr & 30 mins
 End: 8:55



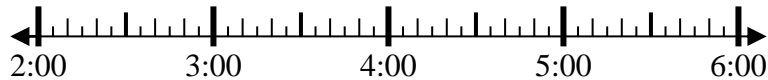
5. _____

6) Start: _____
 Elapsed: 1 hr & 40 mins
 End: 9:35



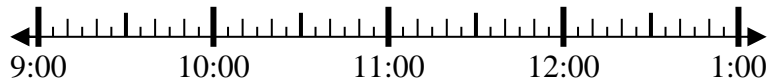
6. _____

7) Start: _____
 Elapsed: 1 hr & 15 mins
 End: 3:45



7. _____

8) Start: _____
 Elapsed: 1 hr & 20 mins
 End: 11:00



8. _____



Solve each problem.

1) Start: 4:00
 Elapsed: 1 hr & 35 mins
 End: 5:35



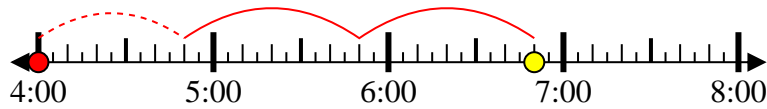
2) Start: 4:00
 Elapsed: 2 hrs & 30 mins
 End: 6:30



3) Start: 6:10
 Elapsed: 1 hr & 45 mins
 End: 7:55



4) Start: 4:00
 Elapsed: 2 hrs & 50 mins
 End: 6:50



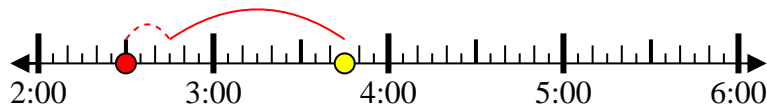
5) Start: 7:25
 Elapsed: 1 hr & 30 mins
 End: 8:55



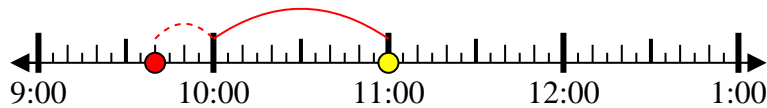
6) Start: 7:55
 Elapsed: 1 hr & 40 mins
 End: 9:35



7) Start: 2:30
 Elapsed: 1 hr & 15 mins
 End: 3:45



8) Start: 9:40
 Elapsed: 1 hr & 20 mins
 End: 11:00



Answers

1. 4:00
2. 4:00
3. 6:10
4. 4:00
5. 7:25
6. 7:55
7. 2:30
8. 9:40