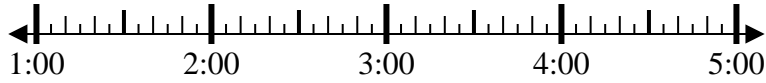


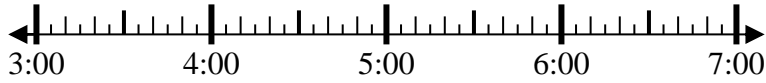


Solve each problem.

1) Start: _____
 Elapsed: 2 hrs & 10 mins
 End: 3:25



2) Start: _____
 Elapsed: 1 hr & 30 mins
 End: 4:55



3) Start: _____
 Elapsed: 1 hr & 30 mins
 End: 9:05



4) Start: _____
 Elapsed: 2 hrs & 35 mins
 End: 2:15



5) Start: _____
 Elapsed: 2 hrs & 20 mins
 End: 9:30



6) Start: _____
 Elapsed: 2 hrs & 10 mins
 End: 7:15



7) Start: _____
 Elapsed: 2 hrs & 20 mins
 End: 1:00



8) Start: _____
 Elapsed: 2 hrs & 35 mins
 End: 8:50



Answers

1. _____
2. _____
3. _____
4. _____
5. _____
6. _____
7. _____
8. _____



Solve each problem.

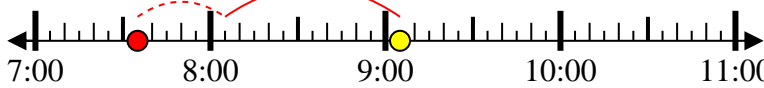
1) Start: 1:15
 Elapsed: 2 hrs & 10 mins
 End: 3:25



2) Start: 3:25
 Elapsed: 1 hr & 30 mins
 End: 4:55



3) Start: 7:35
 Elapsed: 1 hr & 30 mins
 End: 9:05



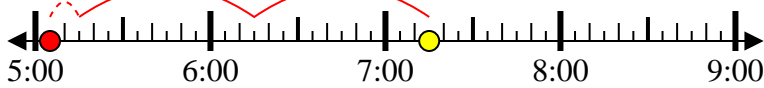
4) Start: 11:40
 Elapsed: 2 hrs & 35 mins
 End: 2:15



5) Start: 7:10
 Elapsed: 2 hrs & 20 mins
 End: 9:30



6) Start: 5:05
 Elapsed: 2 hrs & 10 mins
 End: 7:15



7) Start: 10:40
 Elapsed: 2 hrs & 20 mins
 End: 1:00



8) Start: 6:15
 Elapsed: 2 hrs & 35 mins
 End: 8:50



Answers

1. 1:15
2. 3:25
3. 7:35
4. 11:40
5. 7:10
6. 5:05
7. 10:40
8. 6:15