

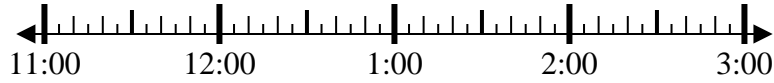


Solve each problem.

1) Start: 11:40

Elapsed: 1 hr & 40 mins

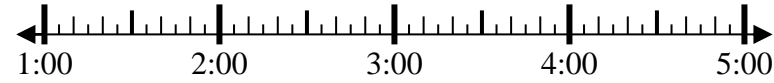
End: \_\_\_\_\_



2) Start: 1:25

Elapsed: 2 hrs & 40 mins

End: \_\_\_\_\_



3) Start: 7:40

Elapsed: 1 hr & 35 mins

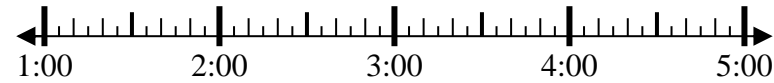
End: \_\_\_\_\_



4) Start: 1:15

Elapsed: 2 hrs & 50 mins

End: \_\_\_\_\_



5) Start: 7:10

Elapsed: 2 hrs & 35 mins

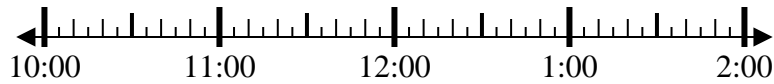
End: \_\_\_\_\_



6) Start: 10:20

Elapsed: 1 hr & 10 mins

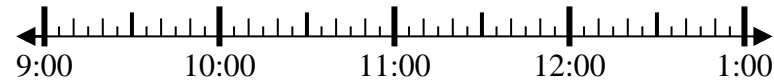
End: \_\_\_\_\_



7) Start: 9:50

Elapsed: 2 hrs & 25 mins

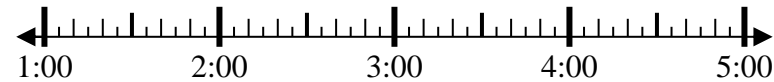
End: \_\_\_\_\_



8) Start: 1:25

Elapsed: 1 hr & 10 mins

End: \_\_\_\_\_



Answers

1. \_\_\_\_\_
2. \_\_\_\_\_
3. \_\_\_\_\_
4. \_\_\_\_\_
5. \_\_\_\_\_
6. \_\_\_\_\_
7. \_\_\_\_\_
8. \_\_\_\_\_



Solve each problem.

1) Start: 11:40

Elapsed: 1 hr & 40 mins

End: 1:20



2) Start: 1:25

Elapsed: 2 hrs & 40 mins

End: 4:05



3) Start: 7:40

Elapsed: 1 hr & 35 mins

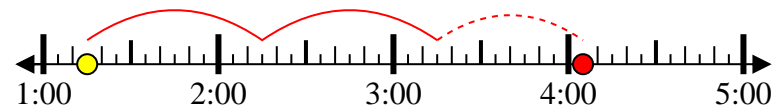
End: 9:15



4) Start: 1:15

Elapsed: 2 hrs & 50 mins

End: 4:05



5) Start: 7:10

Elapsed: 2 hrs & 35 mins

End: 9:45



6) Start: 10:20

Elapsed: 1 hr & 10 mins

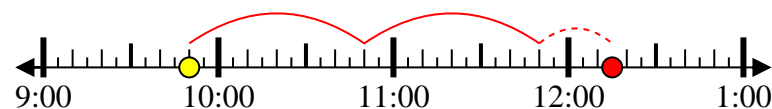
End: 11:30



7) Start: 9:50

Elapsed: 2 hrs & 25 mins

End: 12:15



8) Start: 1:25

Elapsed: 1 hr & 10 mins

End: 2:35



Answers

1. 1:20

2. 4:05

3. 9:15

4. 4:05

5. 9:45

6. 11:30

7. 12:15

8. 2:35