

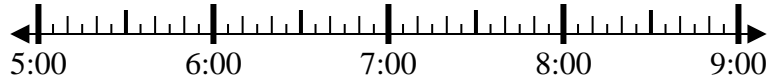


Solve each problem.

1) Start: 5:40

Elapsed: 1 hr & 15 mins

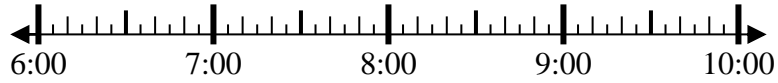
End: _____



2) Start: 6:40

Elapsed: 1 hr & 30 mins

End: _____



3) Start: 7:40

Elapsed: 2 hrs & 40 mins

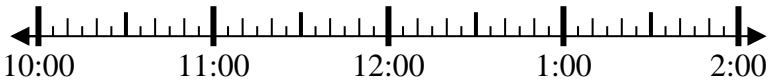
End: _____



4) Start: 10:05

Elapsed: 1 hr & 30 mins

End: _____



5) Start: 10:20

Elapsed: 2 hrs & 30 mins

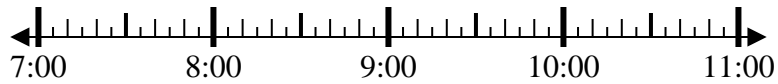
End: _____



6) Start: 7:50

Elapsed: 1 hr & 35 mins

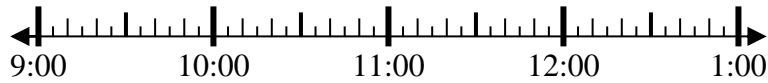
End: _____



7) Start: 9:20

Elapsed: 1 hr & 20 mins

End: _____



8) Start: 6:50

Elapsed: 1 hr & 30 mins

End: _____



Answers

1. _____
2. _____
3. _____
4. _____
5. _____
6. _____
7. _____
8. _____



Solve each problem.

1) Start: 5:40

Elapsed: 1 hr & 15 mins

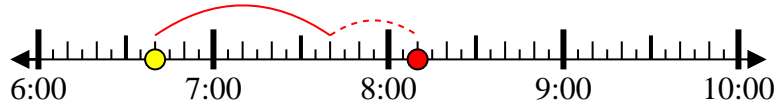
End: 6:55



2) Start: 6:40

Elapsed: 1 hr & 30 mins

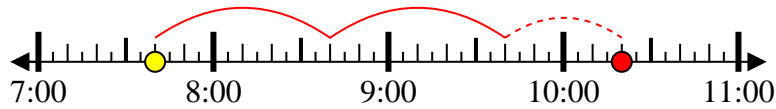
End: 8:10



3) Start: 7:40

Elapsed: 2 hrs & 40 mins

End: 10:20



4) Start: 10:05

Elapsed: 1 hr & 30 mins

End: 11:35



5) Start: 10:20

Elapsed: 2 hrs & 30 mins

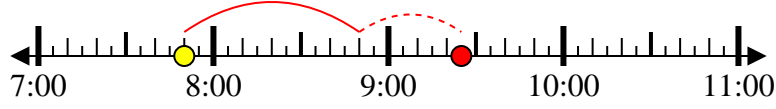
End: 12:50



6) Start: 7:50

Elapsed: 1 hr & 35 mins

End: 9:25



7) Start: 9:20

Elapsed: 1 hr & 20 mins

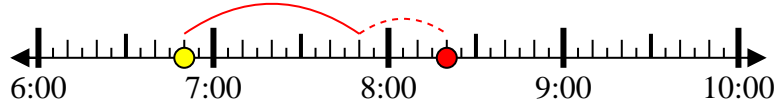
End: 10:40



8) Start: 6:50

Elapsed: 1 hr & 30 mins

End: 8:20



Answers

1. 6:55

2. 8:10

3. 10:20

4. 11:35

5. 12:50

6. 9:25

7. 10:40

8. 8:20