

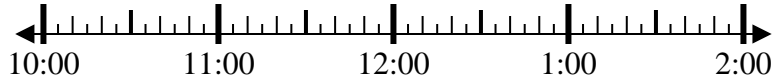


Solve each problem.

1) Start: 10:05

Elapsed: 2 hrs & 50 mins

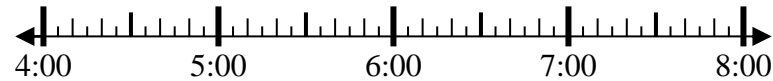
End: \_\_\_\_\_



2) Start: 4:50

Elapsed: 2 hrs & 25 mins

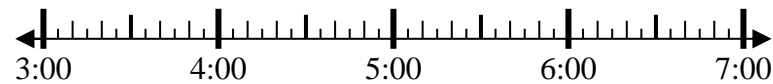
End: \_\_\_\_\_



3) Start: 3:15

Elapsed: 2 hrs & 25 mins

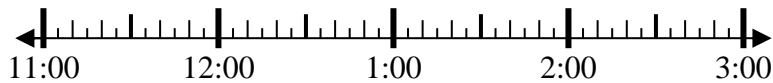
End: \_\_\_\_\_



4) Start: 11:40

Elapsed: 1 hr & 55 mins

End: \_\_\_\_\_



5) Start: 2:15

Elapsed: 2 hrs & 50 mins

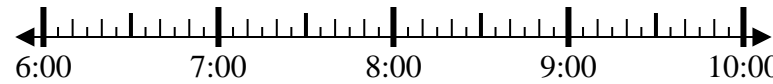
End: \_\_\_\_\_



6) Start: 6:15

Elapsed: 1 hr & 30 mins

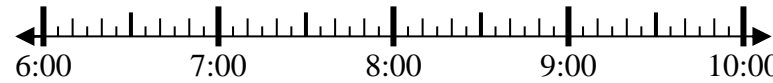
End: \_\_\_\_\_



7) Start: 6:50

Elapsed: 1 hr & 20 mins

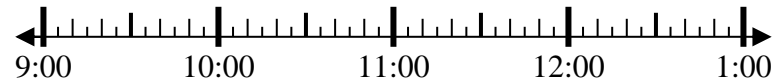
End: \_\_\_\_\_



8) Start: 9:20

Elapsed: 1 hr & 35 mins

End: \_\_\_\_\_



Answers

1. \_\_\_\_\_
2. \_\_\_\_\_
3. \_\_\_\_\_
4. \_\_\_\_\_
5. \_\_\_\_\_
6. \_\_\_\_\_
7. \_\_\_\_\_
8. \_\_\_\_\_



Solve each problem.

1) Start: 10:05

Elapsed: 2 hrs & 50 mins

End: 12:55



2) Start: 4:50

Elapsed: 2 hrs & 25 mins

End: 7:15



3) Start: 3:15

Elapsed: 2 hrs & 25 mins

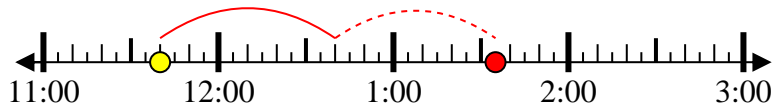
End: 5:40



4) Start: 11:40

Elapsed: 1 hr & 55 mins

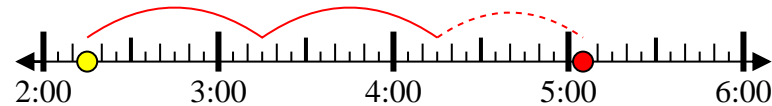
End: 1:35



5) Start: 2:15

Elapsed: 2 hrs & 50 mins

End: 5:05



6) Start: 6:15

Elapsed: 1 hr & 30 mins

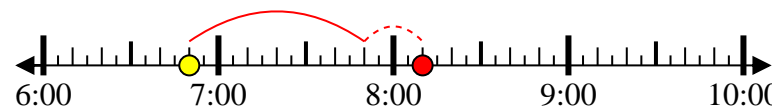
End: 7:45



7) Start: 6:50

Elapsed: 1 hr & 20 mins

End: 8:10



8) Start: 9:20

Elapsed: 1 hr & 35 mins

End: 10:55



Answers

1. 12:55
2. 7:15
3. 5:40
4. 1:35
5. 5:05
6. 7:45
7. 8:10
8. 10:55