

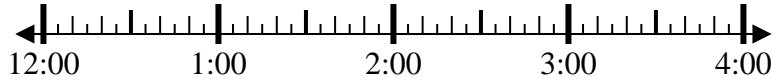


Solve each problem.

1) Start: 12:30

Elapsed: 2 hrs & 30 mins

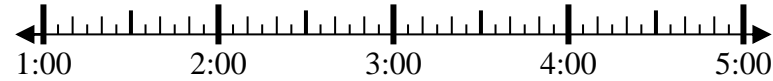
End: \_\_\_\_\_



2) Start: 1:00

Elapsed: 2 hrs & 25 mins

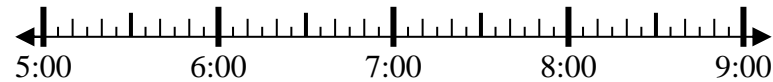
End: \_\_\_\_\_



3) Start: 5:30

Elapsed: 1 hr & 20 mins

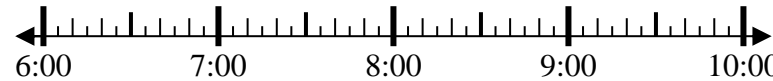
End: \_\_\_\_\_



4) Start: 6:50

Elapsed: 1 hr & 30 mins

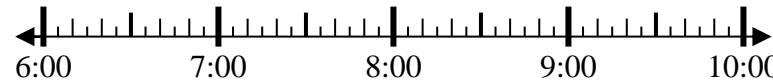
End: \_\_\_\_\_



5) Start: 6:15

Elapsed: 1 hr & 20 mins

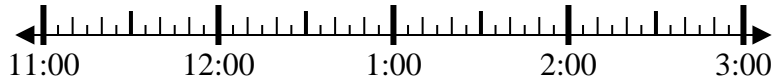
End: \_\_\_\_\_



6) Start: 11:25

Elapsed: 1 hr & 50 mins

End: \_\_\_\_\_



7) Start: 11:25

Elapsed: 2 hrs & 30 mins

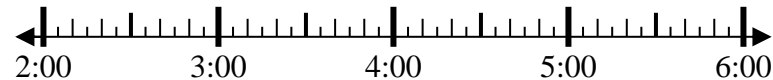
End: \_\_\_\_\_



8) Start: 2:10

Elapsed: 2 hrs & 20 mins

End: \_\_\_\_\_



Answers

1. \_\_\_\_\_
2. \_\_\_\_\_
3. \_\_\_\_\_
4. \_\_\_\_\_
5. \_\_\_\_\_
6. \_\_\_\_\_
7. \_\_\_\_\_
8. \_\_\_\_\_



Solve each problem.

1) Start: 12:30

Elapsed: 2 hrs & 30 mins

End: 3:00



2) Start: 1:00

Elapsed: 2 hrs & 25 mins

End: 3:25



3) Start: 5:30

Elapsed: 1 hr & 20 mins

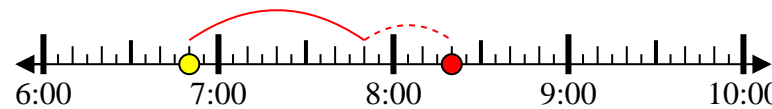
End: 6:50



4) Start: 6:50

Elapsed: 1 hr & 30 mins

End: 8:20



5) Start: 6:15

Elapsed: 1 hr & 20 mins

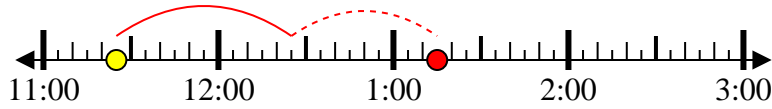
End: 7:35



6) Start: 11:25

Elapsed: 1 hr & 50 mins

End: 1:15



7) Start: 11:25

Elapsed: 2 hrs & 30 mins

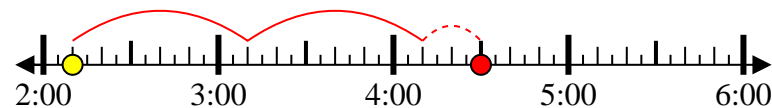
End: 1:55



8) Start: 2:10

Elapsed: 2 hrs & 20 mins

End: 4:30



Answers

1. 3:00

2. 3:25

3. 6:50

4. 8:20

5. 7:35

6. 1:15

7. 1:55

8. 4:30