

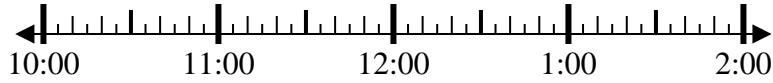


Solve each problem.

1) Start: 10:15

Elapsed: 2 hrs & 20 mins

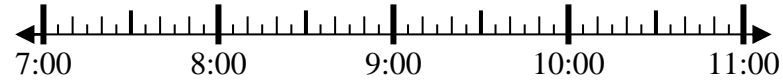
End: _____



2) Start: 7:50

Elapsed: 2 hrs & 10 mins

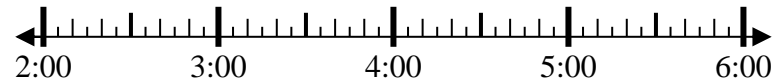
End: _____



3) Start: 2:10

Elapsed: 2 hrs & 30 mins

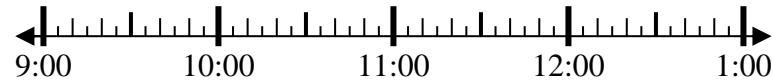
End: _____



4) Start: 9:20

Elapsed: 2 hrs & 45 mins

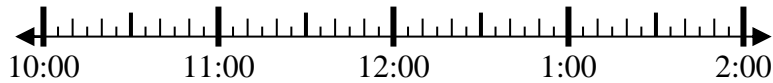
End: _____



5) Start: 10:00

Elapsed: 1 hr & 20 mins

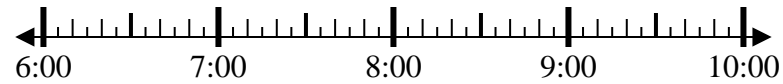
End: _____



6) Start: 6:20

Elapsed: 1 hr & 50 mins

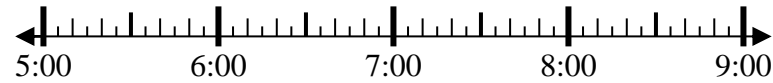
End: _____



7) Start: 5:15

Elapsed: 1 hr & 20 mins

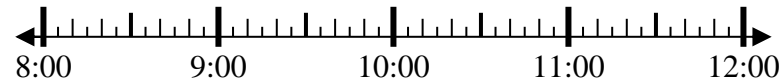
End: _____



8) Start: 8:50

Elapsed: 1 hr & 15 mins

End: _____



Answers

1. _____
2. _____
3. _____
4. _____
5. _____
6. _____
7. _____
8. _____



Solve each problem.

1) Start: 10:15

Elapsed: 2 hrs & 20 mins

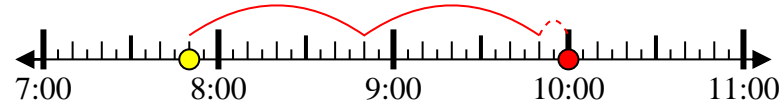
End: 12:35



2) Start: 7:50

Elapsed: 2 hrs & 10 mins

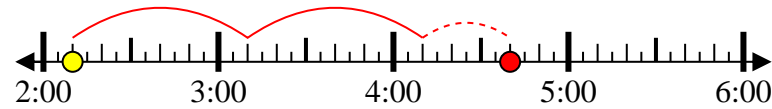
End: 10:00



3) Start: 2:10

Elapsed: 2 hrs & 30 mins

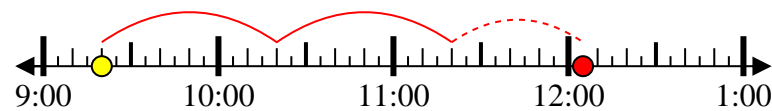
End: 4:40



4) Start: 9:20

Elapsed: 2 hrs & 45 mins

End: 12:05



5) Start: 10:00

Elapsed: 1 hr & 20 mins

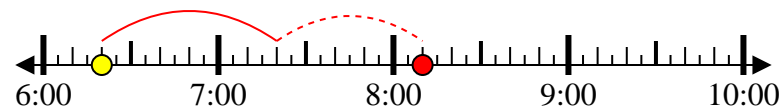
End: 11:20



6) Start: 6:20

Elapsed: 1 hr & 50 mins

End: 8:10



7) Start: 5:15

Elapsed: 1 hr & 20 mins

End: 6:35



8) Start: 8:50

Elapsed: 1 hr & 15 mins

End: 10:05



Answers

1. 12:35
2. 10:00
3. 4:40
4. 12:05
5. 11:20
6. 8:10
7. 6:35
8. 10:05