



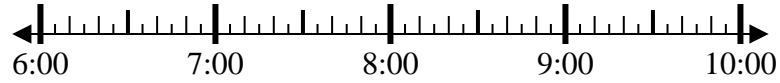
Solve each problem.

Answers

1) Start: 6:45

Elapsed: 1 hr & 25 mins

End: _____

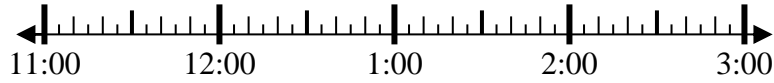


1. _____

2) Start: 11:05

Elapsed: 1 hr & 50 mins

End: _____

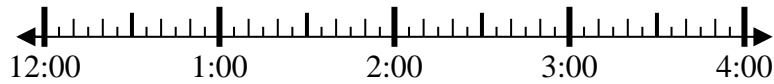


2. _____

3) Start: 12:00

Elapsed: 2 hrs & 20 mins

End: _____

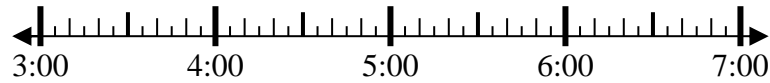


3. _____

4) Start: 3:10

Elapsed: 1 hr & 50 mins

End: _____



4. _____

5) Start: 4:20

Elapsed: 1 hr & 30 mins

End: _____

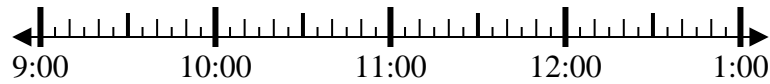


5. _____

6) Start: 9:10

Elapsed: 1 hr & 15 mins

End: _____

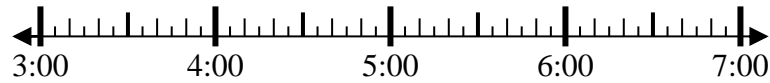


6. _____

7) Start: 3:30

Elapsed: 2 hrs & 40 mins

End: _____

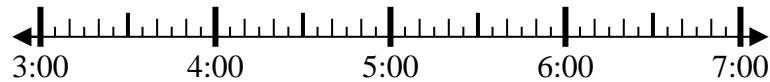


7. _____

8) Start: 3:55

Elapsed: 2 hrs & 25 mins

End: _____



8. _____



Solve each problem.

1) Start: 6:45

Elapsed: 1 hr & 25 mins

End: 8:10



2) Start: 11:05

Elapsed: 1 hr & 50 mins

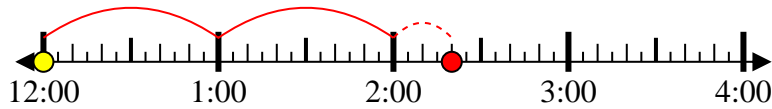
End: 12:55



3) Start: 12:00

Elapsed: 2 hrs & 20 mins

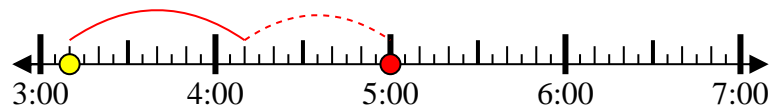
End: 2:20



4) Start: 3:10

Elapsed: 1 hr & 50 mins

End: 5:00



5) Start: 4:20

Elapsed: 1 hr & 30 mins

End: 5:50



6) Start: 9:10

Elapsed: 1 hr & 15 mins

End: 10:25



7) Start: 3:30

Elapsed: 2 hrs & 40 mins

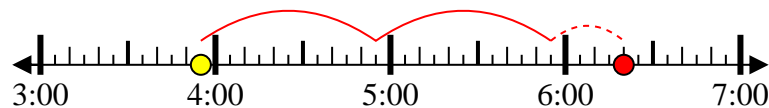
End: 6:10



8) Start: 3:55

Elapsed: 2 hrs & 25 mins

End: 6:20



Answers

1. 8:10
2. 12:55
3. 2:20
4. 5:00
5. 5:50
6. 10:25
7. 6:10
8. 6:20