



Solve each problem.

1) Start: 7:35

Elapsed: 2 hrs & 45 mins

End: _____



2) Start: 7:40

Elapsed: 2 hrs & 20 mins

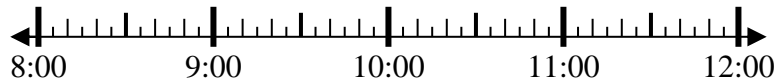
End: _____



3) Start: 8:25

Elapsed: 1 hr & 40 mins

End: _____



4) Start: 2:10

Elapsed: 1 hr & 10 mins

End: _____



5) Start: 12:50

Elapsed: 2 hrs & 25 mins

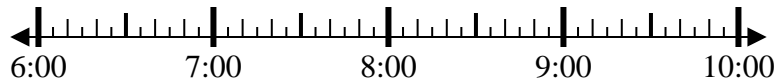
End: _____



6) Start: 6:05

Elapsed: 2 hrs & 35 mins

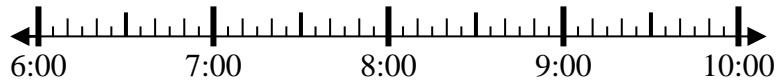
End: _____



7) Start: 6:35

Elapsed: 2 hrs & 35 mins

End: _____



8) Start: 4:10

Elapsed: 1 hr & 30 mins

End: _____



Answers

1. _____
2. _____
3. _____
4. _____
5. _____
6. _____
7. _____
8. _____

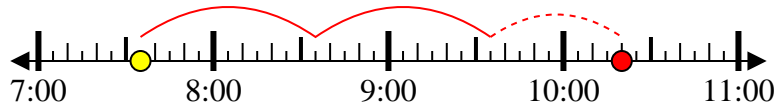


Solve each problem.

1) Start: 7:35

Elapsed: 2 hrs & 45 mins

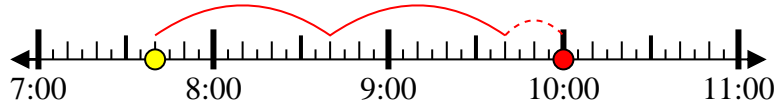
End: 10:20



2) Start: 7:40

Elapsed: 2 hrs & 20 mins

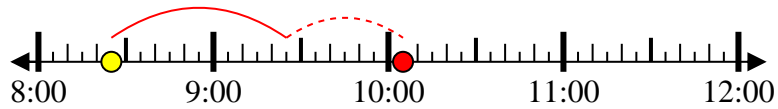
End: 10:00



3) Start: 8:25

Elapsed: 1 hr & 40 mins

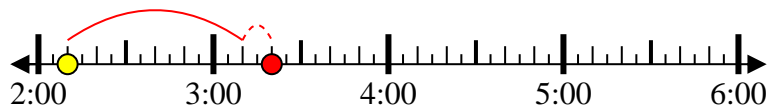
End: 10:05



4) Start: 2:10

Elapsed: 1 hr & 10 mins

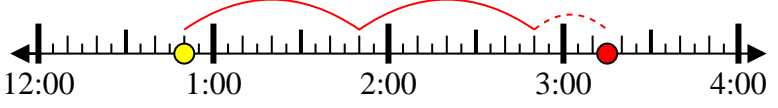
End: 3:20



5) Start: 12:50

Elapsed: 2 hrs & 25 mins

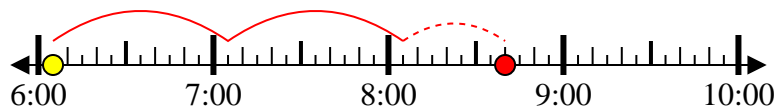
End: 3:15



6) Start: 6:05

Elapsed: 2 hrs & 35 mins

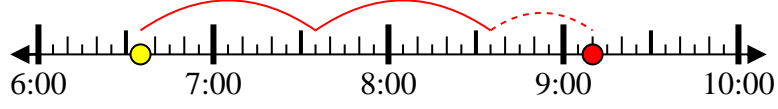
End: 8:40



7) Start: 6:35

Elapsed: 2 hrs & 35 mins

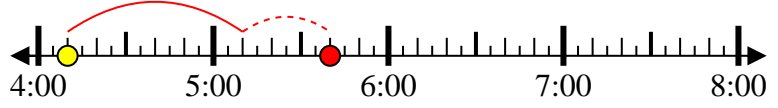
End: 9:10



8) Start: 4:10

Elapsed: 1 hr & 30 mins

End: 5:40



Answers

1. 10:20
2. 10:00
3. 10:05
4. 3:20
5. 3:15
6. 8:40
7. 9:10
8. 5:40