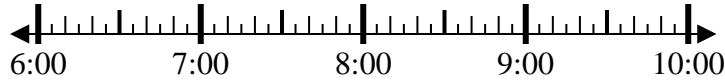




Solve each problem.

1) Start: 6:35

Elapsed: _____
End: 7:50



1. _____

2) Start: 2:35

Elapsed: _____
End: 4:50



2. _____

3) Start: 1:15

Elapsed: _____
End: 2:45



3. _____

4) Start: 2:45

Elapsed: _____
End: 3:55



4. _____

5) Start: 2:55

Elapsed: _____
End: 5:25



5. _____

6) Start: 1:50

Elapsed: _____
End: 3:25



6. _____

7) Start: 6:25

Elapsed: _____
End: 8:15



7. _____

8) Start: 7:45

Elapsed: _____
End: 9:15



8. _____

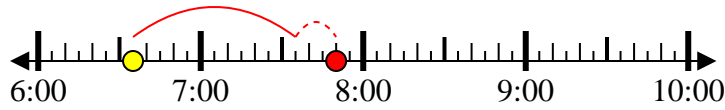
Answers



Solve each problem.

1) Start: 6:35

Elapsed: 1 hr & 15 mins
End: 7:50



2) Start: 2:35

Elapsed: 2 hrs & 15 mins
End: 4:50



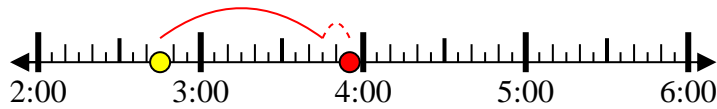
3) Start: 1:15

Elapsed: 1 hr & 30 mins
End: 2:45



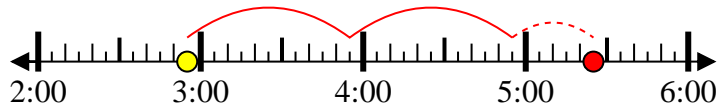
4) Start: 2:45

Elapsed: 1 hr & 10 mins
End: 3:55



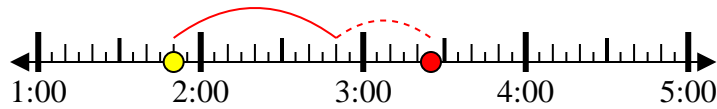
5) Start: 2:55

Elapsed: 2 hrs & 30 mins
End: 5:25



6) Start: 1:50

Elapsed: 1 hr & 35 mins
End: 3:25



7) Start: 6:25

Elapsed: 1 hr & 50 mins
End: 8:15



8) Start: 7:45

Elapsed: 1 hr & 30 mins
End: 9:15



Answers

1. 1 hr & 15 mins
2. 2 hrs & 15 mins
3. 1 hr & 30 mins
4. 1 hr & 10 mins
5. 2 hrs & 30 mins
6. 1 hr & 35 mins
7. 1 hr & 50 mins
8. 1 hr & 30 mins