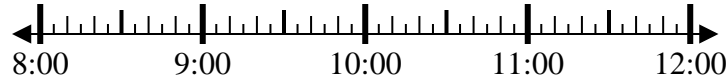




Solve each problem.

1) Start: 8:05

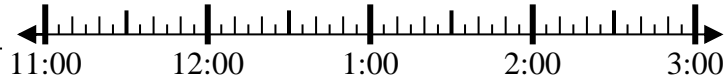
Elapsed: _____
End: 9:50



1. _____

2) Start: 11:10

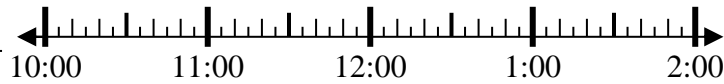
Elapsed: _____
End: 12:55



2. _____

3) Start: 10:35

Elapsed: _____
End: 12:25



3. _____

4) Start: 7:45

Elapsed: _____
End: 9:05



4. _____

5) Start: 1:35

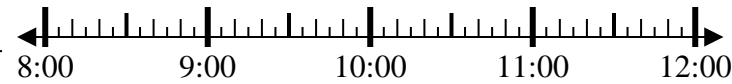
Elapsed: _____
End: 3:10



5. _____

6) Start: 8:30

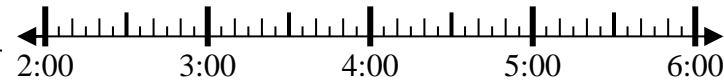
Elapsed: _____
End: 9:40



6. _____

7) Start: 2:35

Elapsed: _____
End: 4:05



7. _____

8) Start: 11:20

Elapsed: _____
End: 12:30



8. _____

Answers



Solve each problem.

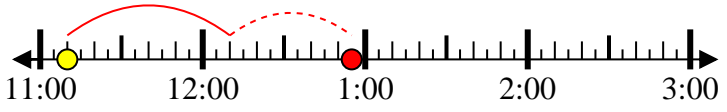
1) Start: 8:05

Elapsed: 1 hr & 45 mins
End: 9:50



2) Start: 11:10

Elapsed: 1 hr & 45 mins
End: 12:55



3) Start: 10:35

Elapsed: 1 hr & 50 mins
End: 12:25



4) Start: 7:45

Elapsed: 1 hr & 20 mins
End: 9:05



5) Start: 1:35

Elapsed: 1 hr & 35 mins
End: 3:10



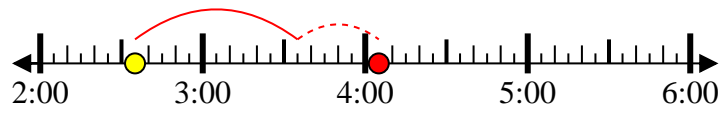
6) Start: 8:30

Elapsed: 1 hr & 10 mins
End: 9:40



7) Start: 2:35

Elapsed: 1 hr & 30 mins
End: 4:05



8) Start: 11:20

Elapsed: 1 hr & 10 mins
End: 12:30



Answers

1. 1 hr & 45 mins

2. 1 hr & 45 mins

3. 1 hr & 50 mins

4. 1 hr & 20 mins

5. 1 hr & 35 mins

6. 1 hr & 10 mins

7. 1 hr & 30 mins

8. 1 hr & 10 mins