

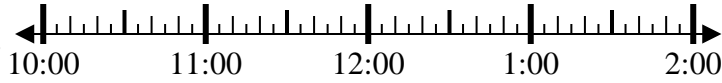


Solve each problem.

1) Start: 10:10

Elapsed: \_\_\_\_\_

End: 11:30

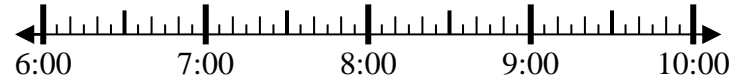


1. \_\_\_\_\_

2) Start: 6:00

Elapsed: \_\_\_\_\_

End: 8:10

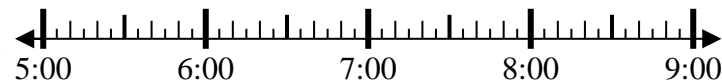


2. \_\_\_\_\_

3) Start: 5:30

Elapsed: \_\_\_\_\_

End: 7:55

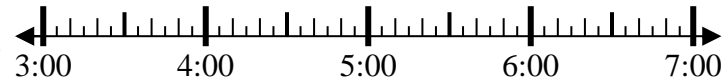


3. \_\_\_\_\_

4) Start: 3:25

Elapsed: \_\_\_\_\_

End: 5:10



4. \_\_\_\_\_

5) Start: 1:05

Elapsed: \_\_\_\_\_

End: 3:30



5. \_\_\_\_\_

6) Start: 7:05

Elapsed: \_\_\_\_\_

End: 8:35

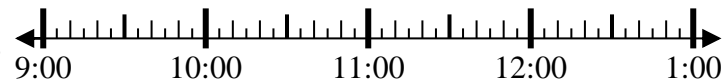


6. \_\_\_\_\_

7) Start: 9:30

Elapsed: \_\_\_\_\_

End: 10:40



7. \_\_\_\_\_

8) Start: 2:20

Elapsed: \_\_\_\_\_

End: 3:55



8. \_\_\_\_\_

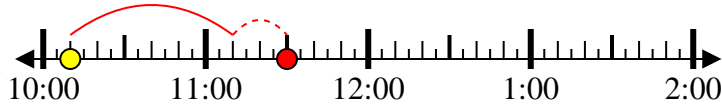
Answers



Solve each problem.

1) Start: 10:10

Elapsed: 1 hr & 20 mins  
End: 11:30



2) Start: 6:00

Elapsed: 2 hrs & 10 mins  
End: 8:10



3) Start: 5:30

Elapsed: 2 hrs & 25 mins  
End: 7:55



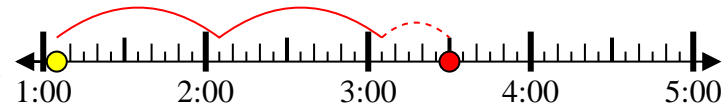
4) Start: 3:25

Elapsed: 1 hr & 45 mins  
End: 5:10



5) Start: 1:05

Elapsed: 2 hrs & 25 mins  
End: 3:30



6) Start: 7:05

Elapsed: 1 hr & 30 mins  
End: 8:35



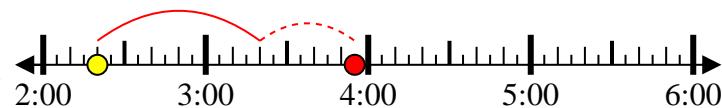
7) Start: 9:30

Elapsed: 1 hr & 10 mins  
End: 10:40



8) Start: 2:20

Elapsed: 1 hr & 35 mins  
End: 3:55



Answers

1. 1 hr & 20 mins
2. 2 hrs & 10 mins
3. 2 hrs & 25 mins
4. 1 hr & 45 mins
5. 2 hrs & 25 mins
6. 1 hr & 30 mins
7. 1 hr & 10 mins
8. 1 hr & 35 mins