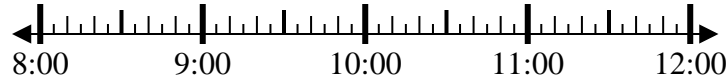




Solve each problem.

1) Start: 8:45

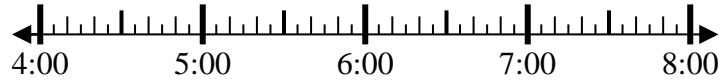
Elapsed: _____
End: 11:25



1. _____

2) Start: 4:35

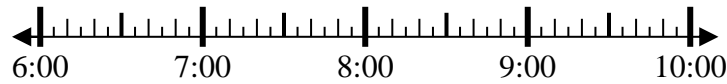
Elapsed: _____
End: 6:50



2. _____

3) Start: 6:25

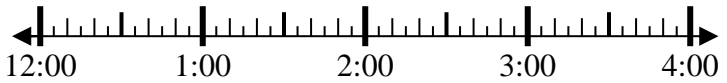
Elapsed: _____
End: 8:05



3. _____

4) Start: 12:20

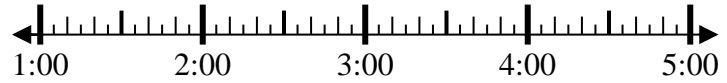
Elapsed: _____
End: 1:30



4. _____

5) Start: 1:35

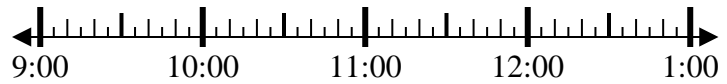
Elapsed: _____
End: 3:05



5. _____

6) Start: 9:20

Elapsed: _____
End: 11:55



6. _____

7) Start: 2:00

Elapsed: _____
End: 4:35



7. _____

8) Start: 3:30

Elapsed: _____
End: 5:55

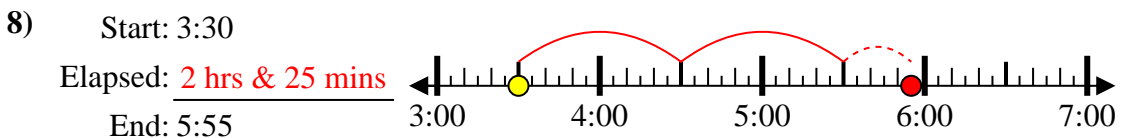
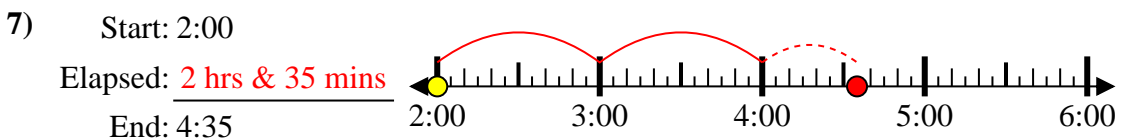
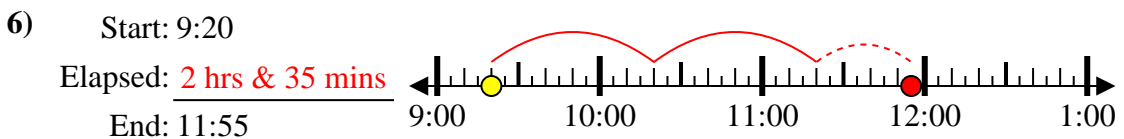
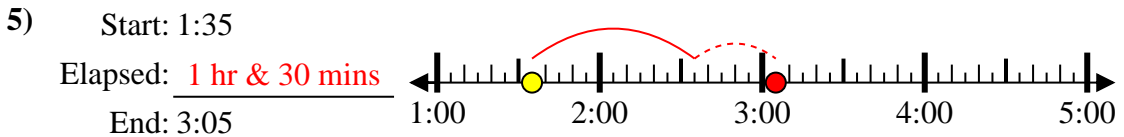
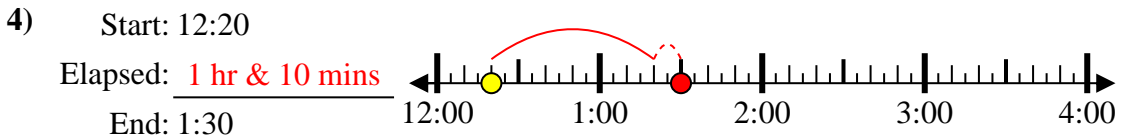
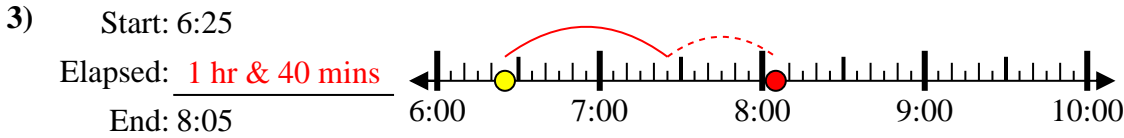
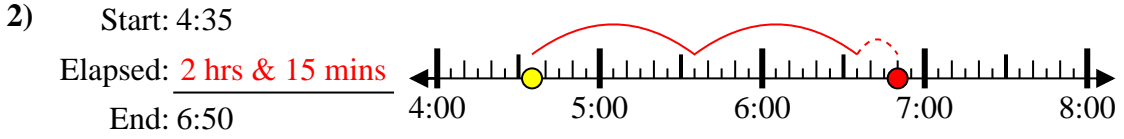
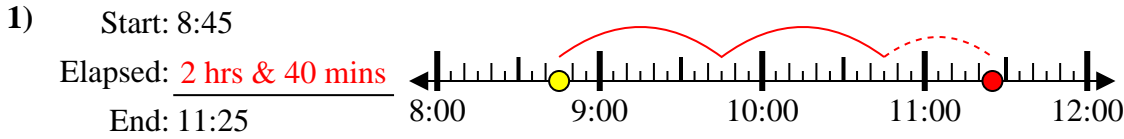


8. _____

Answers



Solve each problem.



Answers

1. 2 hrs & 40 mins
2. 2 hrs & 15 mins
3. 1 hr & 40 mins
4. 1 hr & 10 mins
5. 1 hr & 30 mins
6. 2 hrs & 35 mins
7. 2 hrs & 35 mins
8. 2 hrs & 25 mins