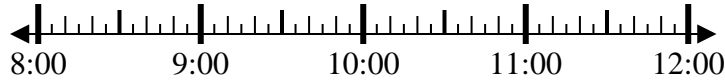




Solve each problem.

1) Start: 8:50

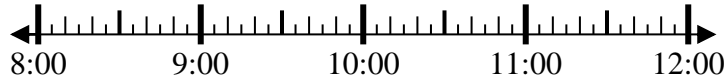
Elapsed: \_\_\_\_\_  
End: 10:15



1. \_\_\_\_\_

2) Start: 8:20

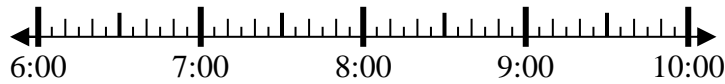
Elapsed: \_\_\_\_\_  
End: 9:30



2. \_\_\_\_\_

3) Start: 6:05

Elapsed: \_\_\_\_\_  
End: 8:30



3. \_\_\_\_\_

4) Start: 6:35

Elapsed: \_\_\_\_\_  
End: 8:05



4. \_\_\_\_\_

5) Start: 7:50

Elapsed: \_\_\_\_\_  
End: 9:05



5. \_\_\_\_\_

6) Start: 12:20

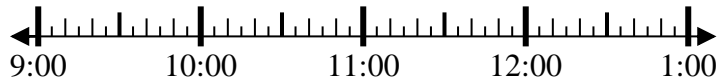
Elapsed: \_\_\_\_\_  
End: 1:55



6. \_\_\_\_\_

7) Start: 9:00

Elapsed: \_\_\_\_\_  
End: 10:30



7. \_\_\_\_\_

8) Start: 1:20

Elapsed: \_\_\_\_\_  
End: 2:30



8. \_\_\_\_\_

Answers



Solve each problem.

1) Start: 8:50

Elapsed: 1 hr & 25 mins  
End: 10:15



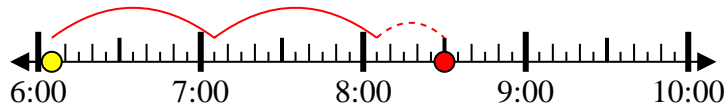
2) Start: 8:20

Elapsed: 1 hr & 10 mins  
End: 9:30



3) Start: 6:05

Elapsed: 2 hrs & 25 mins  
End: 8:30



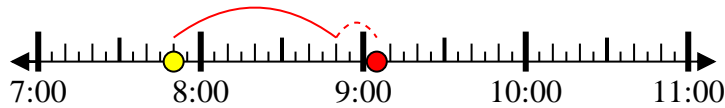
4) Start: 6:35

Elapsed: 1 hr & 30 mins  
End: 8:05



5) Start: 7:50

Elapsed: 1 hr & 15 mins  
End: 9:05



6) Start: 12:20

Elapsed: 1 hr & 35 mins  
End: 1:55



7) Start: 9:00

Elapsed: 1 hr & 30 mins  
End: 10:30



8) Start: 1:20

Elapsed: 1 hr & 10 mins  
End: 2:30



Answers

1. 1 hr & 25 mins

2. 1 hr & 10 mins

3. 2 hrs & 25 mins

4. 1 hr & 30 mins

5. 1 hr & 15 mins

6. 1 hr & 35 mins

7. 1 hr & 30 mins

8. 1 hr & 10 mins