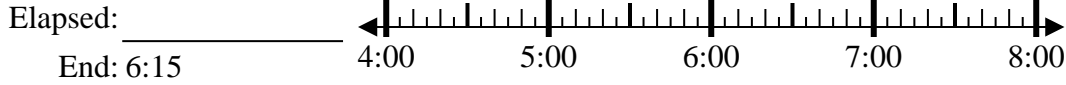




Solve each problem.

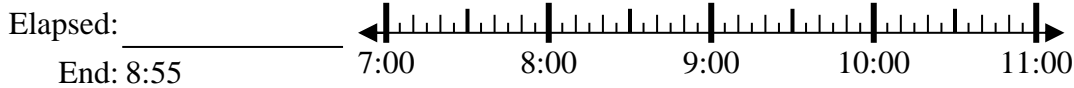
1) Start: 4:30



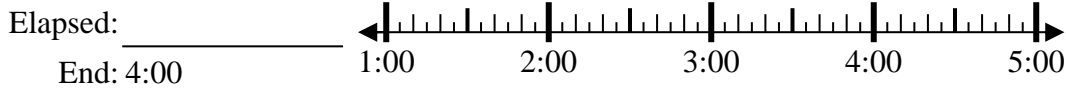
2) Start: 2:50



3) Start: 7:20



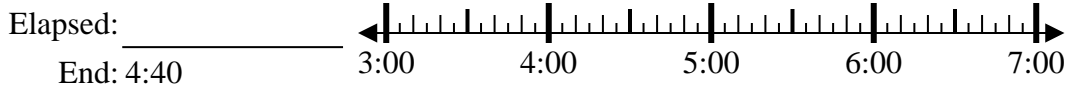
4) Start: 1:40



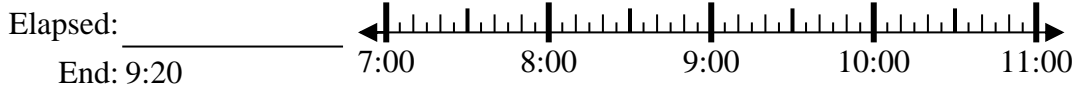
5) Start: 9:10



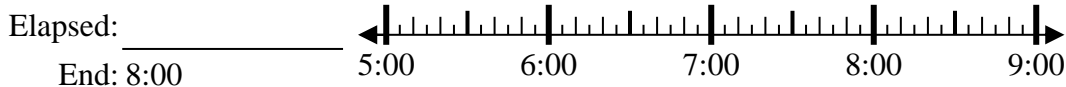
6) Start: 3:25



7) Start: 7:35



8) Start: 5:35



Answers

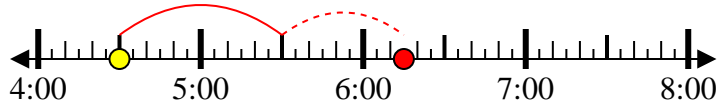
1. \_\_\_\_\_
2. \_\_\_\_\_
3. \_\_\_\_\_
4. \_\_\_\_\_
5. \_\_\_\_\_
6. \_\_\_\_\_
7. \_\_\_\_\_
8. \_\_\_\_\_



Solve each problem.

1) Start: 4:30

Elapsed: 1 hr & 45 mins  
End: 6:15



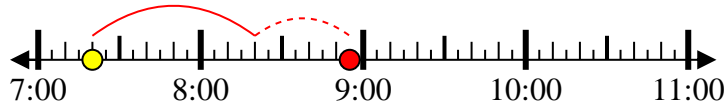
2) Start: 2:50

Elapsed: 1 hr & 50 mins  
End: 4:40



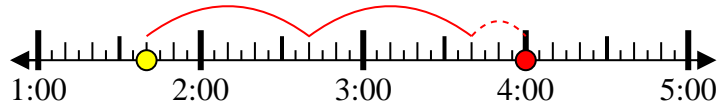
3) Start: 7:20

Elapsed: 1 hr & 35 mins  
End: 8:55



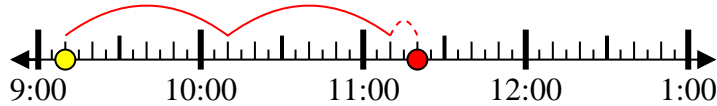
4) Start: 1:40

Elapsed: 2 hrs & 20 mins  
End: 4:00



5) Start: 9:10

Elapsed: 2 hrs & 10 mins  
End: 11:20



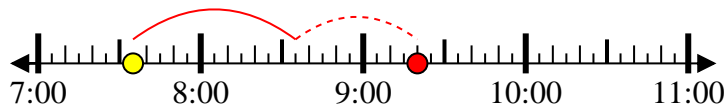
6) Start: 3:25

Elapsed: 1 hr & 15 mins  
End: 4:40



7) Start: 7:35

Elapsed: 1 hr & 45 mins  
End: 9:20



8) Start: 5:35

Elapsed: 2 hrs & 25 mins  
End: 8:00



Answers

1. 1 hr & 45 mins

2. 1 hr & 50 mins

3. 1 hr & 35 mins

4. 2 hrs & 20 mins

5. 2 hrs & 10 mins

6. 1 hr & 15 mins

7. 1 hr & 45 mins

8. 2 hrs & 25 mins