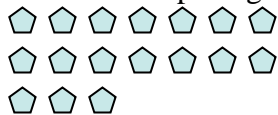




Use the visual model to solve each problem.


1) There are 17 pentagons below.



If you were to take away 6, how many would be left?

$17 - 6 = ?$

2) There are 19 circles below.



If you were to take away 9, how many would be left?

$19 - 9 = ?$

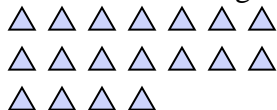
3) There are 2 circles below.



If you were to take away 1, how many would be left?

$2 - 1 = ?$

4) There are 18 triangles below.



If you were to take away 3, how many would be left?

$18 - 3 = ?$

5) There are 5 hexagons below.



If you were to take away 4, how many would be left?

$5 - 4 = ?$

6) There are 4 stars below.



If you were to take away 3, how many would be left?

$4 - 3 = ?$


7) There are 6 triangles below.



If you were to take away 1, how many would be left?

$6 - 1 = ?$

8) There are 17 circles below.



If you were to take away 8, how many would be left?

$17 - 8 = ?$

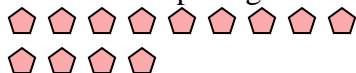
9) There are 6 circles below.



If you were to take away 4, how many would be left?

$6 - 4 = ?$

10) There are 13 pentagons below.



If you were to take away 12, how many would be left?

$13 - 12 = ?$

Answers

1. _____

2. _____

3. _____

4. _____

5. _____

6. _____

7. _____

8. _____

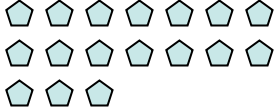
9. _____

10. _____



Use the visual model to solve each problem.


- 1) There are 17 pentagons below.



If you were to take away 6, how many would be left?

$17 - 6 = ?$

- 2) There are 19 circles below.



If you were to take away 9, how many would be left?

$19 - 9 = ?$

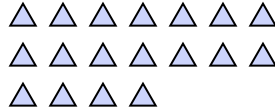
- 3) There are 2 circles below.



If you were to take away 1, how many would be left?

$2 - 1 = ?$

- 4) There are 18 triangles below.



If you were to take away 3, how many would be left?

$18 - 3 = ?$

- 5) There are 5 hexagons below.



If you were to take away 4, how many would be left?

$5 - 4 = ?$

- 6) There are 4 stars below.



If you were to take away 3, how many would be left?

$4 - 3 = ?$


- 7) There are 6 triangles below.



If you were to take away 1, how many would be left?

$6 - 1 = ?$

- 8) There are 17 circles below.



If you were to take away 8, how many would be left?

$17 - 8 = ?$

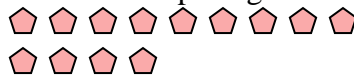
- 9) There are 6 circles below.



If you were to take away 4, how many would be left?

$6 - 4 = ?$

- 10) There are 13 pentagons below.



If you were to take away 12, how many would be left?

$13 - 12 = ?$

Answers1. 112. 103. 14. 155. 16. 17. 58. 99. 210. 1