




Determine if the shape is translating (slide), rotating (turn) or reflecting (flip).

Answers

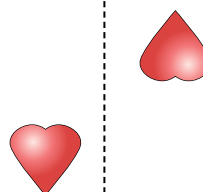
1)



2)



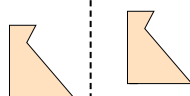
3)



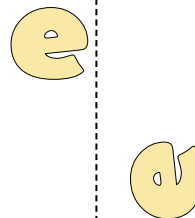
4)



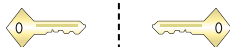
5)




6)



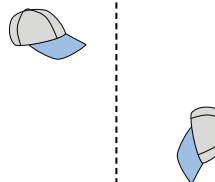
7)



8)



9)



10)



11)



12)



13)



14)



15)

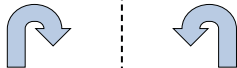


1. _____
2. _____
3. _____
4. _____
5. _____
6. _____
7. _____
8. _____
9. _____
10. _____
11. _____
12. _____
13. _____
14. _____
15. _____




Determine if the shape is translating (slide), rotating (turn) or reflecting (flip).

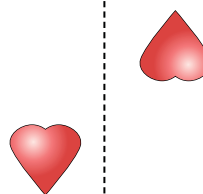
1)



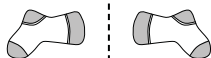
2)



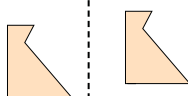
3)



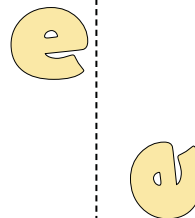
4)



5)




6)



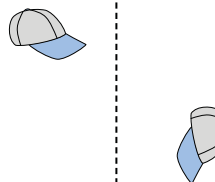
7)



8)



9)



10)



11)



12)



13)



14)



15)



Answers

1. reflecting

2. translating

3. rotating

4. reflecting

5. translating

6. rotating

7. reflecting

8. translating

9. rotating

10. reflecting

11. translating

12. rotating

13. reflecting

14. translating

15. rotating