




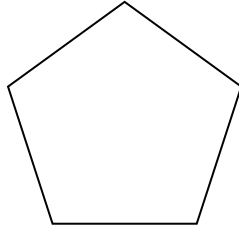
Determine if the shape shown is a regular shape or an irregular shape.

Answers

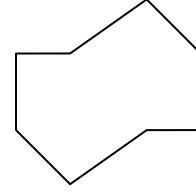
1)



2)



3)




1. _____

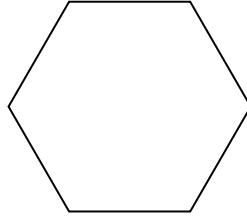
2. _____

3. _____

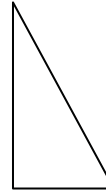
4)



5)



6)




4. _____

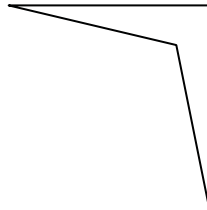
5. _____

6. _____

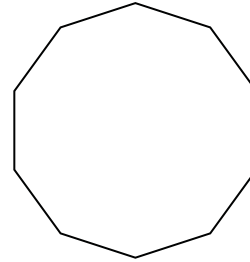
7)



8)



9)



7. _____


8. _____

9. _____

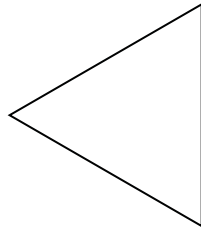
10. _____

11. _____


10)



11)



12)



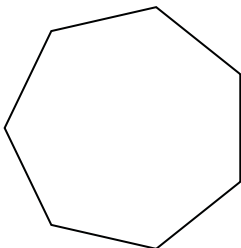
12. _____

13. _____

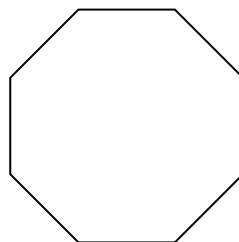
14. _____

15. _____

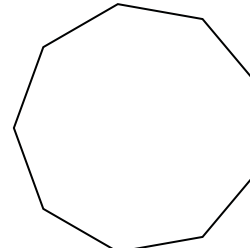
13)



14)




15)



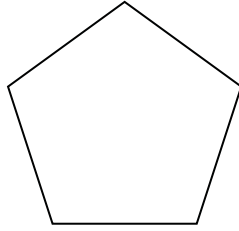


Determine if the shape shown is a regular shape or an irregular shape.

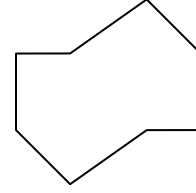
1)



2)



3)



Answers

1. irregular

2. regular

3. irregular

4. irregular

5. regular

6. irregular

7. irregular

8. irregular

9. regular

10. regular

11. regular


12. irregular

13. regular

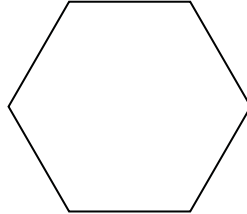
14. regular

15. regular

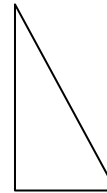
4)




5)



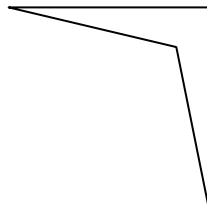
6)



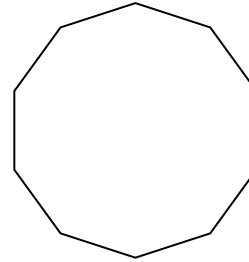
7)




8)



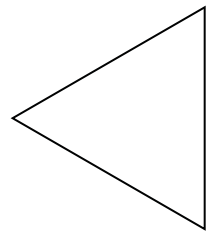
9)




10)



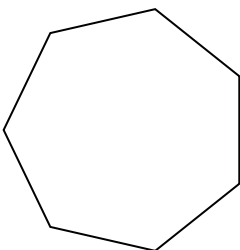
11)



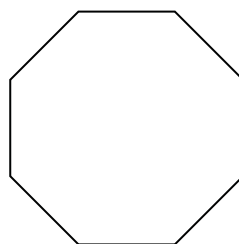
12)



13)



14)



15)

