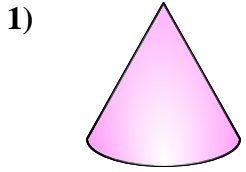


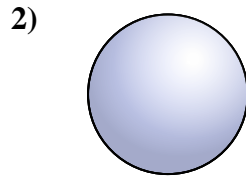


Determine which choice BEST describes the shape shown.

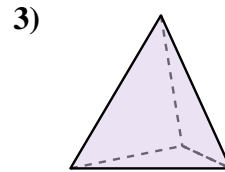
Answers



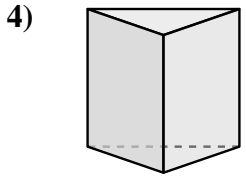
- A. Rectangular Pyramid
- B. Cylinder
- C. Sphere
- D. Cone



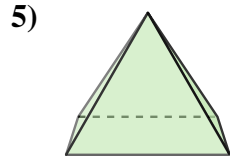
- A. Cube
- B. Triangular Prism
- C. Sphere
- D. Cone



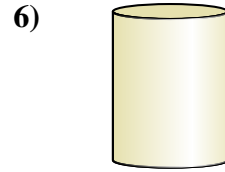
- A. Triangular Pyramid
- B. Triangular Prism
- C. Cylinder
- D. Cone



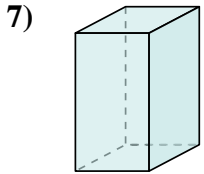
- A. Cylinder
- B. Cube
- C. Rectangular Pyramid
- D. Triangular Prism



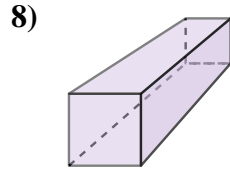
- A. Rectangular Pyramid
- B. Cube
- C. Rectangular Prism
- D. Triangular Pyramid



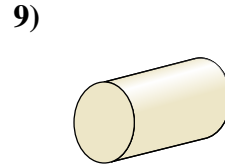
- A. Rectangular Prism
- B. Triangular Prism
- C. Rectangular Pyramid
- D. Cylinder



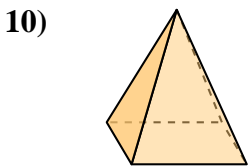
- A. Cylinder
- B. Rectangular Prism
- C. Cube
- D. Cone



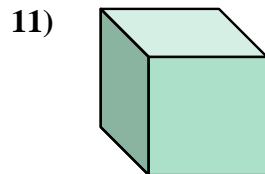
- A. Sphere
- B. Cylinder
- C. Rectangular Prism
- D. Cone



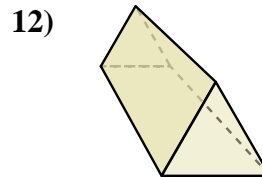
- A. Cylinder
- B. Triangular Prism
- C. Triangular Pyramid
- D. Rectangular Pyramid



- A. Cylinder
- B. Sphere
- C. Rectangular Pyramid
- D. Rectangular Prism



- A. Sphere
- B. Cube
- C. Cylinder
- D. Triangular Prism

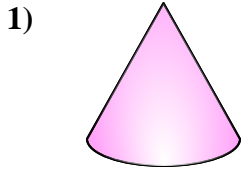


- A. Rectangular Pyramid
- B. Cube
- C. Rectangular Prism
- D. Triangular Prism

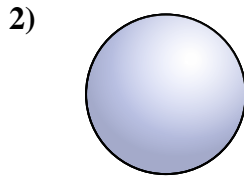
- 1. _____
- 2. _____
- 3. _____
- 4. _____
- 5. _____
- 6. _____
- 7. _____
- 8. _____
- 9. _____
- 10. _____
- 11. _____
- 12. _____



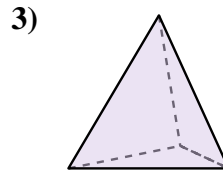
Determine which choice BEST describes the shape shown.



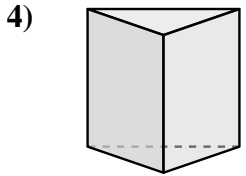
- 1) A. Rectangular Pyramid
- B. Cylinder
- C. Sphere
- D. Cone



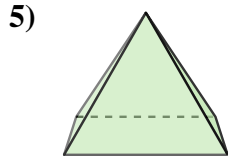
- 2) A. Cube
- B. Triangular Prism
- C. Sphere
- D. Cone



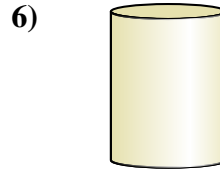
- 3) A. Triangular Pyramid
- B. Triangular Prism
- C. Cylinder
- D. Cone



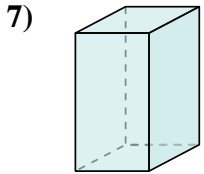
- 4) A. Cylinder
- B. Cube
- C. Rectangular Pyramid
- D. Triangular Prism



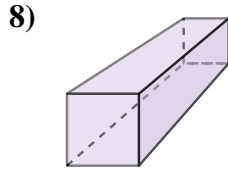
- 5) A. Rectangular Pyramid
- B. Cube
- C. Rectangular Prism
- D. Triangular Pyramid



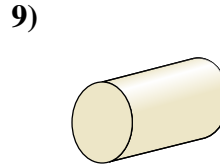
- 6) A. Rectangular Prism
- B. Triangular Prism
- C. Rectangular Pyramid
- D. Cylinder



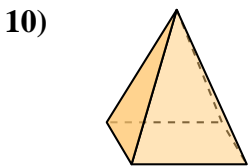
- 7) A. Cylinder
- B. Rectangular Prism
- C. Cube
- D. Cone



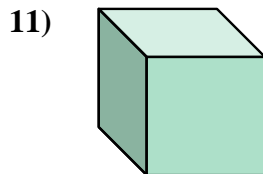
- 8) A. Sphere
- B. Cylinder
- C. Rectangular Prism
- D. Cone



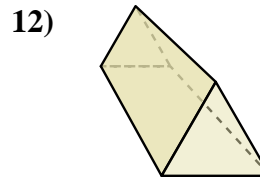
- 9) A. Cylinder
- B. Triangular Prism
- C. Triangular Pyramid
- D. Rectangular Pyramid



- 10) A. Cylinder
- B. Sphere
- C. Rectangular Pyramid
- D. Rectangular Prism



- 11) A. Sphere
- B. Cube
- C. Cylinder
- D. Triangular Prism



- 12) A. Rectangular Pyramid
- B. Cube
- C. Rectangular Prism
- D. Triangular Prism

Answers

- 1. **D**
- 2. **C**
- 3. **A**
- 4. **D**
- 5. **A**
- 6. **D**
- 7. **B**
- 8. **C**
- 9. **A**
- 10. **C**
- 11. **B**
- 12. **D**