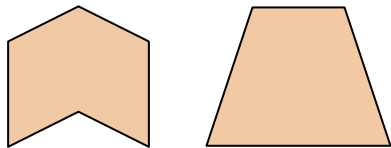




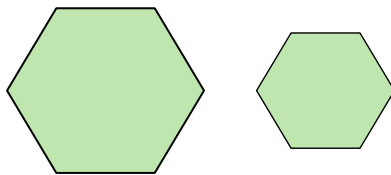
Determine if the shapes shown are 'similar', 'congruent' or 'neither'.

Answers

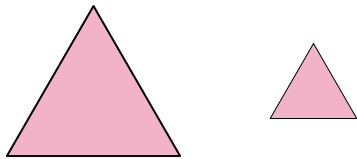
1)



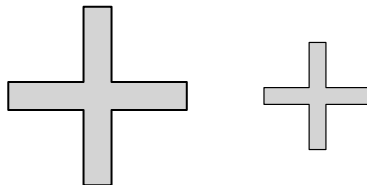
2)



3)



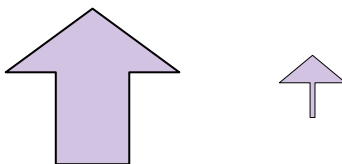
4)



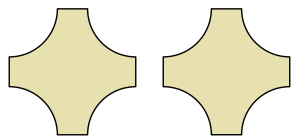
5)



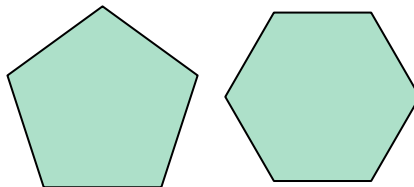
6)



7)



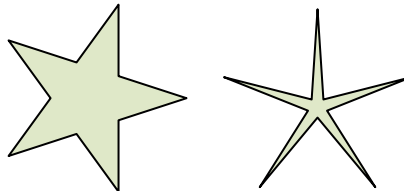
8)



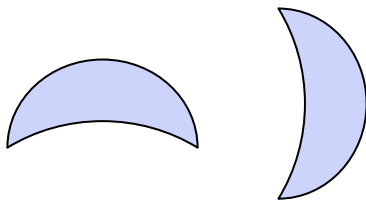
9)



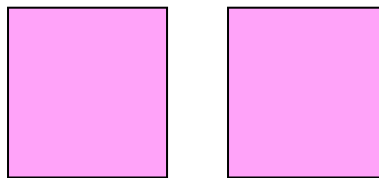
10)



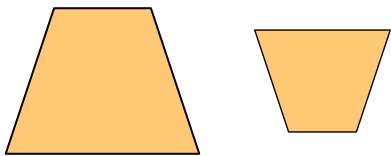
11)



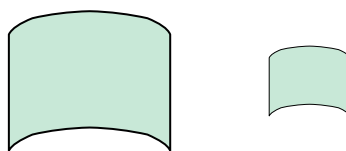
12)



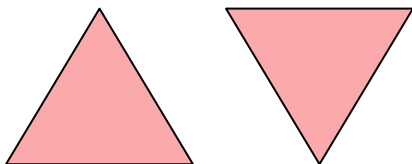
13)




14)



15)



16)



1. \_\_\_\_\_

2. \_\_\_\_\_

3. \_\_\_\_\_

4. \_\_\_\_\_

5. \_\_\_\_\_

6. \_\_\_\_\_

7. \_\_\_\_\_

8. \_\_\_\_\_

9. \_\_\_\_\_

10. \_\_\_\_\_

11. \_\_\_\_\_

12. \_\_\_\_\_

13. \_\_\_\_\_


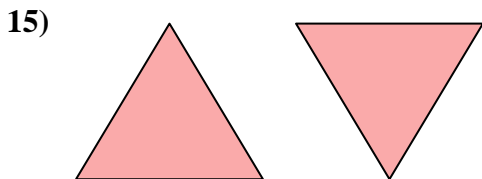
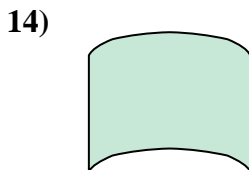
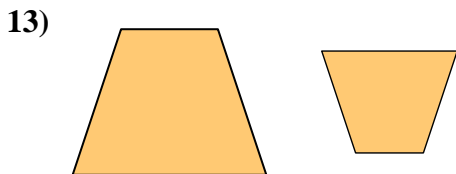

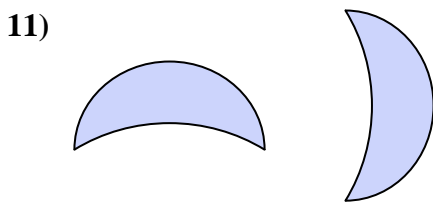

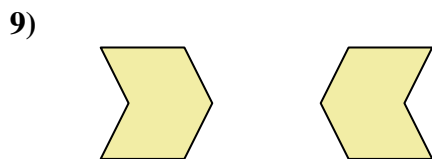
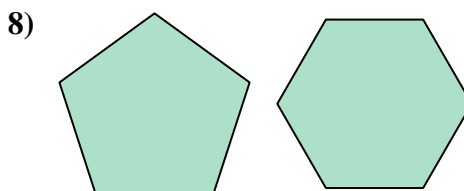
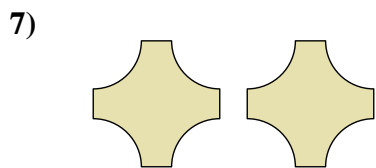
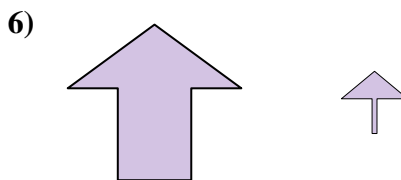
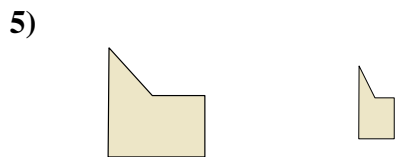

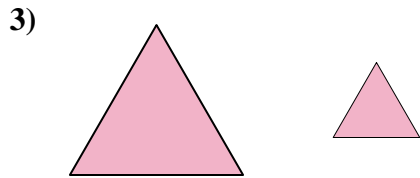
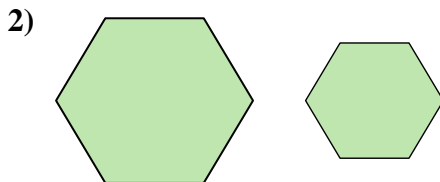
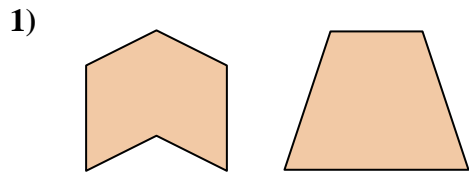
14. \_\_\_\_\_

15. \_\_\_\_\_

16. \_\_\_\_\_



Determine if the shapes shown are 'similar', 'congruent' or 'neither'.



Answers

1. neither

2. similar

3. similar

4. similar

5. neither

6. neither

7. congruent

8. neither

9. congruent

10. neither

11. congruent

12. congruent

13. similar

14. similar

15. congruent

16. congruent