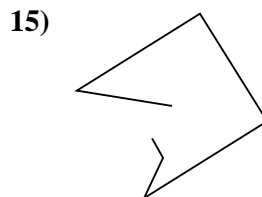
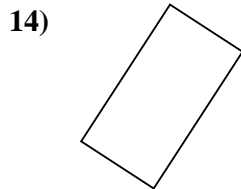
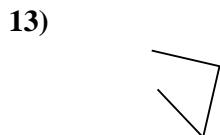
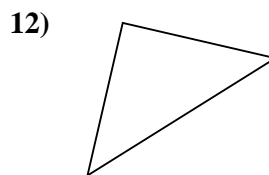
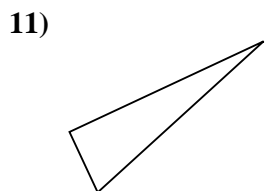
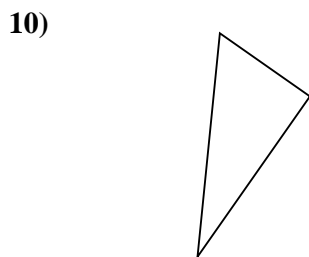

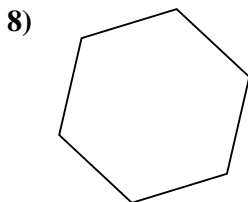
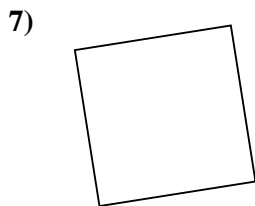
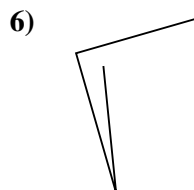
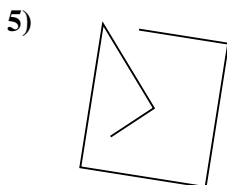
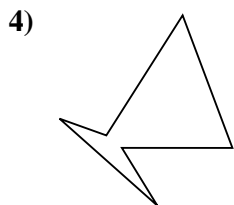
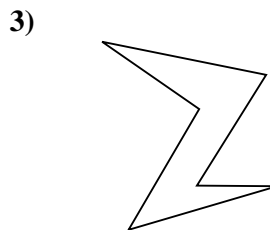
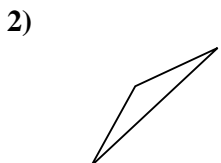
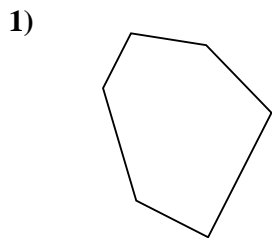




Determine if the figure shown is a 'Triangle', 'Square', 'Rectangle', 'Hexagon' or 'Other'.

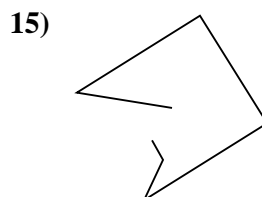
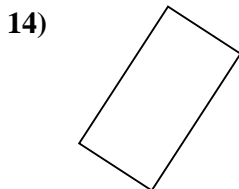
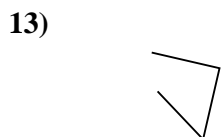
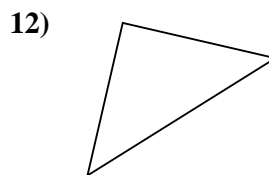
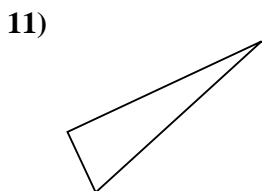
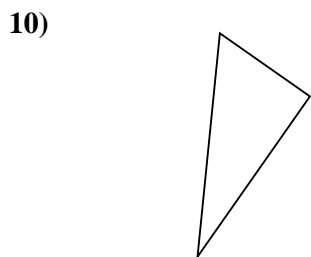
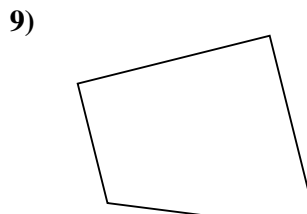
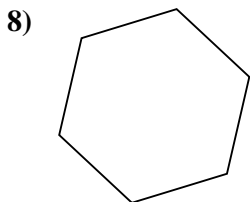
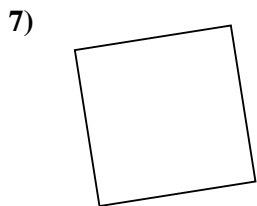
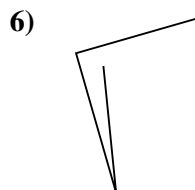
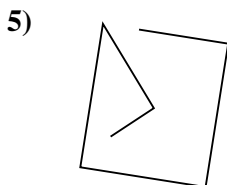
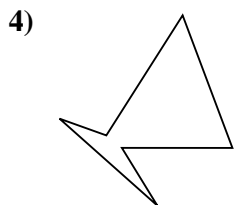
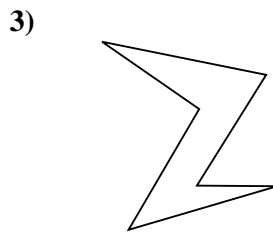
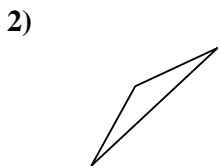
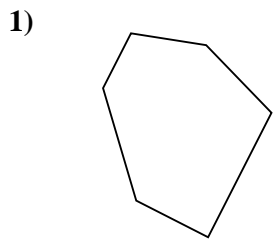
Answers



- 1. _____
- 2. _____
- 3. _____
- 4. _____
- 5. _____
- 6. _____
- 7. _____
- 8. _____
- 9. _____
- 10. _____
- 11. _____
- 12. _____
- 13. _____
- 14. _____
- 15. _____



Determine if the figure shown is a 'Triangle', 'Square', 'Rectangle', 'Hexagon' or 'Other'.



Answers

1. Hexagon

2. Triangle

3. Hexagon

4. Hexagon

5. Other

6. Other

7. Square

8. Hexagon

9. Other

10. Triangle

11. Triangle

12. Triangle

13. Other

14. Rectangle

15. Other