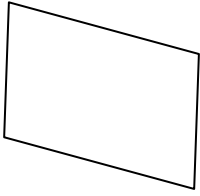


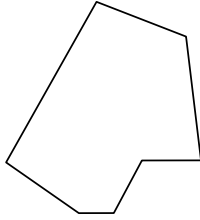


Identify the type of shape shown.


1)



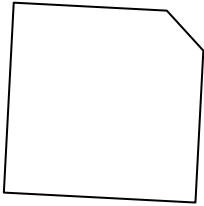
2)




3)



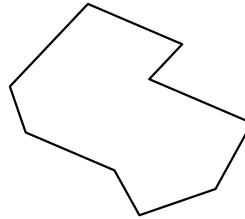
4)




5)



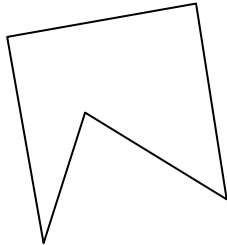
6)



7)



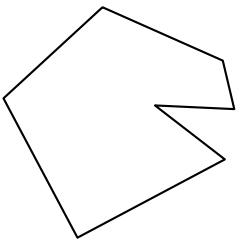
8)




9)




10)



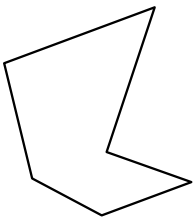
11)



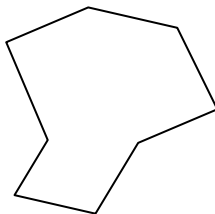
12)




13)



14)



15)



Answers

1. \_\_\_\_\_

2. \_\_\_\_\_

3. \_\_\_\_\_

4. \_\_\_\_\_

5. \_\_\_\_\_

6. \_\_\_\_\_

7. \_\_\_\_\_

8. \_\_\_\_\_

9. \_\_\_\_\_

10. \_\_\_\_\_

11. \_\_\_\_\_

12. \_\_\_\_\_

13. \_\_\_\_\_

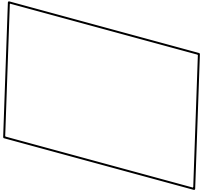
14. \_\_\_\_\_

15. \_\_\_\_\_

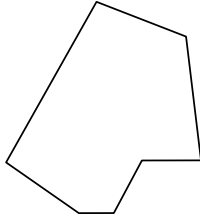


Identify the type of shape shown.


1)



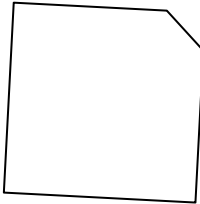
2)




3)



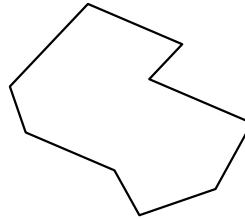
4)




5)



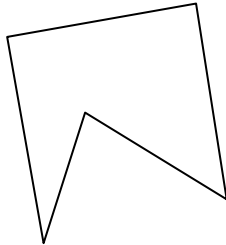
6)



7)



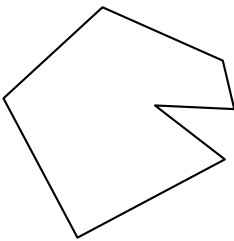
8)



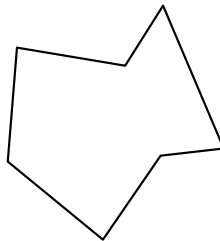
9)




10)



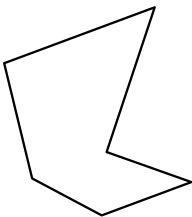
11)



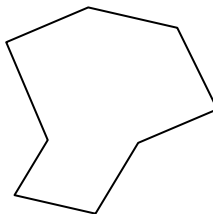
12)




13)



14)



15)



Answers

1. quadrilateral

2. heptagon

3. octagon

4. pentagon

5. hexagon

6. nonagon

7. decagon

8. pentagon

9. quadrilateral

10. heptagon

11. heptagon

12. nonagon

13. hexagon

14. octagon

15. octagon