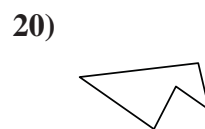
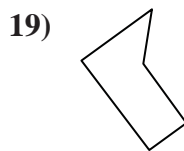
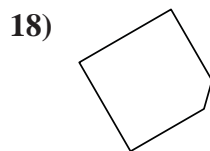
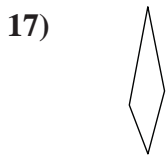
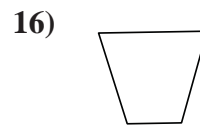
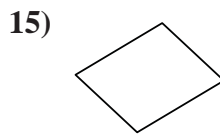
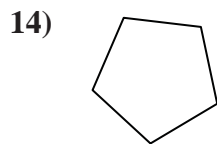
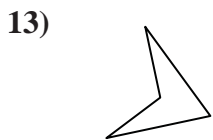
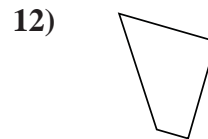
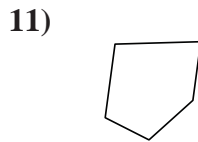
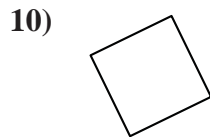
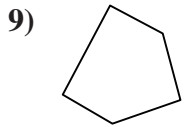
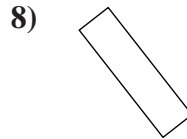
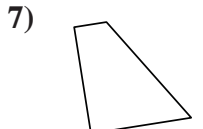
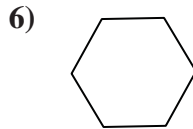
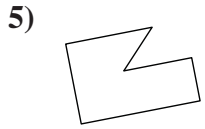
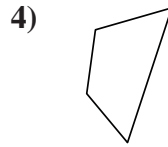
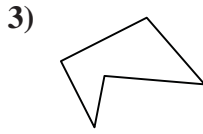
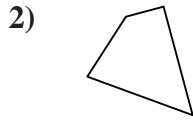
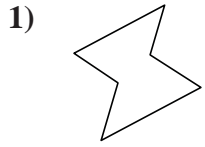




Determine if the shape shown is a quadrilateral (yes) or not (no).

Answers



1. \_\_\_\_\_

2. \_\_\_\_\_

3. \_\_\_\_\_

4. \_\_\_\_\_

5. \_\_\_\_\_

6. \_\_\_\_\_

7. \_\_\_\_\_

8. \_\_\_\_\_

9. \_\_\_\_\_

10. \_\_\_\_\_

11. \_\_\_\_\_

12. \_\_\_\_\_

13. \_\_\_\_\_

14. \_\_\_\_\_

15. \_\_\_\_\_

16. \_\_\_\_\_

17. \_\_\_\_\_

18. \_\_\_\_\_

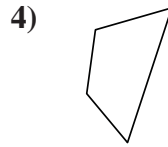
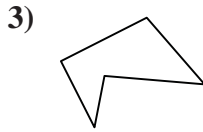
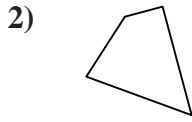
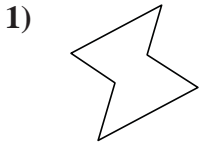
19. \_\_\_\_\_

20. \_\_\_\_\_



Determine if the shape shown is a quadrilateral (yes) or not (no).

Answers

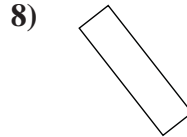
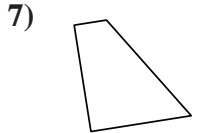
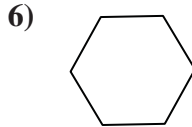
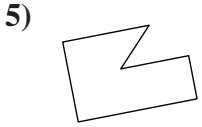


1. no

2. yes

3. no

4. yes

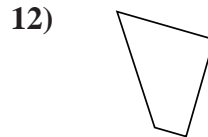
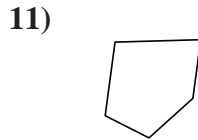
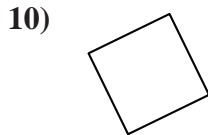
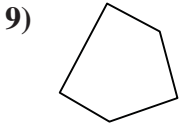


5. no

6. no

7. yes

8. yes

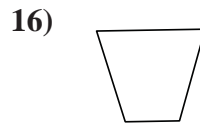
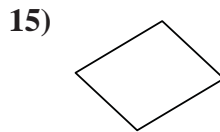
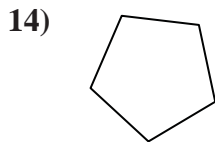
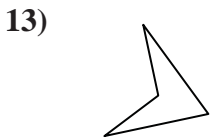


9. no

10. yes

11. no

12. yes

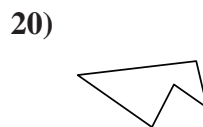
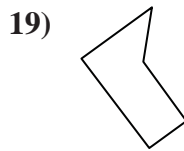
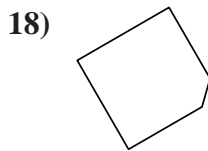
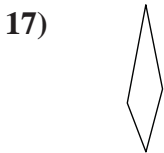


13. yes

14. no

15. yes

16. yes



17. yes

18. no

19. no

20. no