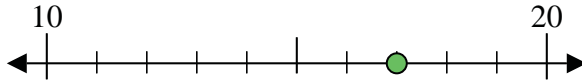


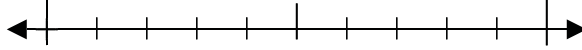


Use the numberlines to round each number to the nearest 10.

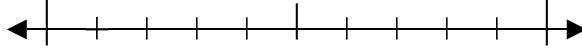
Ex) 17



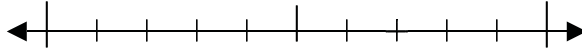
1) 50



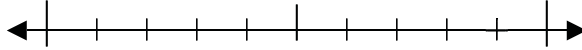
2) 51



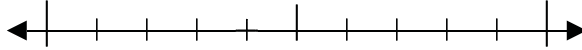
3) 27



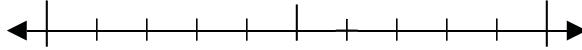
4) 79



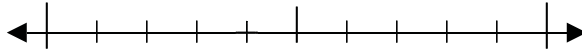
5) 294



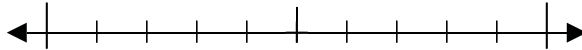
6) 746



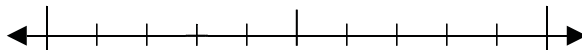
7) 694



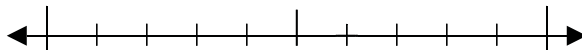
8) 685



9) 3,343



10) 8,056



Answers

Ex. 20

1. _____

2. _____

3. _____

4. _____

5. _____

6. _____

7. _____

8. _____

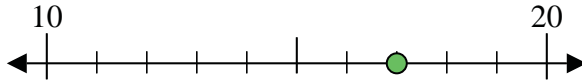
9. _____

10. _____

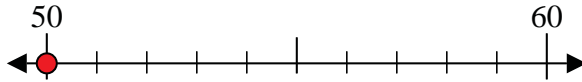


Use the numberlines to round each number to the nearest 10.

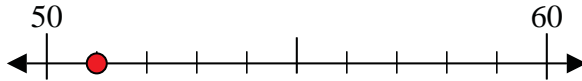
Ex) 17



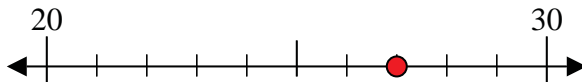
1) 50



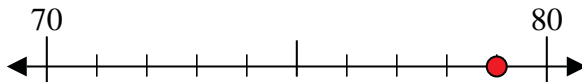
2) 51



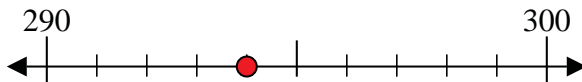
3) 27



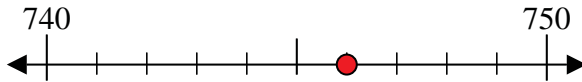
4) 79



5) 294



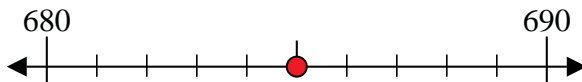
6) 746



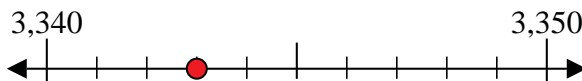
7) 694



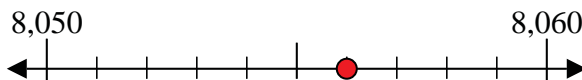
8) 685



9) 3,343



10) 8,056



Answers

Ex. 20

1. 50

2. 50

3. 30

4. 80

5. 290

6. 750

7. 690

8. 690

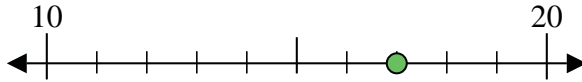
9. 3,340

10. 8,060

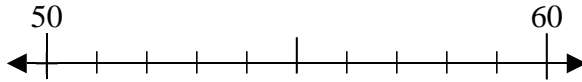


Use the numberlines to round each number to the nearest 10.

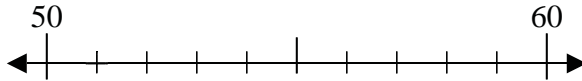
Ex) 17



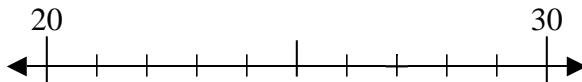
1) 50



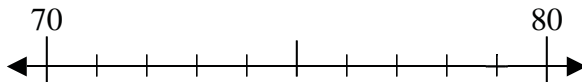
2) 51



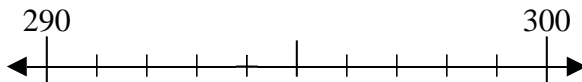
3) 27



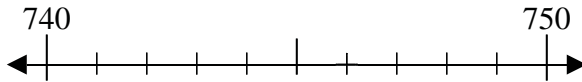
4) 79



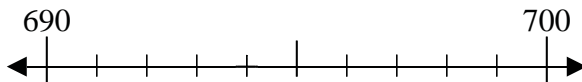
5) 294



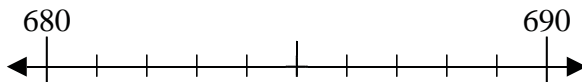
6) 746



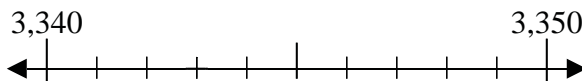
7) 694



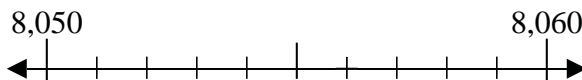
8) 685



9) 3,343



10) 8,056



Answers

Ex. 20

1. _____

2. _____

3. _____

4. _____

5. _____

6. _____

7. _____

8. _____

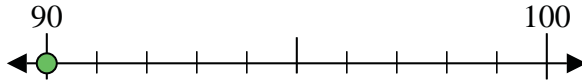
9. _____

10. _____

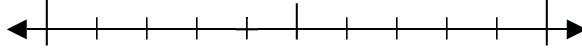


Use the numberlines to round each number to the nearest 10.

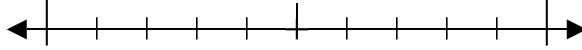
Ex) 90



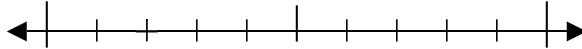
1) 94



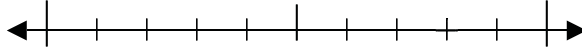
2) 85



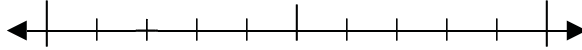
3) 32



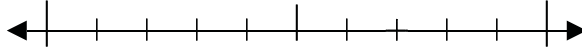
4) 48



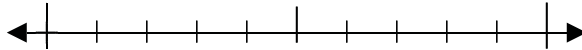
5) 822



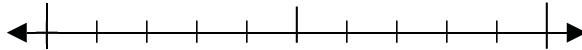
6) 387



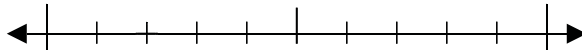
7) 370



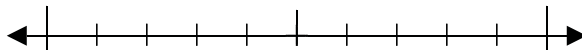
8) 810



9) 3,672



10) 5,985



Answers

Ex. 90

1. _____

2. _____

3. _____

4. _____

5. _____

6. _____

7. _____

8. _____

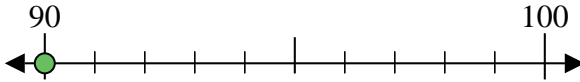
9. _____

10. _____

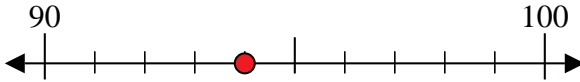


Use the numberlines to round each number to the nearest 10.

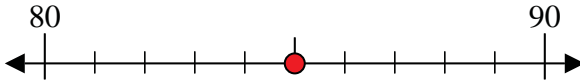
Ex) 90



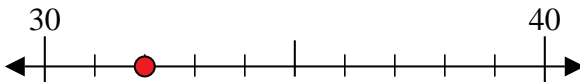
1) 94



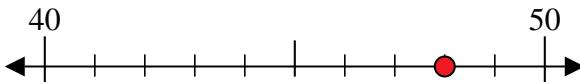
2) 85



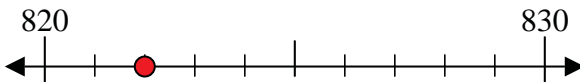
3) 32



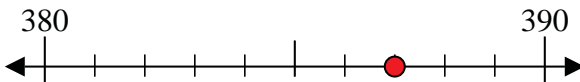
4) 48



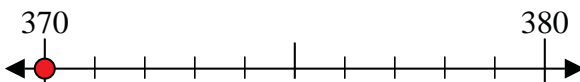
5) 822



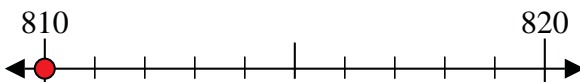
6) 387



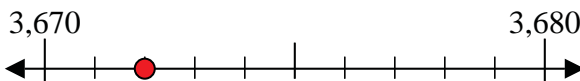
7) 370



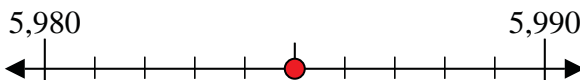
8) 810



9) 3,672



10) 5,985



Answers

Ex. 90

1. 90

2. 90

3. 30

4. 50

5. 820

6. 390

7. 370

8. 810

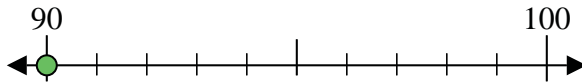
9. 3,670

10. 5,990

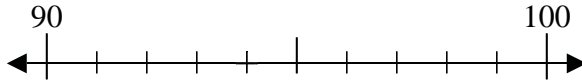


Use the numberlines to round each number to the nearest 10.

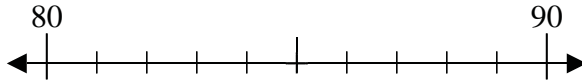
Ex) 90



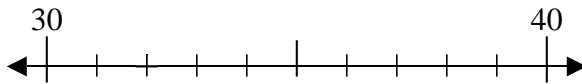
1) 94



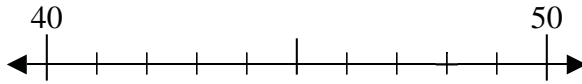
2) 85



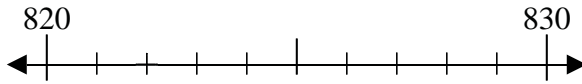
3) 32



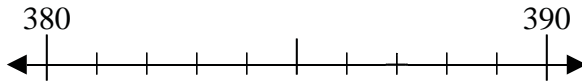
4) 48



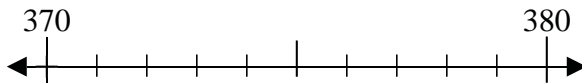
5) 822



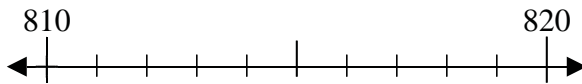
6) 387



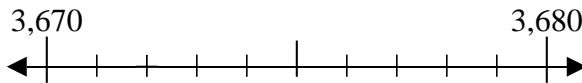
7) 370



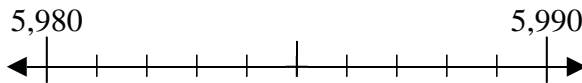
8) 810



9) 3,672



10) 5,985



Answers

Ex. 90

1. _____

2. _____

3. _____

4. _____

5. _____

6. _____

7. _____

8. _____

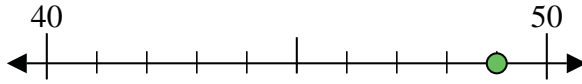
9. _____

10. _____

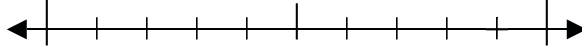


Use the numberlines to round each number to the nearest 10.

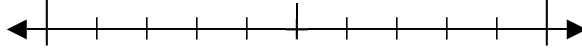
Ex) 49



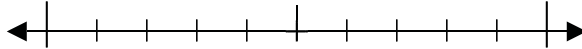
1) 39



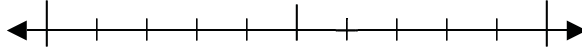
2) 85



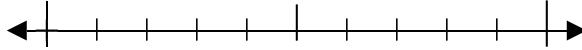
3) 35



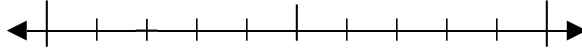
4) 76



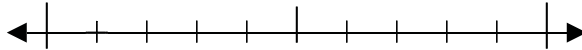
5) 640



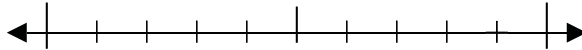
6) 892



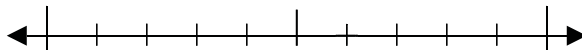
7) 771



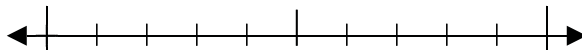
8) 849



9) 9,986



10) 1,590



Answers

Ex. 50

1. _____

2. _____

3. _____

4. _____

5. _____

6. _____

7. _____

8. _____

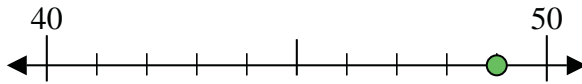
9. _____

10. _____

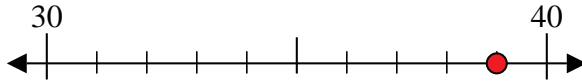


Use the numberlines to round each number to the nearest 10.

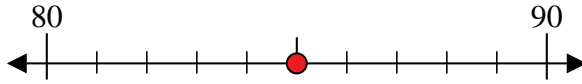
Ex) 49



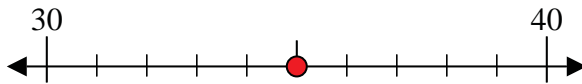
1) 39



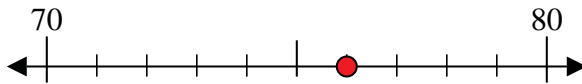
2) 85



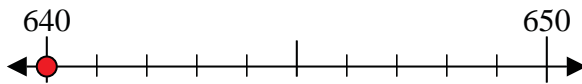
3) 35



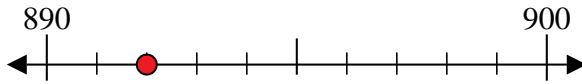
4) 76



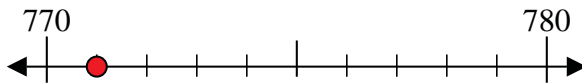
5) 640



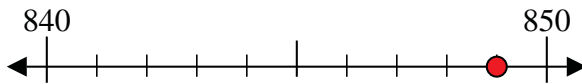
6) 892



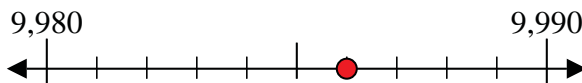
7) 771



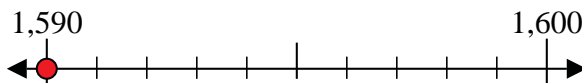
8) 849



9) 9,986



10) 1,590



Answers

Ex. 50

1. 40

2. 90

3. 40

4. 80

5. 640

6. 890

7. 770

8. 850

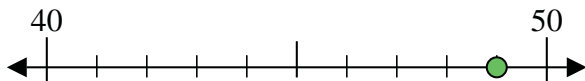
9. 9,990

10. 1,590

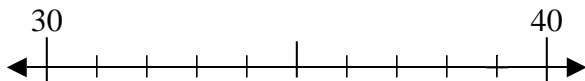


Use the numberlines to round each number to the nearest 10.

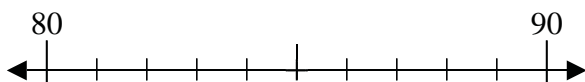
Ex) 49



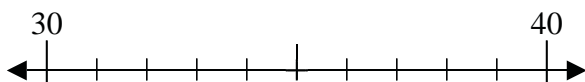
1) 39



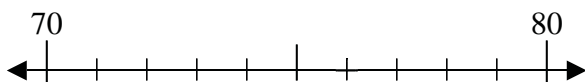
2) 85



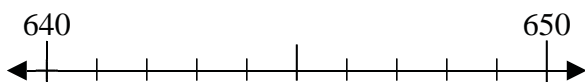
3) 35



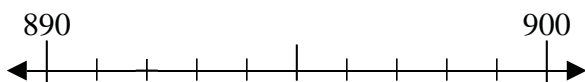
4) 76



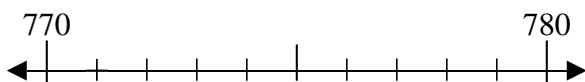
5) 640



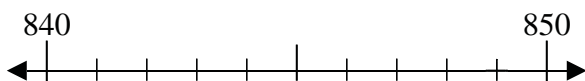
6) 892



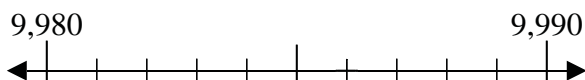
7) 771



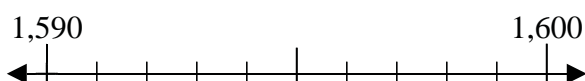
8) 849



9) 9,986



10) 1,590



Answers

Ex. 50

1. _____

2. _____

3. _____

4. _____

5. _____

6. _____

7. _____

8. _____

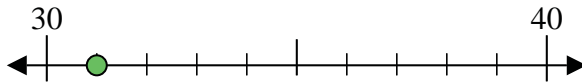
9. _____

10. _____

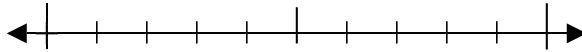


Use the numberlines to round each number to the nearest 10.

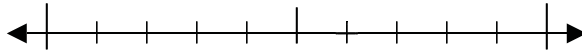
Ex) 31



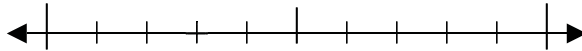
1) 70



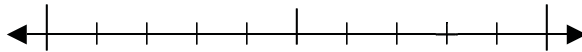
2) 96



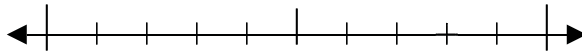
3) 63



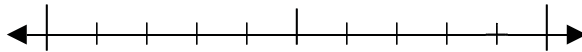
4) 38



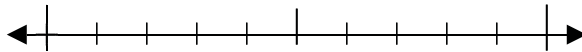
5) 488



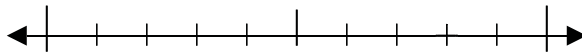
6) 119



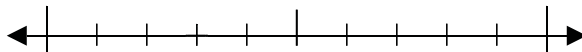
7) 230



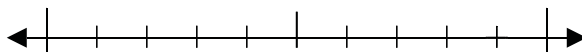
8) 958



9) 4,993



10) 2,839



Answers

Ex. 30

1. _____

2. _____

3. _____

4. _____

5. _____

6. _____

7. _____

8. _____

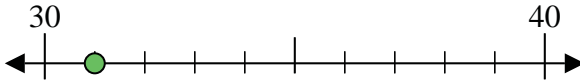
9. _____

10. _____

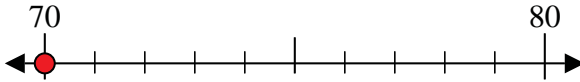


Use the numberlines to round each number to the nearest 10.

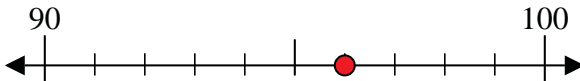
Ex) 31



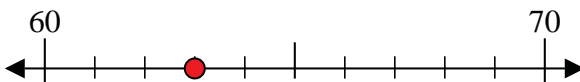
1) 70



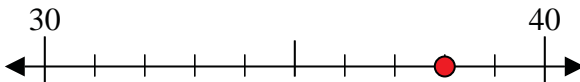
2) 96



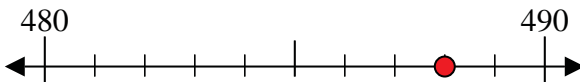
3) 63



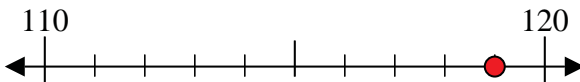
4) 38



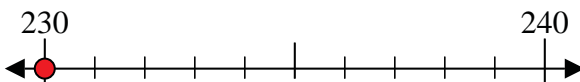
5) 488



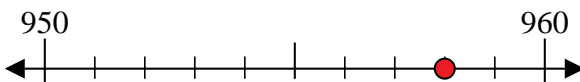
6) 119



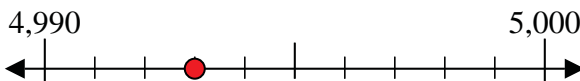
7) 230



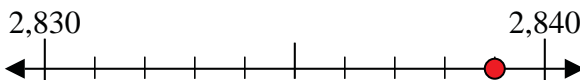
8) 958



9) 4,993



10) 2,839



Answers

Ex. 30

1. 70

2. 100

3. 60

4. 40

5. 490

6. 120

7. 230

8. 960

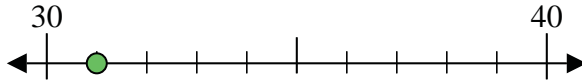
9. 4,990

10. 2,840

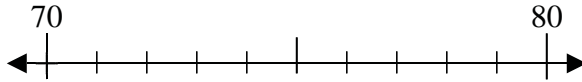


Use the numberlines to round each number to the nearest 10.

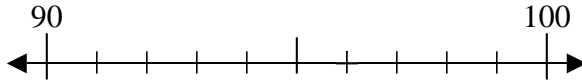
Ex) 31



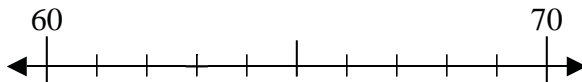
1) 70



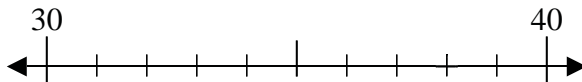
2) 96



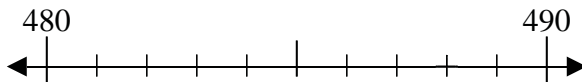
3) 63



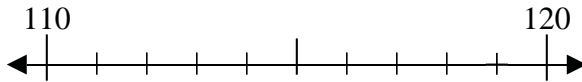
4) 38



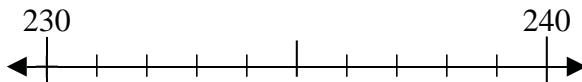
5) 488



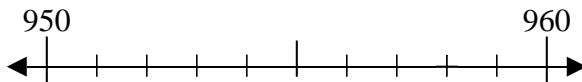
6) 119



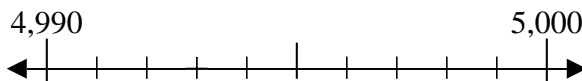
7) 230



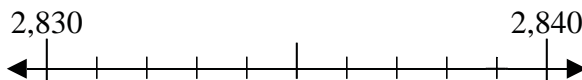
8) 958



9) 4,993



10) 2,839



Answers

Ex. 30

1. _____

2. _____

3. _____

4. _____

5. _____

6. _____

7. _____

8. _____

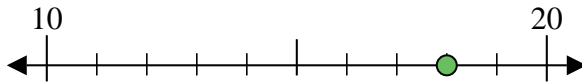
9. _____

10. _____

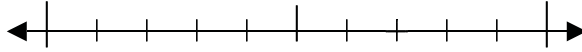


Use the numberlines to round each number to the nearest 10.

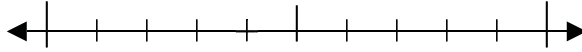
Ex) 18



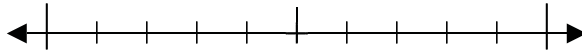
1) 37



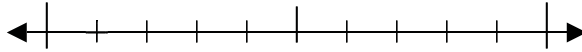
2) 34



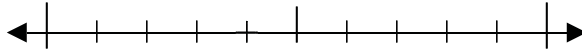
3) 65



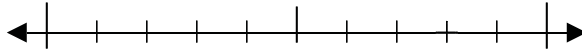
4) 91



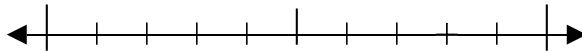
5) 244



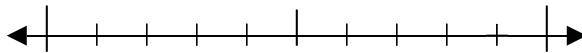
6) 978



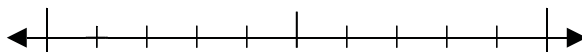
7) 758



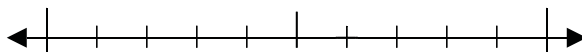
8) 129



9) 5,101



10) 3,626



Answers

Ex. 20

1. _____

2. _____

3. _____

4. _____

5. _____

6. _____

7. _____

8. _____

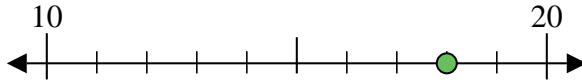
9. _____

10. _____

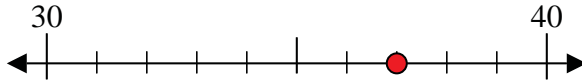


Use the numberlines to round each number to the nearest 10.

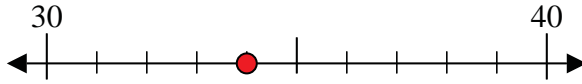
Ex) 18



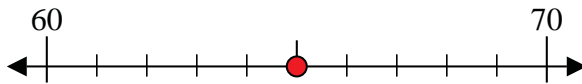
1) 37



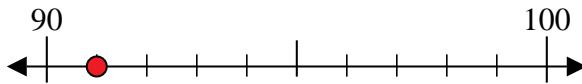
2) 34



3) 65



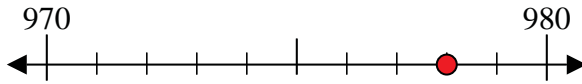
4) 91



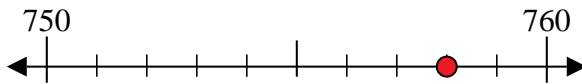
5) 244



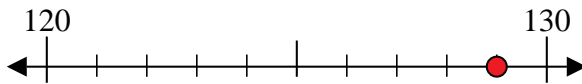
6) 978



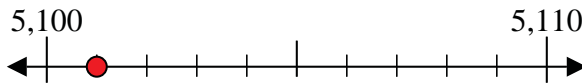
7) 758



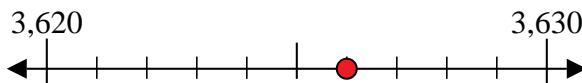
8) 129



9) 5,101



10) 3,626



Answers

Ex. 20

1. 40

2. 30

3. 70

4. 90

5. 240

6. 980

7. 760

8. 130

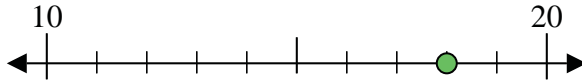
9. 5,100

10. 3,630

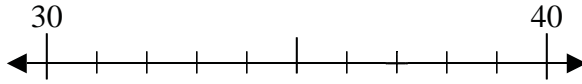


Use the numberlines to round each number to the nearest 10.

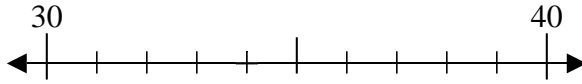
Ex) 18



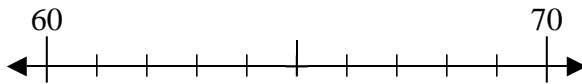
1) 37



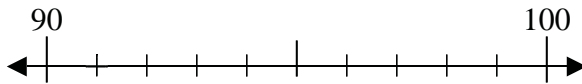
2) 34



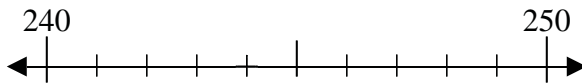
3) 65



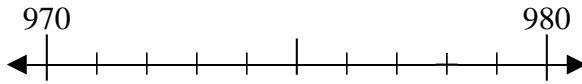
4) 91



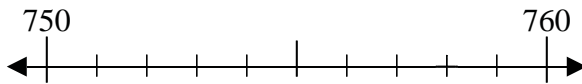
5) 244



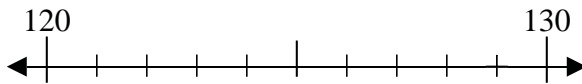
6) 978



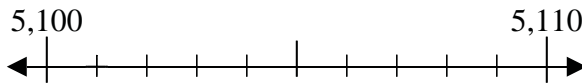
7) 758



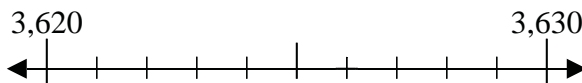
8) 129



9) 5,101



10) 3,626



Answers

Ex. 20

1. _____

2. _____

3. _____

4. _____

5. _____

6. _____

7. _____

8. _____

9. _____

10. _____



Use the numberlines to round each number to the nearest 10.

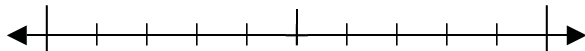
Ex) 84



Answers

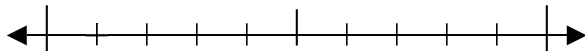
Ex. 80

1) 55



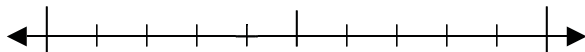
1. _____

2) 51



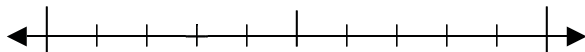
2. _____

3) 24



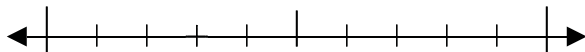
3. _____

4) 23



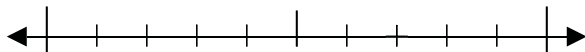
4. _____

5) 873



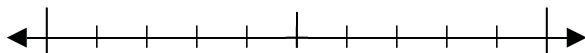
5. _____

6) 597



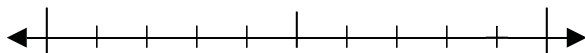
6. _____

7) 905



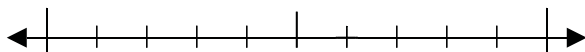
7. _____

8) 119



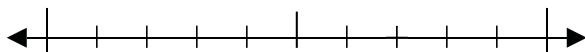
8. _____

9) 3,596



9. _____

10) 1,177

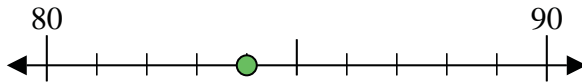


10. _____

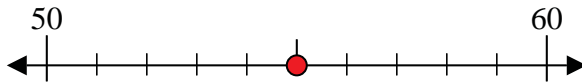


Use the numberlines to round each number to the nearest 10.

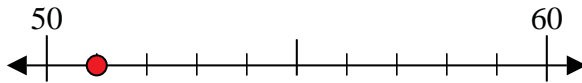
Ex) 84



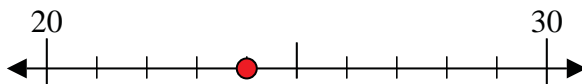
1) 55



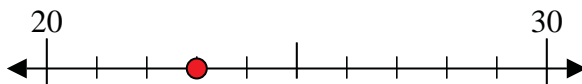
2) 51



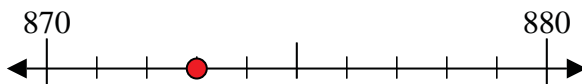
3) 24



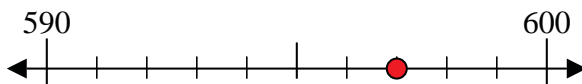
4) 23



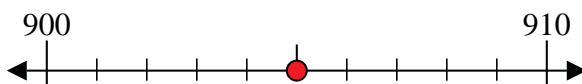
5) 873



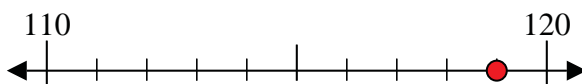
6) 597



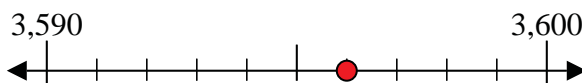
7) 905



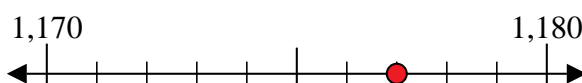
8) 119



9) 3,596



10) 1,177



Answers

Ex. 80

1. 60

2. 50

3. 20

4. 20

5. 870

6. 600

7. 910

8. 120

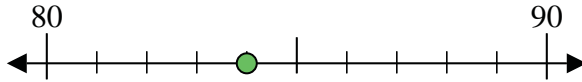
9. 3,600

10. 1,180



Use the numberlines to round each number to the nearest 10.

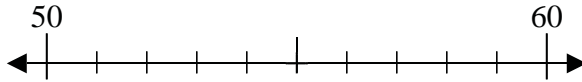
Ex) 84



Answers

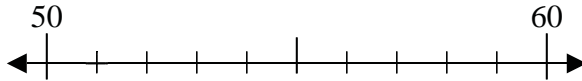
Ex. 80

1) 55



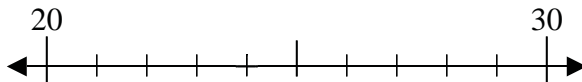
1. _____

2) 51



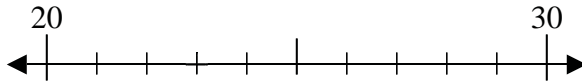
2. _____

3) 24



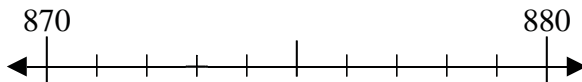
3. _____

4) 23



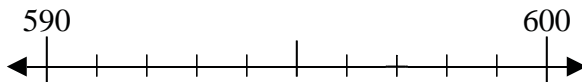
4. _____

5) 873



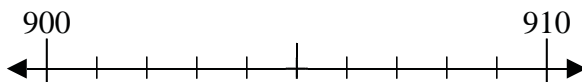
5. _____

6) 597



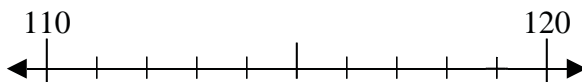
6. _____

7) 905



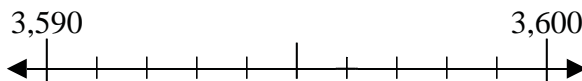
7. _____

8) 119



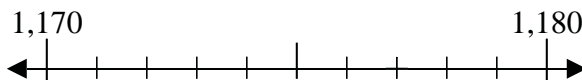
8. _____

9) 3,596



9. _____

10) 1,177

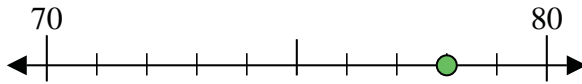


10. _____



Use the numberlines to round each number to the nearest 10.

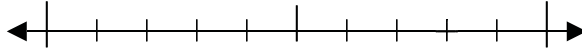
Ex) 78



Answers

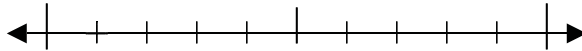
Ex. 80

1) 28



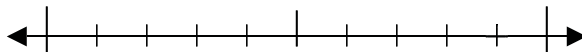
1. _____

2) 51



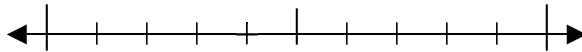
2. _____

3) 79



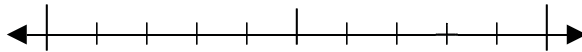
3. _____

4) 14



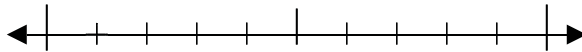
4. _____

5) 898



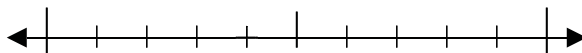
5. _____

6) 681



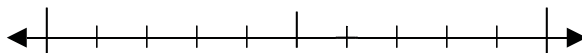
6. _____

7) 194



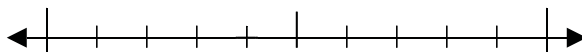
7. _____

8) 896



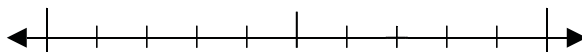
8. _____

9) 2,824



9. _____

10) 6,537

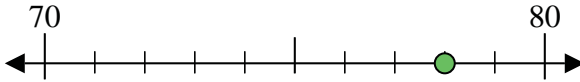


10. _____

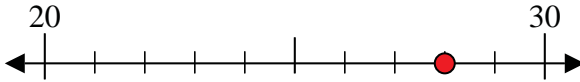


Use the numberlines to round each number to the nearest 10.

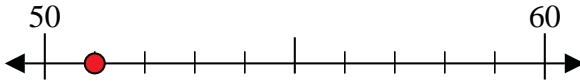
Ex) 78



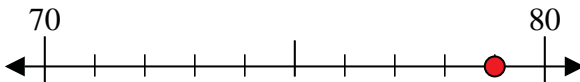
1) 28



2) 51



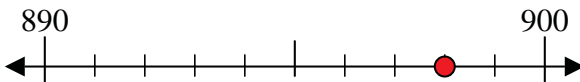
3) 79



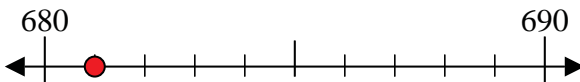
4) 14



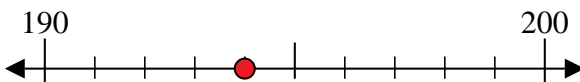
5) 898



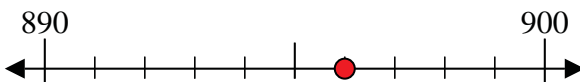
6) 681



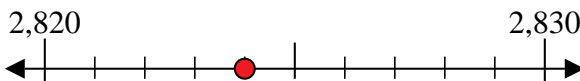
7) 194



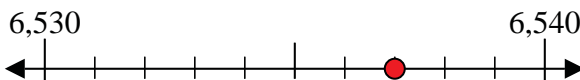
8) 896



9) 2,824



10) 6,537



Answers

Ex. 80

1. 30

2. 50

3. 80

4. 10

5. 900

6. 680

7. 190

8. 900

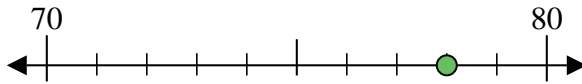
9. 2,820

10. 6,540

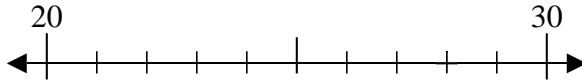


Use the numberlines to round each number to the nearest 10.

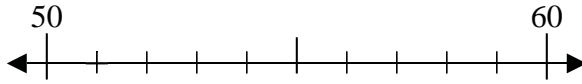
Ex) 78



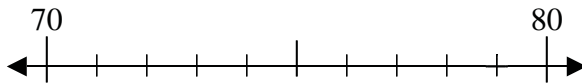
1) 28



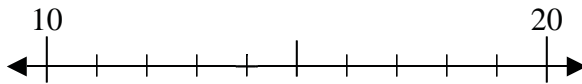
2) 51



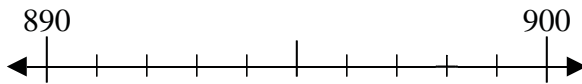
3) 79



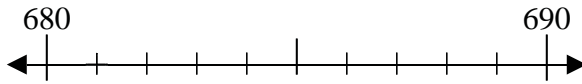
4) 14



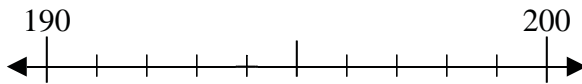
5) 898



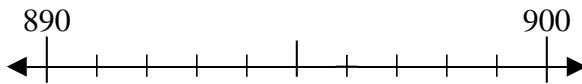
6) 681



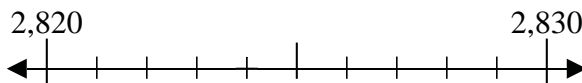
7) 194



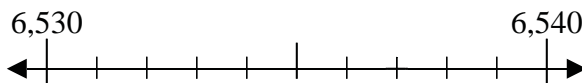
8) 896



9) 2,824



10) 6,537



Answers

Ex. 80

1. _____

2. _____

3. _____

4. _____

5. _____

6. _____

7. _____

8. _____

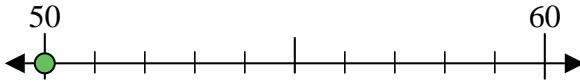
9. _____

10. _____

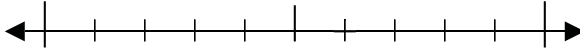


Use the numberlines to round each number to the nearest 10.

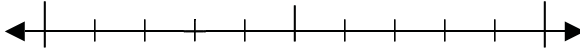
Ex) 50



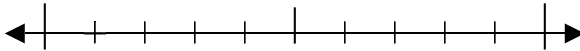
1) 76



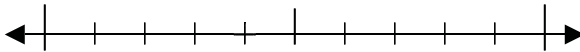
2) 13



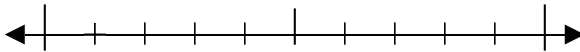
3) 81



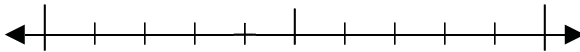
4) 14



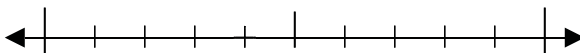
5) 711



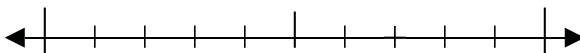
6) 274



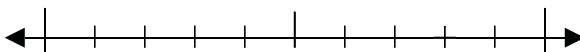
7) 744



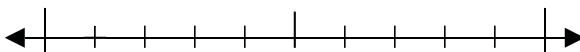
8) 967



9) 9,938



10) 9,621



Answers

Ex. 50

1. _____

2. _____

3. _____

4. _____

5. _____

6. _____

7. _____

8. _____

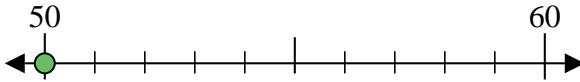
9. _____

10. _____

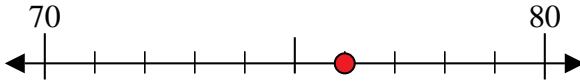


Use the numberlines to round each number to the nearest 10.

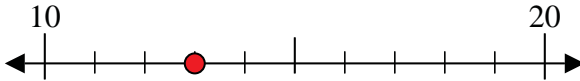
Ex) 50



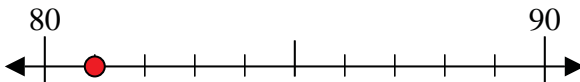
1) 76



2) 13



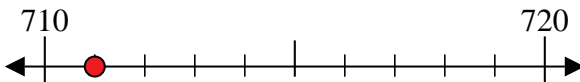
3) 81



4) 14



5) 711



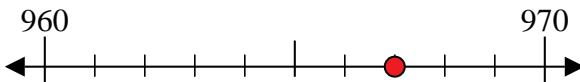
6) 274



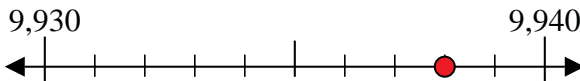
7) 744



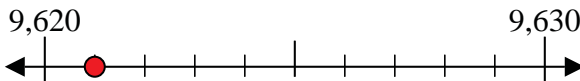
8) 967



9) 9,938



10) 9,621



Answers

Ex. 50

1. 80

2. 10

3. 80

4. 10

5. 710

6. 270

7. 740

8. 970

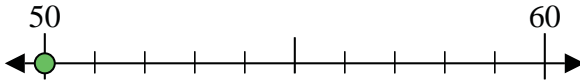
9. 9,940

10. 9,620

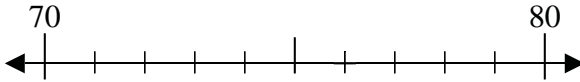


Use the numberlines to round each number to the nearest 10.

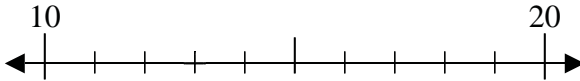
Ex) 50



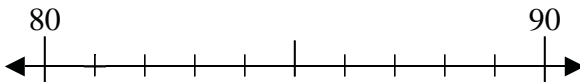
1) 76



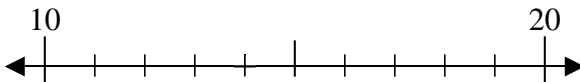
2) 13



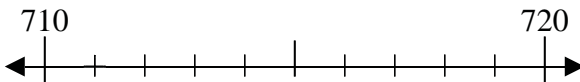
3) 81



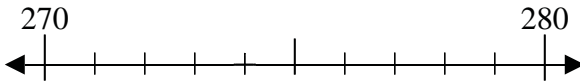
4) 14



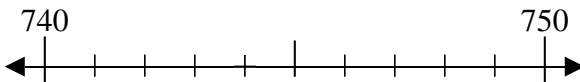
5) 711



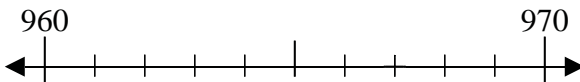
6) 274



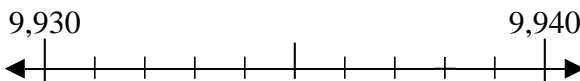
7) 744



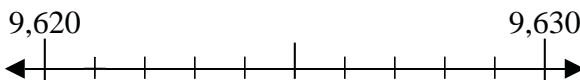
8) 967



9) 9,938



10) 9,621



Answers

Ex. 50

1. _____

2. _____

3. _____

4. _____

5. _____

6. _____

7. _____

8. _____

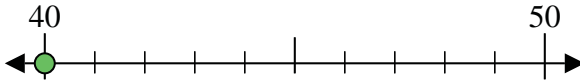
9. _____

10. _____

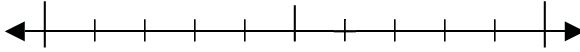


Use the numberlines to round each number to the nearest 10.

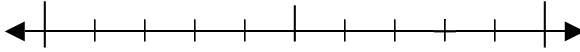
Ex) 40



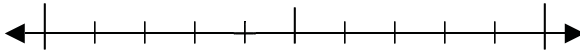
1) 66



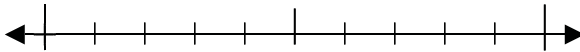
2) 78



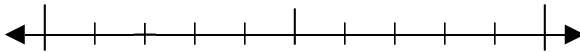
3) 84



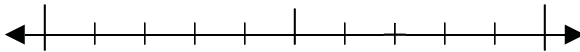
4) 60



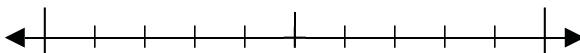
5) 312



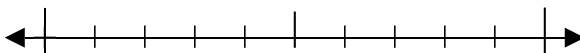
6) 877



7) 895



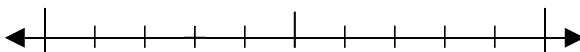
8) 840



9) 1,475



10) 5,843



Answers

Ex. 40

1. _____

2. _____

3. _____

4. _____

5. _____

6. _____

7. _____

8. _____

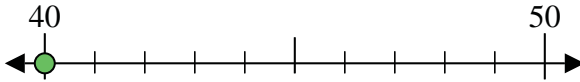
9. _____

10. _____

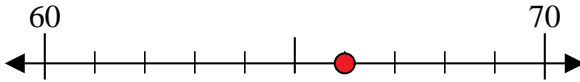


Use the numberlines to round each number to the nearest 10.

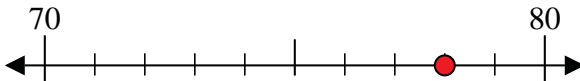
Ex) 40



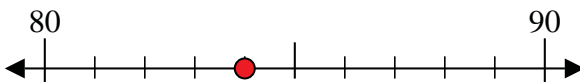
1) 66



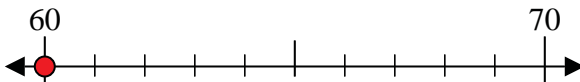
2) 78



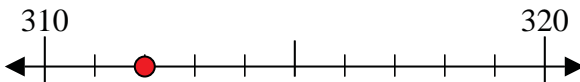
3) 84



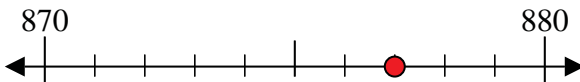
4) 60



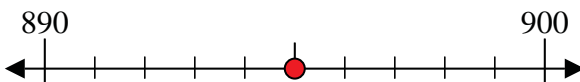
5) 312



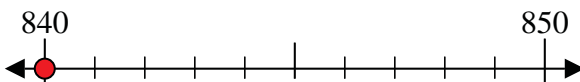
6) 877



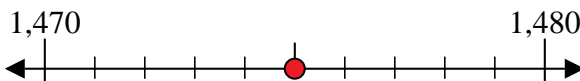
7) 895



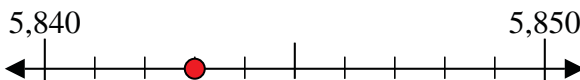
8) 840



9) 1,475



10) 5,843



Answers

Ex. 40

1. 70

2. 80

3. 80

4. 60

5. 310

6. 880

7. 900

8. 840

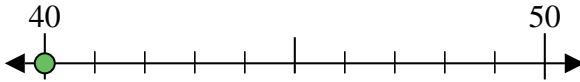
9. 1,480

10. 5,840

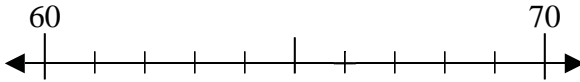


Use the numberlines to round each number to the nearest 10.

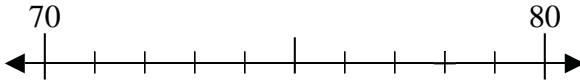
Ex) 40



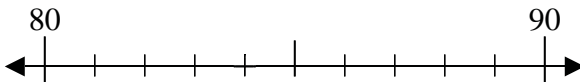
1) 66



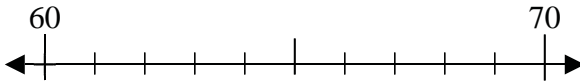
2) 78



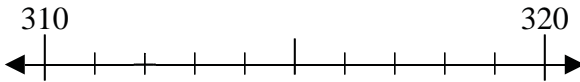
3) 84



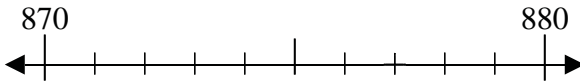
4) 60



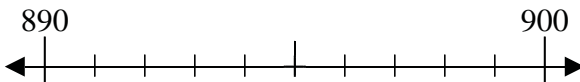
5) 312



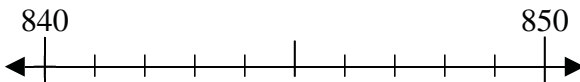
6) 877



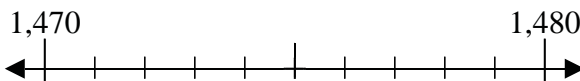
7) 895



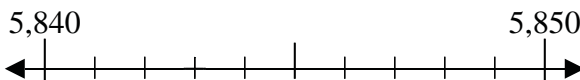
8) 840



9) 1,475



10) 5,843



Answers

Ex. 40

1. _____

2. _____

3. _____

4. _____

5. _____

6. _____

7. _____

8. _____

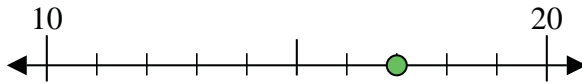
9. _____

10. _____

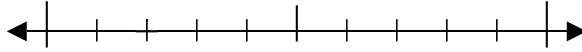


Use the numberlines to round each number to the nearest 10.

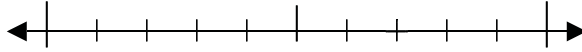
Ex) 17



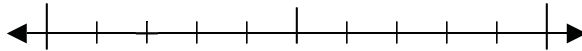
1) 62



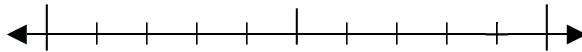
2) 47



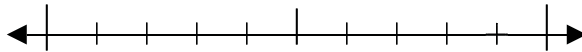
3) 62



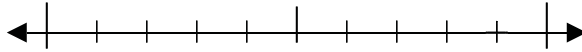
4) 89



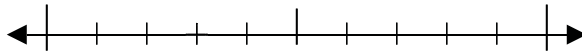
5) 439



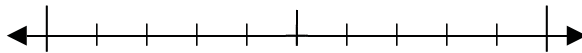
6) 679



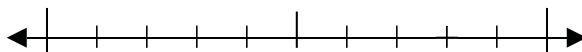
7) 123



8) 285



9) 9,658



10) 9,232



Answers

Ex. 20

1. _____

2. _____

3. _____

4. _____

5. _____

6. _____

7. _____

8. _____

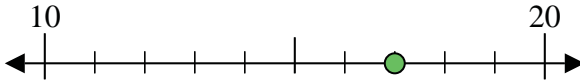
9. _____

10. _____

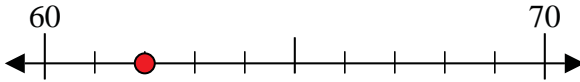


Use the numberlines to round each number to the nearest 10.

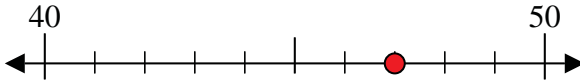
Ex) 17



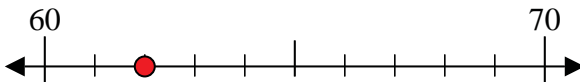
1) 62



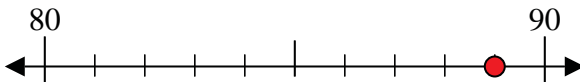
2) 47



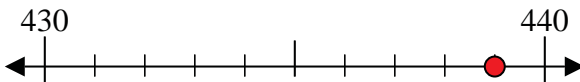
3) 62



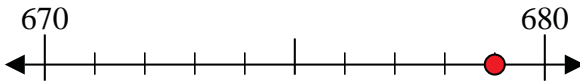
4) 89



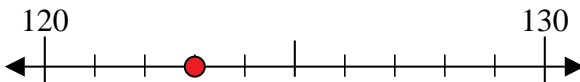
5) 439



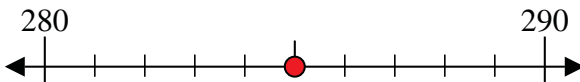
6) 679



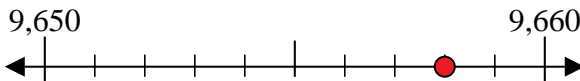
7) 123



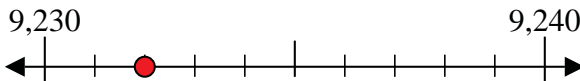
8) 285



9) 9,658



10) 9,232



Answers

Ex. 20

1. 60

2. 50

3. 60

4. 90

5. 440

6. 680

7. 120

8. 290

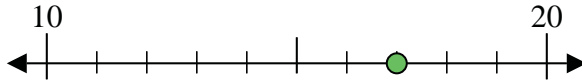
9. 9,660

10. 9,230

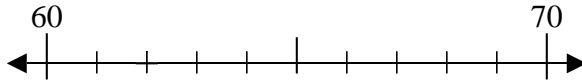


Use the numberlines to round each number to the nearest 10.

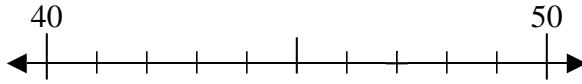
Ex) 17



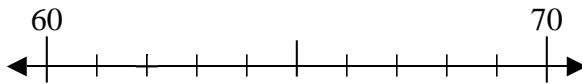
1) 62



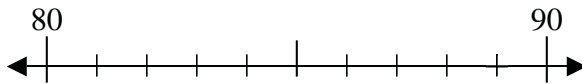
2) 47



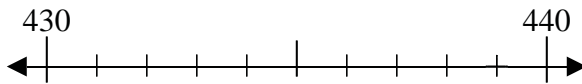
3) 62



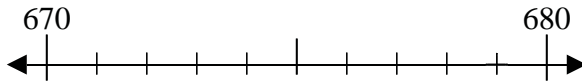
4) 89



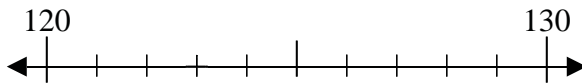
5) 439



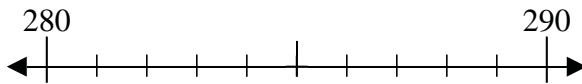
6) 679



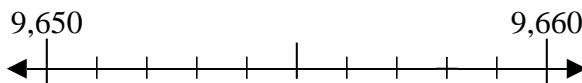
7) 123



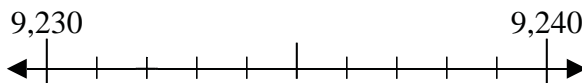
8) 285



9) 9,658



10) 9,232



Answers

Ex. 20

1. _____

2. _____

3. _____

4. _____

5. _____

6. _____

7. _____

8. _____

9. _____

10. _____