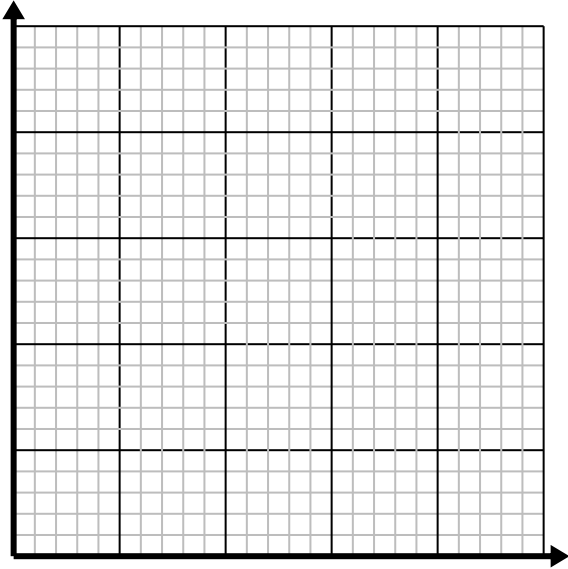




**Solve each problem.**

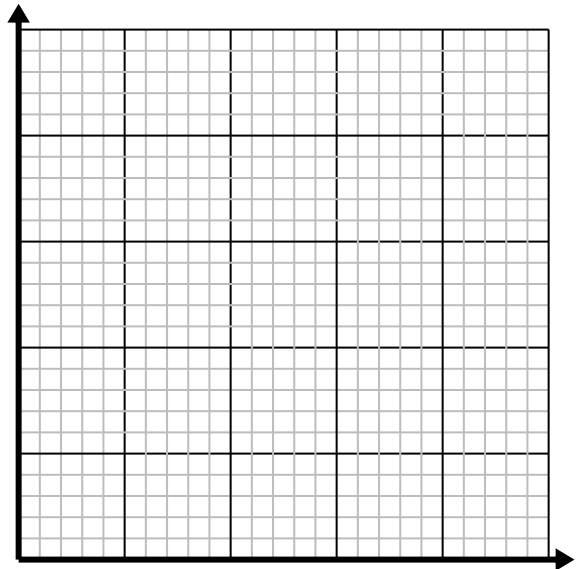
- 1) Every hour Ned walks 2 miles.

Create a table showing the miles travelled over the course of 5 hours, then plot the values on the coordinate plane.

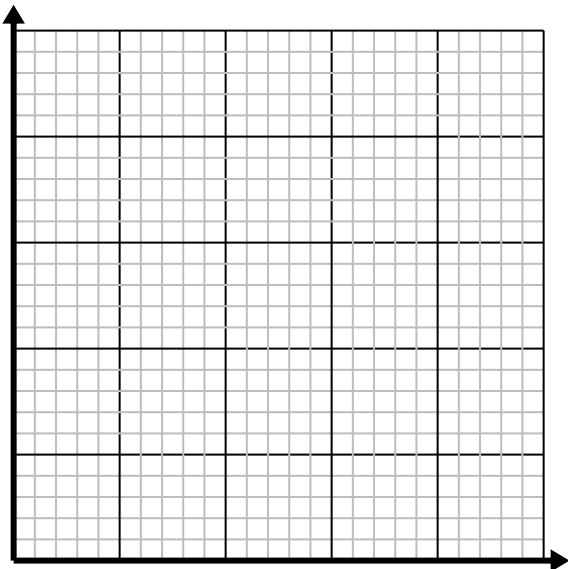
- 2) For every cup of flour 5 batches of cookies can be made.

Create a table showing the cups of flour need for up to 5 batches of cookies, then plot the values on the coordinate plane.

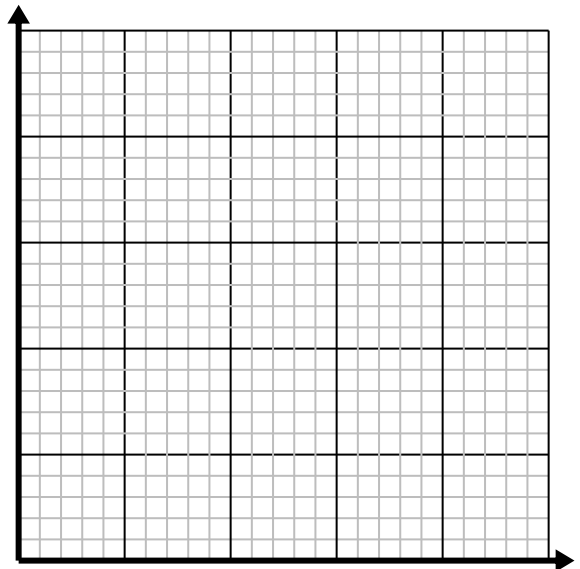
- 3) For every shirts made 3 buttons are used.

Create a table showing the buttons needed for making up to 5 shirts, then plot the values on the coordinate plane.

- 4) Every box of candy has 2 pieces of candy.

Create a table showing the pieces of candy in up to 5 boxes, then plot the values on the coordinate plane.

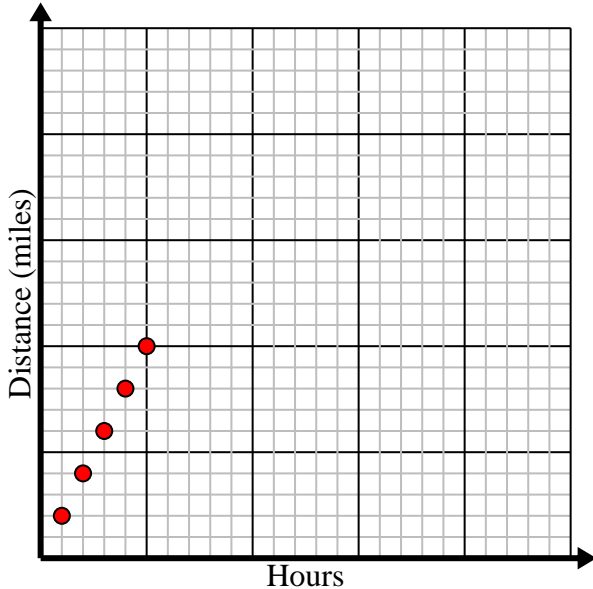


Solve each problem.

- 1) Every hour Ned walks 2 miles.

Create a table showing the miles travelled over the course of 5 hours, then plot the values on the coordinate plane.

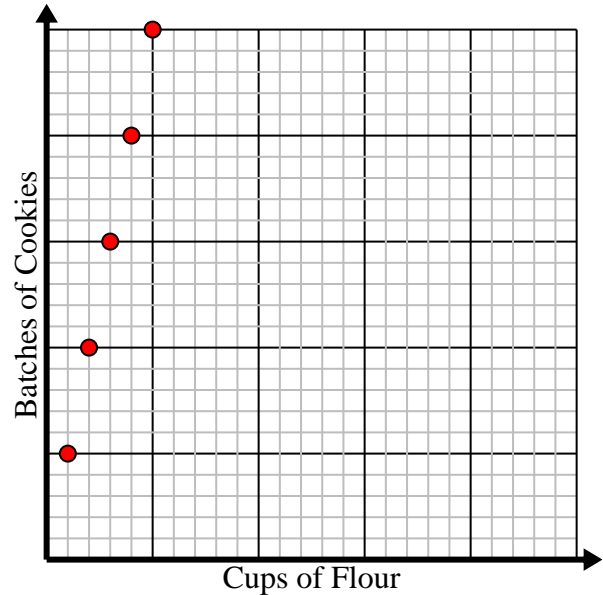
Hours	1	2	3	4	5
Distance (miles)	2	4	6	8	10



- 2) For every cup of flour 5 batches of cookies can be made.

Create a table showing the cups of flour need for up to 5 batches of cookies, then plot the values on the coordinate plane.

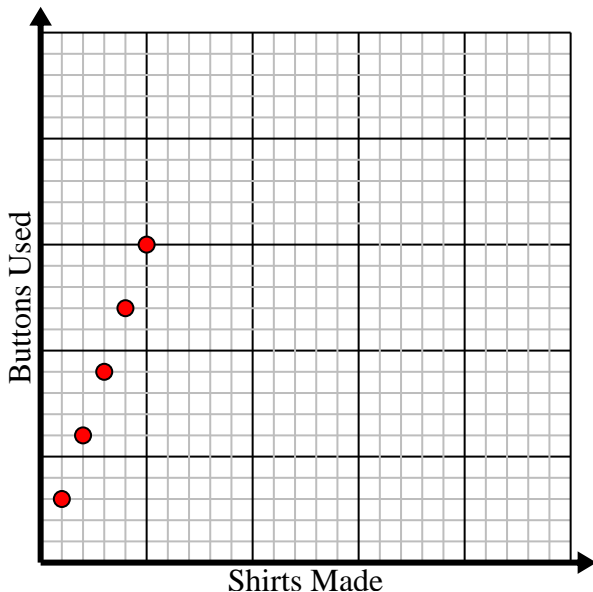
Cups of Flour	1	2	3	4	5
Batches of Cookies	5	10	15	20	25



- 3) For every shirts made 3 buttons are used.

Create a table showing the buttons needed for making up to 5 shirts, then plot the values on the coordinate plane.

Shirts Made	1	2	3	4	5
Buttons Used	3	6	9	12	15



- 4) Every box of candy has 2 pieces of candy.

Create a table showing the pieces of candy in up to 5 boxes, then plot the values on the coordinate plane.

Boxes of Candy	1	2	3	4	5
Pieces of Candy	2	4	6	8	10

