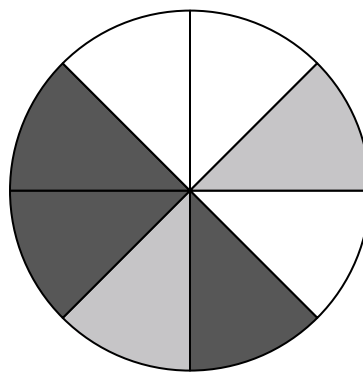





Use each diagram to solve the problems.


- 1) How many pieces are there total in the spinner?
- 2) If you spun the spinner 1 time, what is the probability it would land on a gray piece?
- 3) If you spun the spinner 1 time, what is the probability it would land on a black piece?
- 4) If you spun the spinner 1 time, what is the probability it would land on a white piece?
- 5) If you spun the spinner 1 time, what is the probability of landing on either a gray piece or a white piece?




- Answers**
1. _____
 2. _____
 3. _____
 4. _____
 5. _____
 6. _____
 7. _____
 8. _____
 9. _____
 10. _____
 11. _____
 12. _____



- 6) If you were to roll the dice one time what is the probability it will land on a 4?
- 7) If you were to roll the dice one time what is the probability it will NOT land on a 4?
- 8) If you were to roll the dice one time, what is the probability of it landing on an odd number?



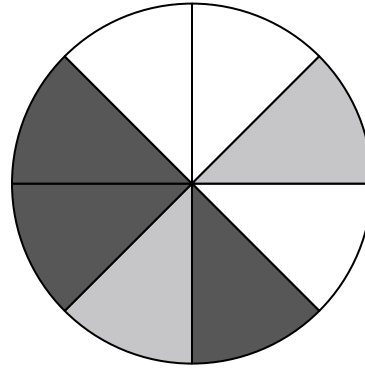
- 9) How many shapes are there total in the array?
- 10) If you were to select 1 shape at random from the array, what is the probability it will be a diamond?
- 11) If you were to select 1 shape at random from the array, what shape do you have the greatest probability of selecting?
- 12) Which shape has a 35% chance (7 out of 20) of being selected?






Use each diagram to solve the problems.


- 1) How many pieces are there total in the spinner?
- 2) If you spun the spinner 1 time, what is the probability it would land on a gray piece?
- 3) If you spun the spinner 1 time, what is the probability it would land on a black piece?
- 4) If you spun the spinner 1 time, what is the probability it would land on a white piece?
- 5) If you spun the spinner 1 time, what is the probability of landing on either a gray piece or a white piece?



- Answers
1. 8
 2. 2 out of 8
 3. 3 out of 8
 4. 3 out of 8
 5. 5 out of 8
 6. 1 out of 6
 7. 5 out of 6
 8. 3 out of 6
 9. 20
 10. 8 out of 20
 11. diamond
 12. heart



- 6) If you were to roll the dice one time what is the probability it will land on a 4?
- 7) If you were to roll the dice one time what is the probability it will NOT land on a 4?
- 8) If you were to roll the dice one time, what is the probability of it landing on an odd number?



- 9) How many shapes are there total in the array?
- 10) If you were to select 1 shape at random from the array, what is the probability it will be a diamond?
- 11) If you were to select 1 shape at random from the array, what shape do you have the greatest probability of selecting?
- 12) Which shape has a 35% chance (7 out of 20) of being selected?

