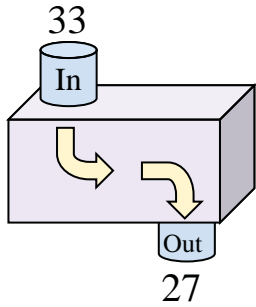




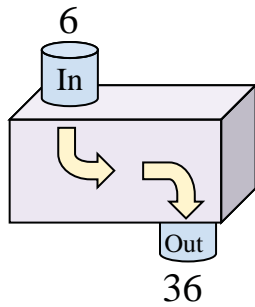


Determine the rule each function machine is using.

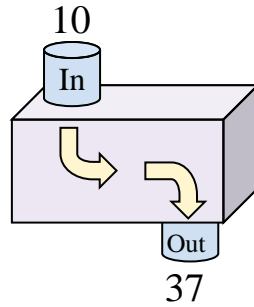
Ex)



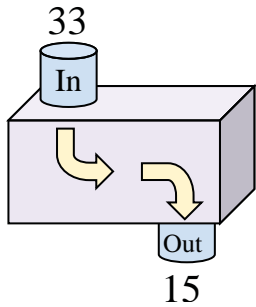
1)



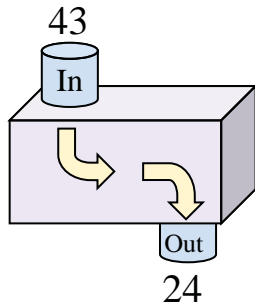
2)



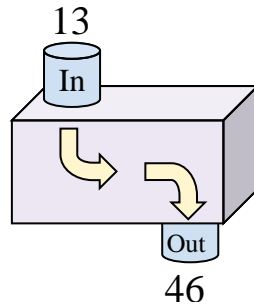
3)



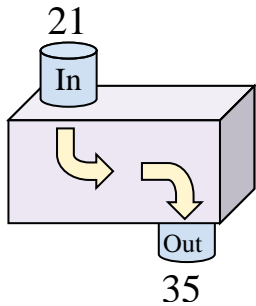
4)



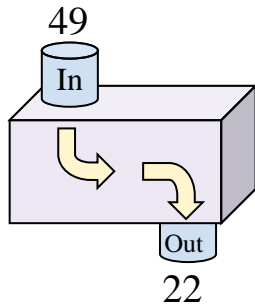
5)



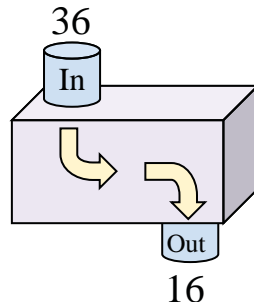
6)



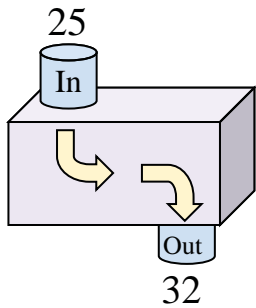
7)



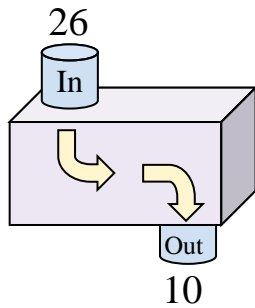
8)



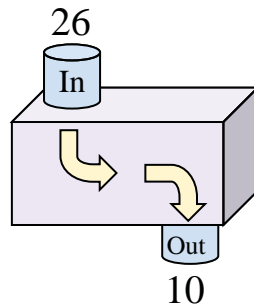
9)



10)



11)



Answers

Ex. **Subtract 6**

1. **Add 30**

2. **Add 27**

3. **Subtract 18**

4. **Subtract 19**

5. **Add 33**

6. **Add 14**

7. **Subtract 27**

8. **Subtract 20**

9. **Add 7**

10. **Subtract 16**

11. **Subtract 16**