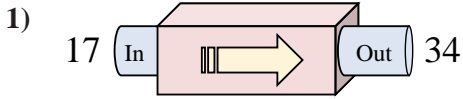
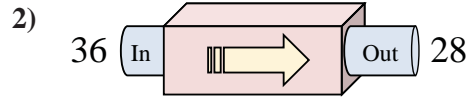




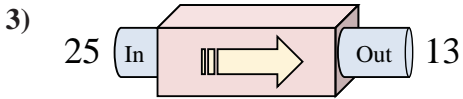
Determine which rule the function machine is using.



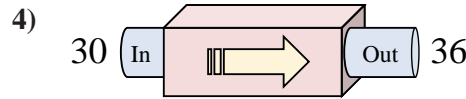
- A. Add 17
- B. Add 16
- C. Add 19
- D. Subtract 16



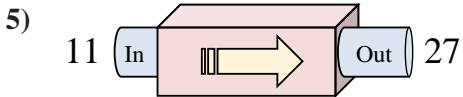
- A. Subtract 11
- B. Add 3
- C. Subtract 8
- D. Subtract 12



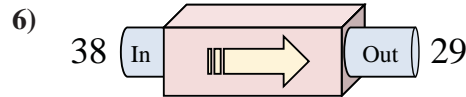
- A. Subtract 9
- B. Subtract 12
- C. Subtract 14
- D. Subtract 15



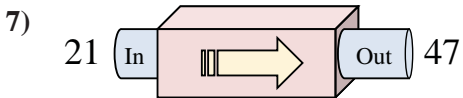
- A. Subtract 6
- B. Add 11
- C. Add 6
- D. Subtract 5



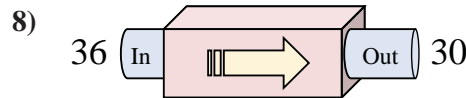
- A. Add 13
- B. Add 12
- C. Subtract 20
- D. Add 16



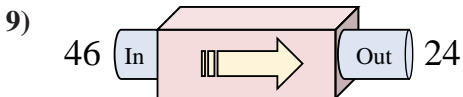
- A. Subtract 8
- B. Add 5
- C. Subtract 9
- D. Add 4



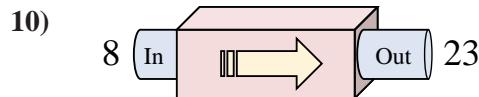
- A. Add 30
- B. Add 26
- C. Add 21
- D. Add 23



- A. Add 2
- B. Subtract 6
- C. Subtract 4
- D. Subtract 10



- A. Subtract 21
- B. Subtract 22
- C. Subtract 17
- D. Subtract 19



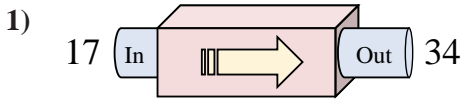
- A. Subtract 20
- B. Add 10
- C. Add 15
- D. Add 19

Answers

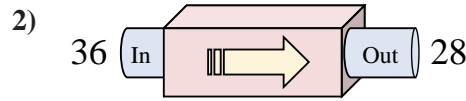
1. _____
2. _____
3. _____
4. _____
5. _____
6. _____
7. _____
8. _____
9. _____
10. _____



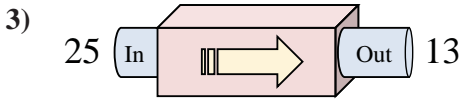
Determine which rule the function machine is using.



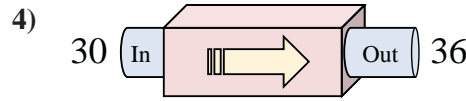
- A. Add 17
- B. Add 16
- C. Add 19
- D. Subtract 16



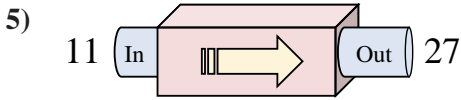
- A. Subtract 11
- B. Add 3
- C. Subtract 8
- D. Subtract 12



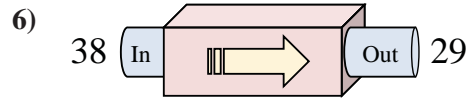
- A. Subtract 9
- B. Subtract 12
- C. Subtract 14
- D. Subtract 15



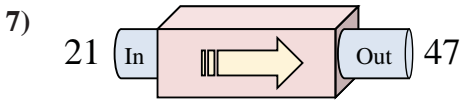
- A. Subtract 6
- B. Add 11
- C. Add 6
- D. Subtract 5



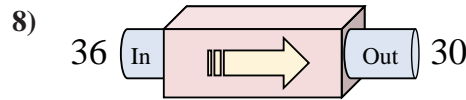
- A. Add 13
- B. Add 12
- C. Subtract 20
- D. Add 16



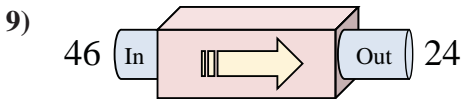
- A. Subtract 8
- B. Add 5
- C. Subtract 9
- D. Add 4



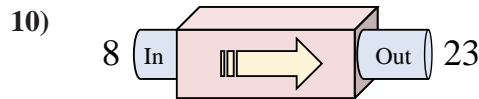
- A. Add 30
- B. Add 26
- C. Add 21
- D. Add 23



- A. Add 2
- B. Subtract 6
- C. Subtract 4
- D. Subtract 10



- A. Subtract 21
- B. Subtract 22
- C. Subtract 17
- D. Subtract 19



- A. Subtract 20
- B. Add 10
- C. Add 15
- D. Add 19

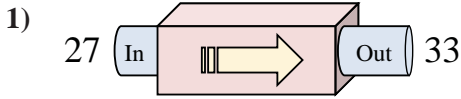
Answers

- 1. **A**
- 2. **C**
- 3. **B**
- 4. **C**
- 5. **D**
- 6. **C**
- 7. **B**
- 8. **B**
- 9. **B**
- 10. **C**

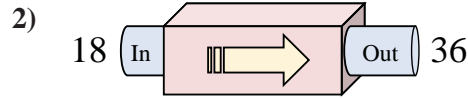


Determine which rule the function machine is using.

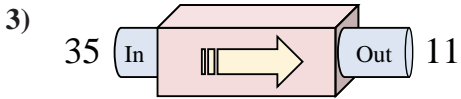
Answers



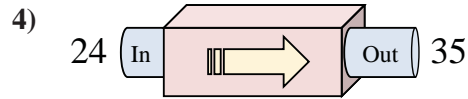
- A. Add 5
- B. Subtract 2
- C. Add 8
- D. Add 6



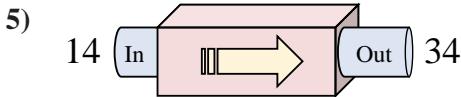
- A. Subtract 17
- B. Add 21
- C. Add 18
- D. Add 13



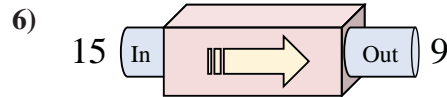
- A. Subtract 24
- B. Subtract 22
- C. Subtract 28
- D. Add 25



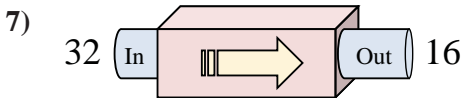
- A. Add 15
- B. Subtract 11
- C. Add 11
- D. Add 10



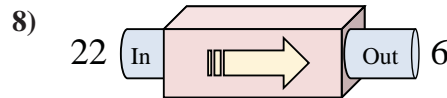
- A. Add 25
- B. Add 20
- C. Add 16
- D. Add 21



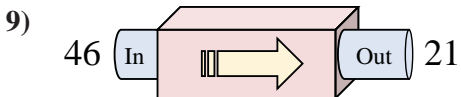
- A. Subtract 5
- B. Subtract 11
- C. Subtract 8
- D. Subtract 6



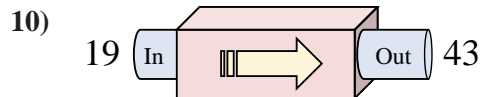
- A. Subtract 12
- B. Subtract 16
- C. Subtract 17
- D. Subtract 11



- A. Subtract 16
- B. Subtract 21
- C. Add 17
- D. Subtract 20



- A. Subtract 25
- B. Subtract 29
- C. Subtract 21
- D. Add 30

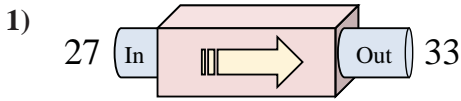


- A. Subtract 19
- B. Add 24
- C. Add 19
- D. Subtract 26

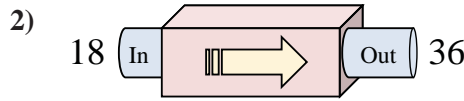
1. _____
2. _____
3. _____
4. _____
5. _____
6. _____
7. _____
8. _____
9. _____
10. _____



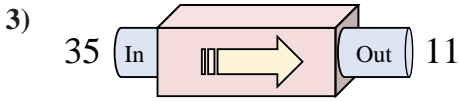
Determine which rule the function machine is using.



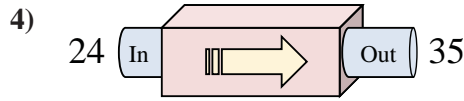
- A. Add 5
- B. Subtract 2
- C. Add 8
- D. Add 6



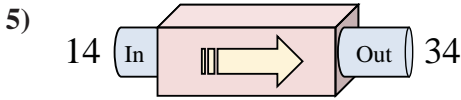
- A. Subtract 17
- B. Add 21
- C. Add 18
- D. Add 13



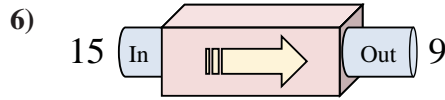
- A. Subtract 24
- B. Subtract 22
- C. Subtract 28
- D. Add 25



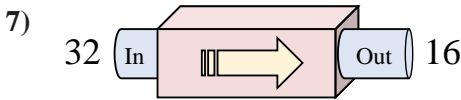
- A. Add 15
- B. Subtract 11
- C. Add 11
- D. Add 10



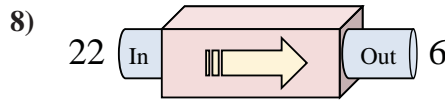
- A. Add 25
- B. Add 20
- C. Add 16
- D. Add 21



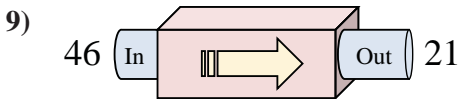
- A. Subtract 5
- B. Subtract 11
- C. Subtract 8
- D. Subtract 6



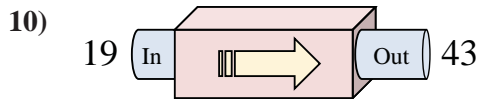
- A. Subtract 12
- B. Subtract 16
- C. Subtract 17
- D. Subtract 11



- A. Subtract 16
- B. Subtract 21
- C. Add 17
- D. Subtract 20



- A. Subtract 25
- B. Subtract 29
- C. Subtract 21
- D. Add 30



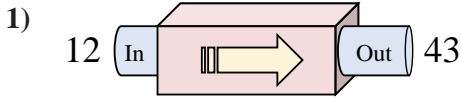
- A. Subtract 19
- B. Add 24
- C. Add 19
- D. Subtract 26

Answers

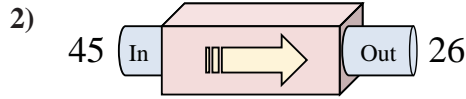
- 1. **D**
- 2. **C**
- 3. **A**
- 4. **C**
- 5. **B**
- 6. **D**
- 7. **B**
- 8. **A**
- 9. **A**
- 10. **B**



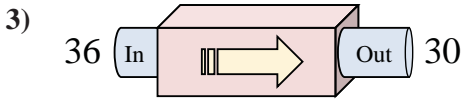
Determine which rule the function machine is using.



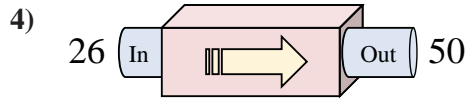
- A. Add 30
- B. Add 35
- C. Subtract 31
- D. Add 31



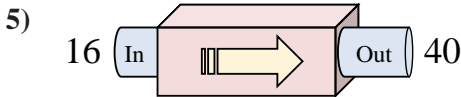
- A. Subtract 20
- B. Subtract 19
- C. Subtract 23
- D. Subtract 22



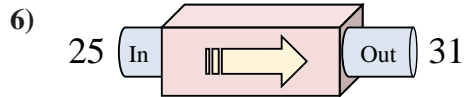
- A. Subtract 6
- B. Add 10
- C. Subtract 8
- D. Subtract 7



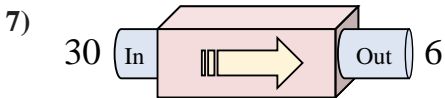
- A. Add 29
- B. Subtract 20
- C. Add 27
- D. Add 24



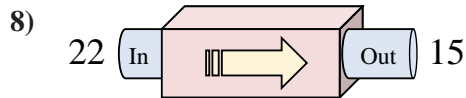
- A. Add 22
- B. Add 29
- C. Add 24
- D. Subtract 27



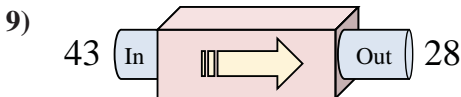
- A. Add 11
- B. Add 6
- C. Add 10
- D. Subtract 9



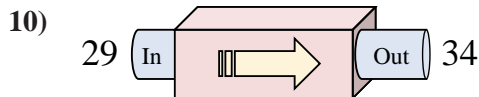
- A. Subtract 24
- B. Subtract 27
- C. Add 26
- D. Subtract 21



- A. Subtract 12
- B. Subtract 7
- C. Add 7
- D. Subtract 8



- A. Add 18
- B. Subtract 13
- C. Subtract 15
- D. Subtract 18



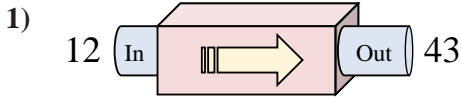
- A. Subtract 7
- B. Add 5
- C. Add 8
- D. Add 2

Answers

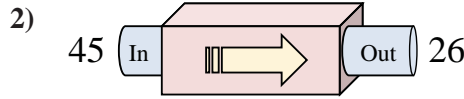
1. _____
2. _____
3. _____
4. _____
5. _____
6. _____
7. _____
8. _____
9. _____
10. _____



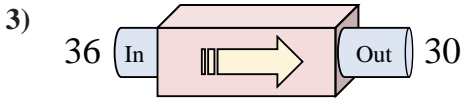
Determine which rule the function machine is using.



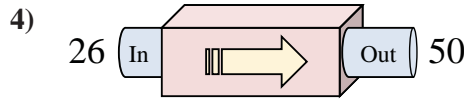
- A. Add 30
- B. Add 35
- C. Subtract 31
- D. Add 31



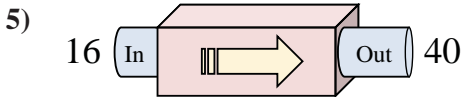
- A. Subtract 20
- B. Subtract 19
- C. Subtract 23
- D. Subtract 22



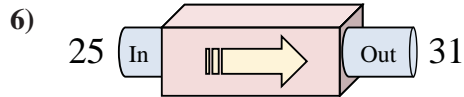
- A. Subtract 6
- B. Add 10
- C. Subtract 8
- D. Subtract 7



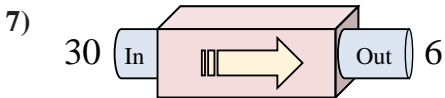
- A. Add 29
- B. Subtract 20
- C. Add 27
- D. Add 24



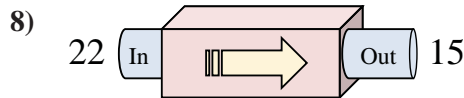
- A. Add 22
- B. Add 29
- C. Add 24
- D. Subtract 27



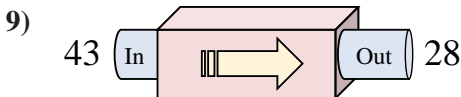
- A. Add 11
- B. Add 6
- C. Add 10
- D. Subtract 9



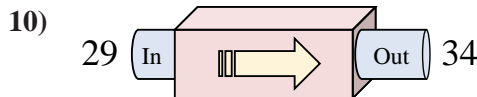
- A. Subtract 24
- B. Subtract 27
- C. Add 26
- D. Subtract 21



- A. Subtract 12
- B. Subtract 7
- C. Add 7
- D. Subtract 8



- A. Add 18
- B. Subtract 13
- C. Subtract 15
- D. Subtract 18



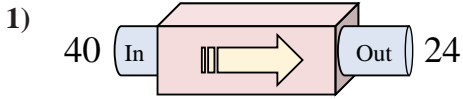
- A. Subtract 7
- B. Add 5
- C. Add 8
- D. Add 2

Answers

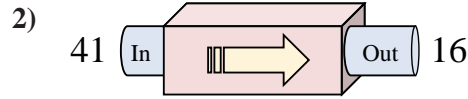
- 1. **D**
- 2. **B**
- 3. **A**
- 4. **D**
- 5. **C**
- 6. **B**
- 7. **A**
- 8. **B**
- 9. **C**
- 10. **B**



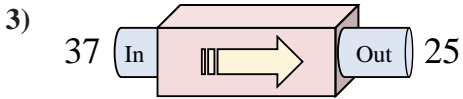
Determine which rule the function machine is using.



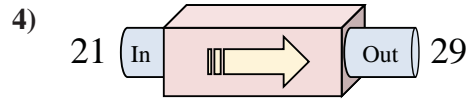
- A. Add 19
- B. Subtract 14
- C. Subtract 16
- D. Subtract 18



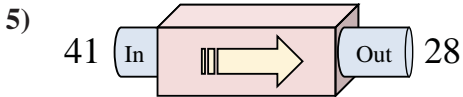
- A. Subtract 23
- B. Subtract 26
- C. Subtract 28
- D. Subtract 25



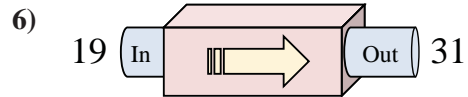
- A. Add 8
- B. Subtract 16
- C. Subtract 13
- D. Subtract 12



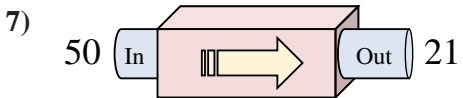
- A. Add 8
- B. Add 9
- C. Add 7
- D. Add 3



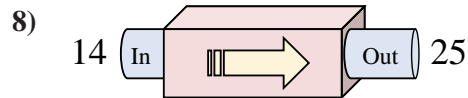
- A. Subtract 13
- B. Add 11
- C. Subtract 9
- D. Subtract 8



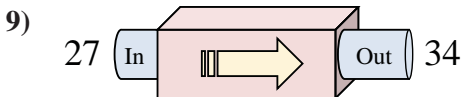
- A. Add 17
- B. Add 12
- C. Add 9
- D. Add 11



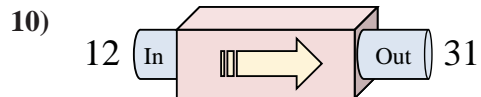
- A. Add 32
- B. Subtract 29
- C. Subtract 25
- D. Subtract 30



- A. Add 15
- B. Add 13
- C. Add 11
- D. Add 6



- A. Add 3
- B. Add 5
- C. Add 8
- D. Add 7



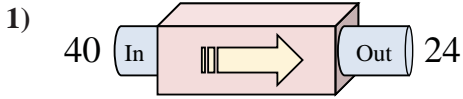
- A. Add 20
- B. Subtract 23
- C. Add 19
- D. Add 23

Answers

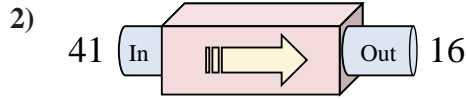
1. _____
2. _____
3. _____
4. _____
5. _____
6. _____
7. _____
8. _____
9. _____
10. _____



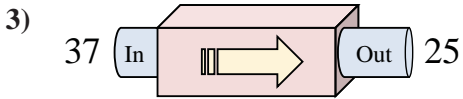
Determine which rule the function machine is using.



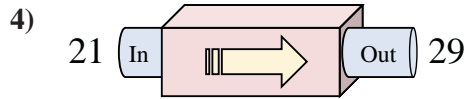
- A. Add 19
- B. Subtract 14
- C. Subtract 16
- D. Subtract 18



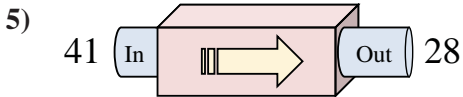
- A. Subtract 23
- B. Subtract 26
- C. Subtract 28
- D. Subtract 25



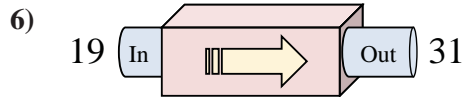
- A. Add 8
- B. Subtract 16
- C. Subtract 13
- D. Subtract 12



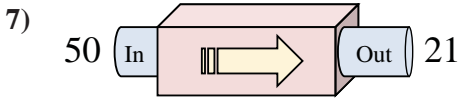
- A. Add 8
- B. Add 9
- C. Add 7
- D. Add 3



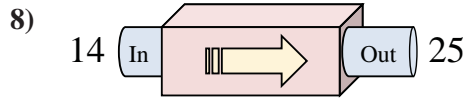
- A. Subtract 13
- B. Add 11
- C. Subtract 9
- D. Subtract 8



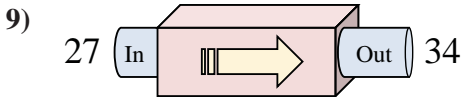
- A. Add 17
- B. Add 12
- C. Add 9
- D. Add 11



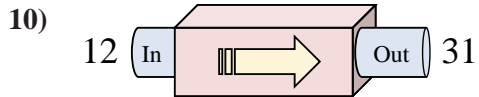
- A. Add 32
- B. Subtract 29
- C. Subtract 25
- D. Subtract 30



- A. Add 15
- B. Add 13
- C. Add 11
- D. Add 6



- A. Add 3
- B. Add 5
- C. Add 8
- D. Add 7



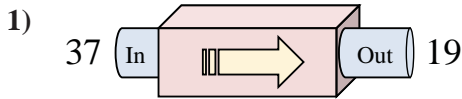
- A. Add 20
- B. Subtract 23
- C. Add 19
- D. Add 23

Answers

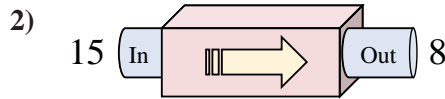
- 1. **C**
- 2. **D**
- 3. **D**
- 4. **A**
- 5. **A**
- 6. **B**
- 7. **B**
- 8. **C**
- 9. **D**
- 10. **C**



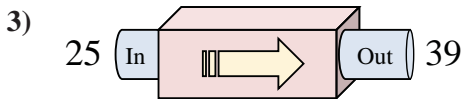
Determine which rule the function machine is using.



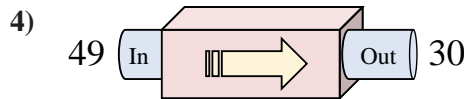
- A. Subtract 14
- B. Add 19
- C. Subtract 22
- D. Subtract 18



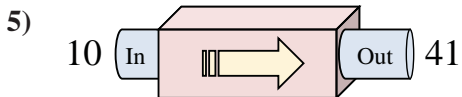
- A. Subtract 7
- B. Add 5
- C. Subtract 9
- D. Add 3



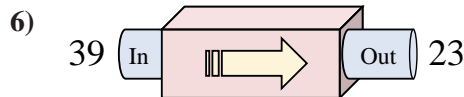
- A. Add 14
- B. Add 15
- C. Add 10
- D. Subtract 16



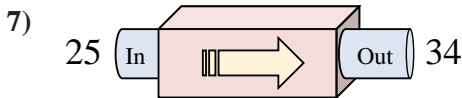
- A. Subtract 22
- B. Subtract 15
- C. Subtract 19
- D. Subtract 18



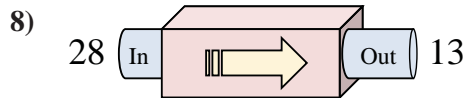
- A. Add 27
- B. Add 31
- C. Subtract 30
- D. Add 29



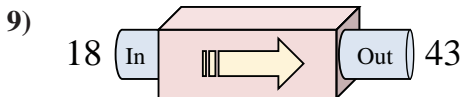
- A. Subtract 16
- B. Subtract 11
- C. Subtract 17
- D. Add 20



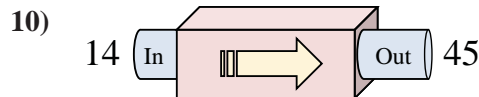
- A. Add 5
- B. Add 10
- C. Add 14
- D. Add 9



- A. Add 12
- B. Subtract 15
- C. Subtract 11
- D. Subtract 18



- A. Add 26
- B. Add 22
- C. Add 25
- D. Add 30



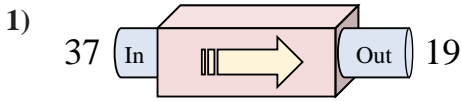
- A. Add 26
- B. Add 31
- C. Subtract 29
- D. Add 34

Answers

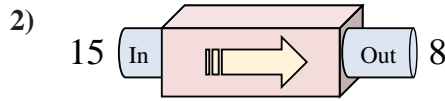
1. _____
2. _____
3. _____
4. _____
5. _____
6. _____
7. _____
8. _____
9. _____
10. _____



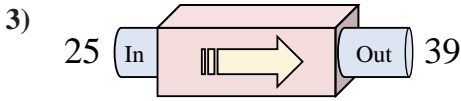
Determine which rule the function machine is using.



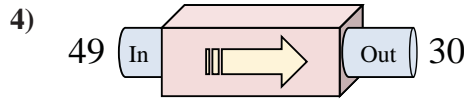
- A. Subtract 14
- B. Add 19
- C. Subtract 22
- D. Subtract 18



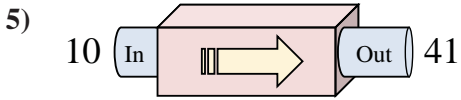
- A. Subtract 7
- B. Add 5
- C. Subtract 9
- D. Add 3



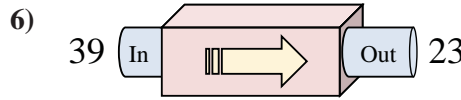
- A. Add 14
- B. Add 15
- C. Add 10
- D. Subtract 16



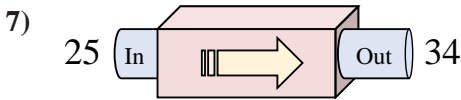
- A. Subtract 22
- B. Subtract 15
- C. Subtract 19
- D. Subtract 18



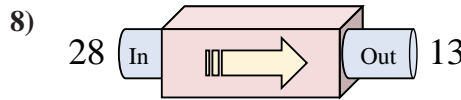
- A. Add 27
- B. Add 31
- C. Subtract 30
- D. Add 29



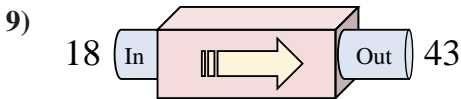
- A. Subtract 16
- B. Subtract 11
- C. Subtract 17
- D. Add 20



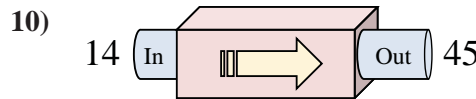
- A. Add 5
- B. Add 10
- C. Add 14
- D. Add 9



- A. Add 12
- B. Subtract 15
- C. Subtract 11
- D. Subtract 18



- A. Add 26
- B. Add 22
- C. Add 25
- D. Add 30



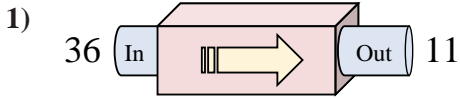
- A. Add 26
- B. Add 31
- C. Subtract 29
- D. Add 34

Answers

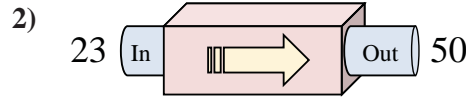
- 1. **D**
- 2. **A**
- 3. **A**
- 4. **C**
- 5. **B**
- 6. **A**
- 7. **D**
- 8. **B**
- 9. **C**
- 10. **B**



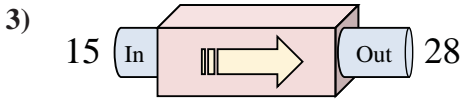
Determine which rule the function machine is using.



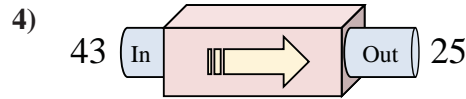
- A. Subtract 24
- B. Subtract 25
- C. Subtract 22
- D. Add 22



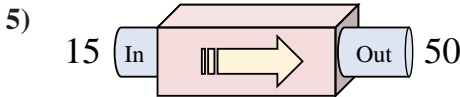
- A. Add 31
- B. Add 24
- C. Add 25
- D. Add 27



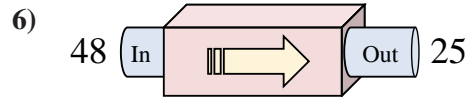
- A. Add 15
- B. Add 10
- C. Add 13
- D. Add 14



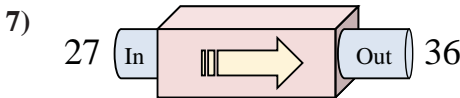
- A. Subtract 18
- B. Subtract 21
- C. Add 21
- D. Subtract 17



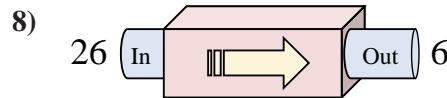
- A. Add 35
- B. Add 40
- C. Add 39
- D. Subtract 32



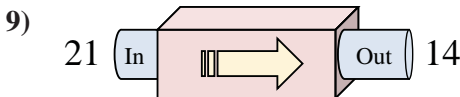
- A. Subtract 18
- B. Subtract 23
- C. Subtract 24
- D. Add 28



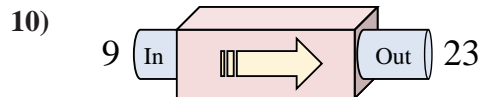
- A. Add 8
- B. Subtract 5
- C. Add 7
- D. Add 9



- A. Add 22
- B. Subtract 25
- C. Subtract 18
- D. Subtract 20



- A. Add 5
- B. Subtract 12
- C. Subtract 6
- D. Subtract 7



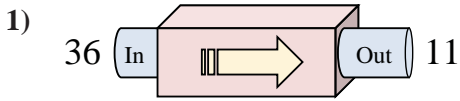
- A. Subtract 17
- B. Add 13
- C. Add 15
- D. Add 14

Answers

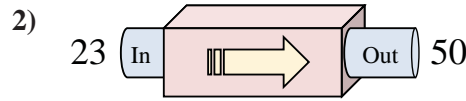
1. _____
2. _____
3. _____
4. _____
5. _____
6. _____
7. _____
8. _____
9. _____
10. _____



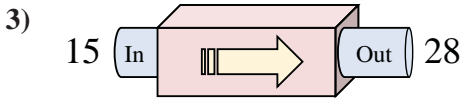
Determine which rule the function machine is using.



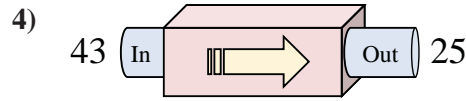
- A. Subtract 24
- B. Subtract 25
- C. Subtract 22
- D. Add 22



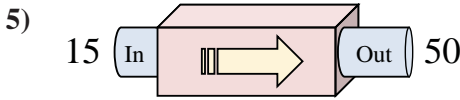
- A. Add 31
- B. Add 24
- C. Add 25
- D. Add 27



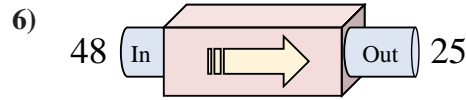
- A. Add 15
- B. Add 10
- C. Add 13
- D. Add 14



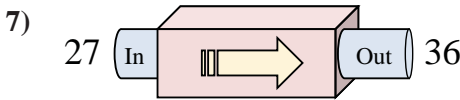
- A. Subtract 18
- B. Subtract 21
- C. Add 21
- D. Subtract 17



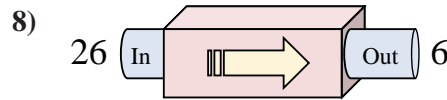
- A. Add 35
- B. Add 40
- C. Add 39
- D. Subtract 32



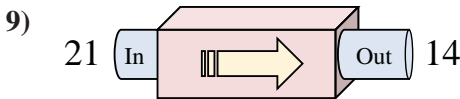
- A. Subtract 18
- B. Subtract 23
- C. Subtract 24
- D. Add 28



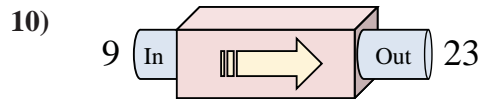
- A. Add 8
- B. Subtract 5
- C. Add 7
- D. Add 9



- A. Add 22
- B. Subtract 25
- C. Subtract 18
- D. Subtract 20



- A. Add 5
- B. Subtract 12
- C. Subtract 6
- D. Subtract 7



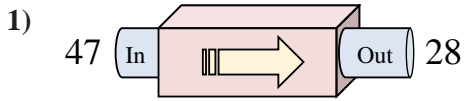
- A. Subtract 17
- B. Add 13
- C. Add 15
- D. Add 14

Answers

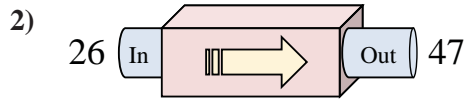
- 1. **B**
- 2. **D**
- 3. **C**
- 4. **A**
- 5. **A**
- 6. **B**
- 7. **D**
- 8. **D**
- 9. **D**
- 10. **D**



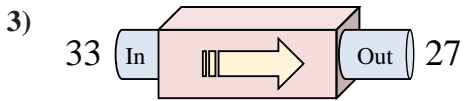
Determine which rule the function machine is using.



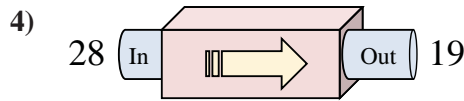
- A. Subtract 22
- B. Subtract 21
- C. Subtract 19
- D. Subtract 17



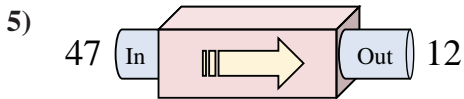
- A. Add 21
- B. Add 17
- C. Add 20
- D. Subtract 22



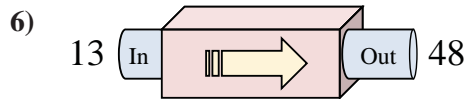
- A. Add 11
- B. Subtract 6
- C. Subtract 1
- D. Add 5



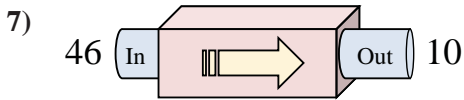
- A. Subtract 14
- B. Subtract 13
- C. Subtract 9
- D. Subtract 6



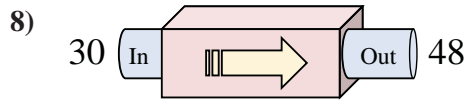
- A. Subtract 35
- B. Subtract 33
- C. Add 39
- D. Subtract 40



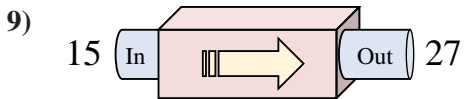
- A. Add 30
- B. Subtract 33
- C. Add 35
- D. Add 37



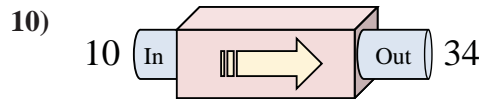
- A. Add 36
- B. Subtract 38
- C. Subtract 40
- D. Subtract 36



- A. Add 15
- B. Add 18
- C. Add 22
- D. Add 16



- A. Subtract 12
- B. Add 11
- C. Add 13
- D. Add 12



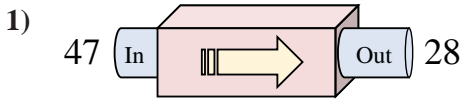
- A. Add 29
- B. Add 24
- C. Add 20
- D. Subtract 28

Answers

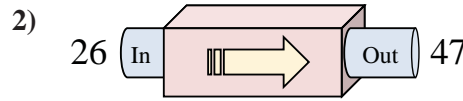
1. _____
2. _____
3. _____
4. _____
5. _____
6. _____
7. _____
8. _____
9. _____
10. _____



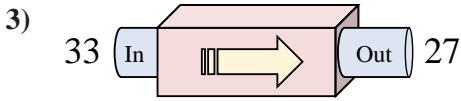
Determine which rule the function machine is using.



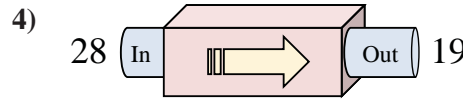
- A. Subtract 22
- B. Subtract 21
- C. Subtract 19
- D. Subtract 17



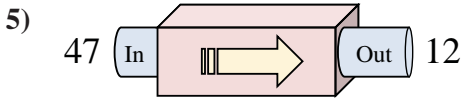
- A. Add 21
- B. Add 17
- C. Add 20
- D. Subtract 22



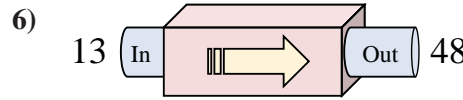
- A. Add 11
- B. Subtract 6
- C. Subtract 1
- D. Add 5



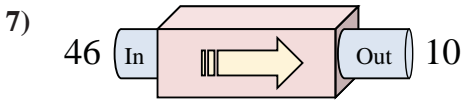
- A. Subtract 14
- B. Subtract 13
- C. Subtract 9
- D. Subtract 6



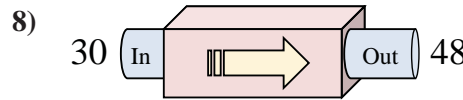
- A. Subtract 35
- B. Subtract 33
- C. Add 39
- D. Subtract 40



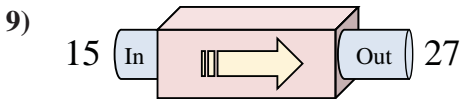
- A. Add 30
- B. Subtract 33
- C. Add 35
- D. Add 37



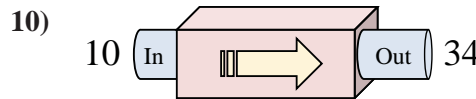
- A. Add 36
- B. Subtract 38
- C. Subtract 40
- D. Subtract 36



- A. Add 15
- B. Add 18
- C. Add 22
- D. Add 16



- A. Subtract 12
- B. Add 11
- C. Add 13
- D. Add 12



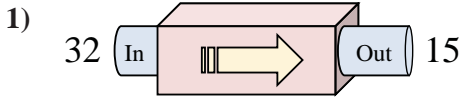
- A. Add 29
- B. Add 24
- C. Add 20
- D. Subtract 28

Answers

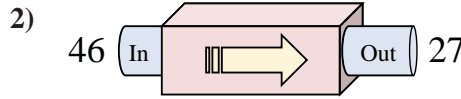
1. **C**
2. **A**
3. **B**
4. **C**
5. **A**
6. **C**
7. **D**
8. **B**
9. **D**
10. **B**



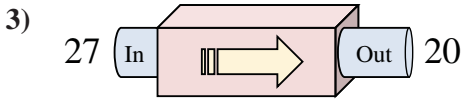
Determine which rule the function machine is using.



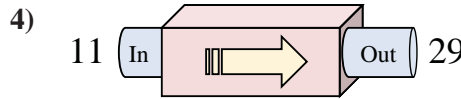
- A. Subtract 15
- B. Subtract 17
- C. Subtract 16
- D. Subtract 19



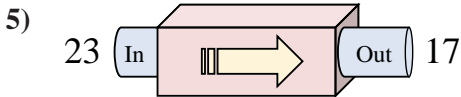
- A. Subtract 14
- B. Subtract 19
- C. Subtract 21
- D. Subtract 15



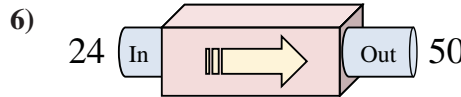
- A. Subtract 9
- B. Add 2
- C. Subtract 7
- D. Subtract 12



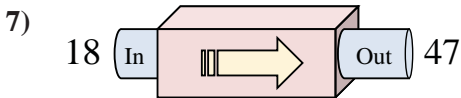
- A. Add 18
- B. Subtract 16
- C. Add 14
- D. Add 15



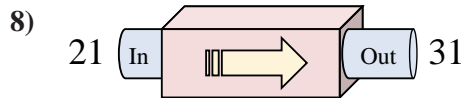
- A. Add 9
- B. Subtract 6
- C. Subtract 10
- D. Subtract 5



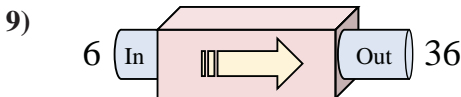
- A. Subtract 26
- B. Add 26
- C. Add 25
- D. Add 28



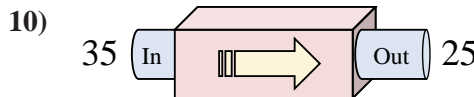
- A. Add 29
- B. Add 27
- C. Add 34
- D. Subtract 34



- A. Add 10
- B. Add 12
- C. Subtract 8
- D. Add 14



- A. Add 25
- B. Add 30
- C. Subtract 30
- D. Add 33



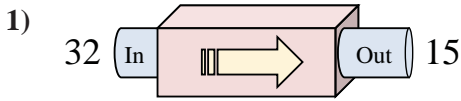
- A. Subtract 10
- B. Subtract 14
- C. Add 11
- D. Add 12

Answers

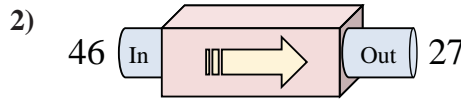
1. _____
2. _____
3. _____
4. _____
5. _____
6. _____
7. _____
8. _____
9. _____
10. _____



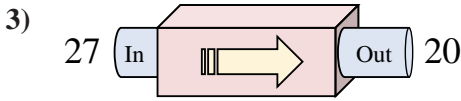
Determine which rule the function machine is using.



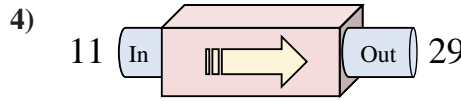
- A. Subtract 15
- B. Subtract 17
- C. Subtract 16
- D. Subtract 19



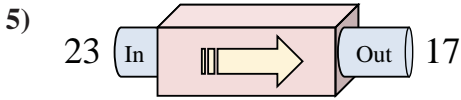
- A. Subtract 14
- B. Subtract 19
- C. Subtract 21
- D. Subtract 15



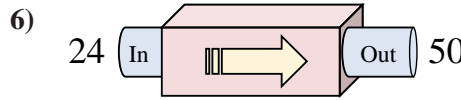
- A. Subtract 9
- B. Add 2
- C. Subtract 7
- D. Subtract 12



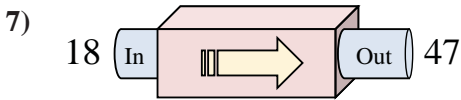
- A. Add 18
- B. Subtract 16
- C. Add 14
- D. Add 15



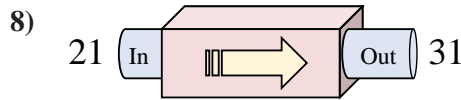
- A. Add 9
- B. Subtract 6
- C. Subtract 10
- D. Subtract 5



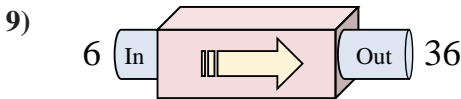
- A. Subtract 26
- B. Add 26
- C. Add 25
- D. Add 28



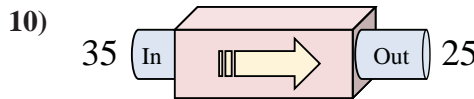
- A. Add 29
- B. Add 27
- C. Add 34
- D. Subtract 34



- A. Add 10
- B. Add 12
- C. Subtract 8
- D. Add 14



- A. Add 25
- B. Add 30
- C. Subtract 30
- D. Add 33



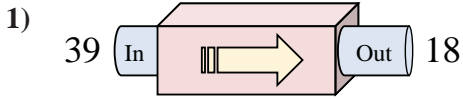
- A. Subtract 10
- B. Subtract 14
- C. Add 11
- D. Add 12

Answers

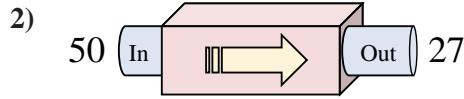
1. **B**
2. **B**
3. **C**
4. **A**
5. **B**
6. **B**
7. **A**
8. **A**
9. **B**
10. **A**



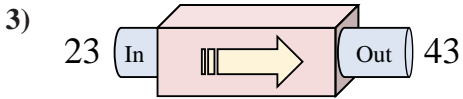
Determine which rule the function machine is using.



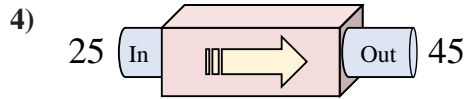
- A. Subtract 25
- B. Add 21
- C. Subtract 21
- D. Subtract 17



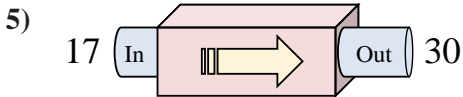
- A. Subtract 23
- B. Add 26
- C. Add 19
- D. Subtract 18



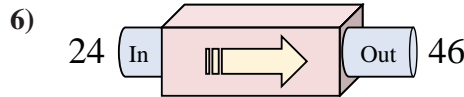
- A. Add 18
- B. Subtract 21
- C. Add 20
- D. Subtract 15



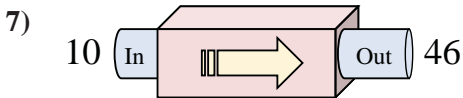
- A. Subtract 20
- B. Add 20
- C. Add 25
- D. Add 24



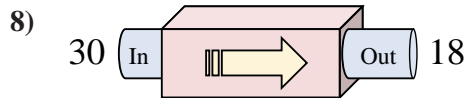
- A. Subtract 10
- B. Add 12
- C. Add 17
- D. Add 13



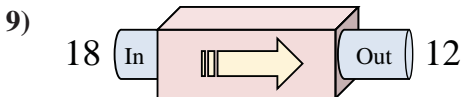
- A. Add 24
- B. Add 20
- C. Add 22
- D. Subtract 17



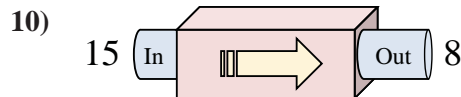
- A. Add 36
- B. Add 33
- C. Add 32
- D. Add 41



- A. Subtract 13
- B. Subtract 12
- C. Subtract 14
- D. Add 14



- A. Add 1
- B. Subtract 1
- C. Subtract 6
- D. Subtract 7



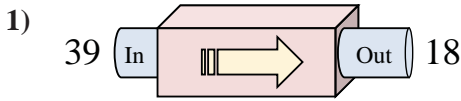
- A. Subtract 9
- B. Add 12
- C. Subtract 12
- D. Subtract 7

Answers

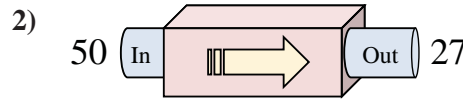
1. _____
2. _____
3. _____
4. _____
5. _____
6. _____
7. _____
8. _____
9. _____
10. _____



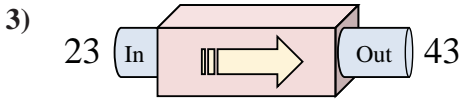
Determine which rule the function machine is using.



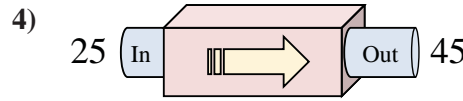
- A. Subtract 25
- B. Add 21
- C. Subtract 21
- D. Subtract 17



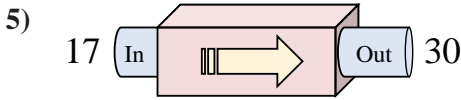
- A. Subtract 23
- B. Add 26
- C. Add 19
- D. Subtract 18



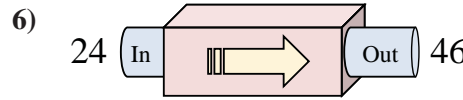
- A. Add 18
- B. Subtract 21
- C. Add 20
- D. Subtract 15



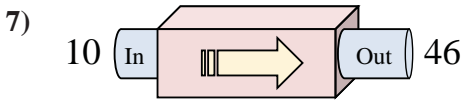
- A. Subtract 20
- B. Add 20
- C. Add 25
- D. Add 24



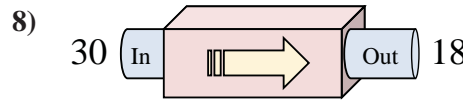
- A. Subtract 10
- B. Add 12
- C. Add 17
- D. Add 13



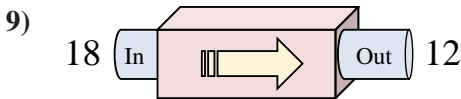
- A. Add 24
- B. Add 20
- C. Add 22
- D. Subtract 17



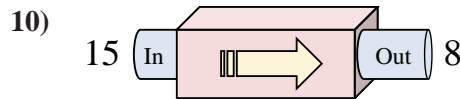
- A. Add 36
- B. Add 33
- C. Add 32
- D. Add 41



- A. Subtract 13
- B. Subtract 12
- C. Subtract 14
- D. Add 14



- A. Add 1
- B. Subtract 1
- C. Subtract 6
- D. Subtract 7



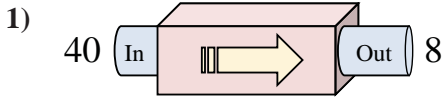
- A. Subtract 9
- B. Add 12
- C. Subtract 12
- D. Subtract 7

Answers

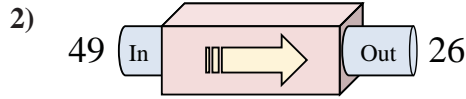
- 1. **C**
- 2. **A**
- 3. **C**
- 4. **B**
- 5. **D**
- 6. **C**
- 7. **A**
- 8. **B**
- 9. **C**
- 10. **D**



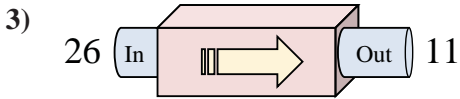
Determine which rule the function machine is using.



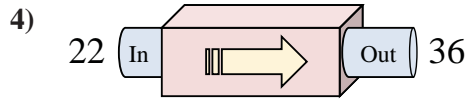
- A. Add 34
- B. Subtract 35
- C. Subtract 32
- D. Subtract 29



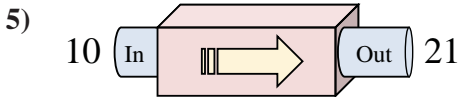
- A. Add 21
- B. Subtract 23
- C. Subtract 21
- D. Subtract 25



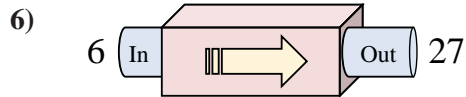
- A. Add 20
- B. Subtract 11
- C. Subtract 16
- D. Subtract 15



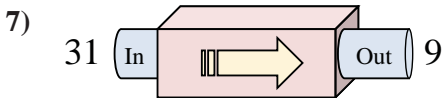
- A. Subtract 14
- B. Add 14
- C. Subtract 13
- D. Add 19



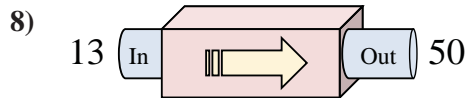
- A. Add 14
- B. Add 11
- C. Add 8
- D. Add 7



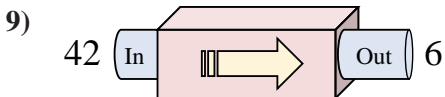
- A. Add 19
- B. Subtract 21
- C. Add 21
- D. Add 26



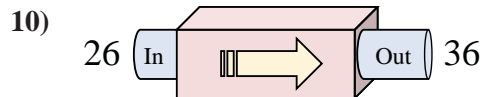
- A. Add 22
- B. Subtract 22
- C. Subtract 18
- D. Add 23



- A. Subtract 37
- B. Add 36
- C. Add 37
- D. Add 42



- A. Subtract 41
- B. Subtract 37
- C. Subtract 39
- D. Subtract 36



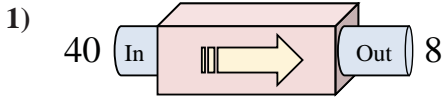
- A. Add 10
- B. Add 9
- C. Add 5
- D. Add 7

Answers

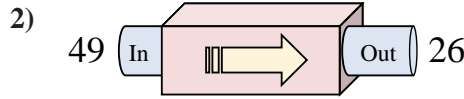
1. _____
2. _____
3. _____
4. _____
5. _____
6. _____
7. _____
8. _____
9. _____
10. _____



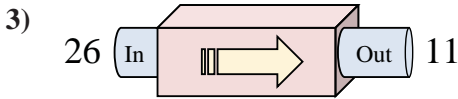
Determine which rule the function machine is using.



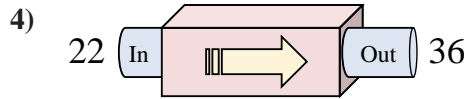
- A. Add 34
- B. Subtract 35
- C. Subtract 32
- D. Subtract 29



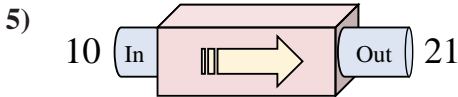
- A. Add 21
- B. Subtract 23
- C. Subtract 21
- D. Subtract 25



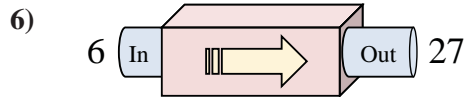
- A. Add 20
- B. Subtract 11
- C. Subtract 16
- D. Subtract 15



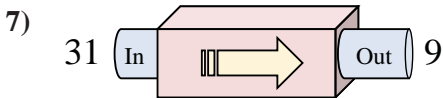
- A. Subtract 14
- B. Add 14
- C. Subtract 13
- D. Add 19



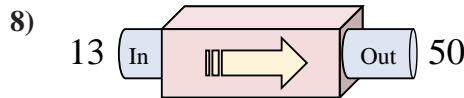
- A. Add 14
- B. Add 11
- C. Add 8
- D. Add 7



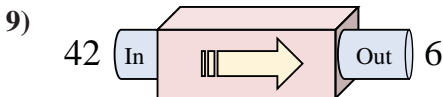
- A. Add 19
- B. Subtract 21
- C. Add 21
- D. Add 26



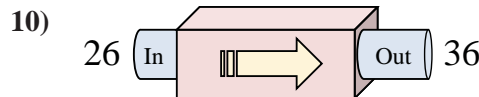
- A. Add 22
- B. Subtract 22
- C. Subtract 18
- D. Add 23



- A. Subtract 37
- B. Add 36
- C. Add 37
- D. Add 42



- A. Subtract 41
- B. Subtract 37
- C. Subtract 39
- D. Subtract 36



- A. Add 10
- B. Add 9
- C. Add 5
- D. Add 7

Answers

- 1. **C**
- 2. **B**
- 3. **D**
- 4. **B**
- 5. **B**
- 6. **C**
- 7. **B**
- 8. **C**
- 9. **D**
- 10. **A**