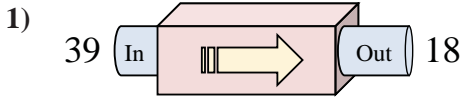
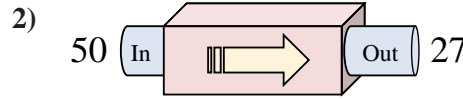




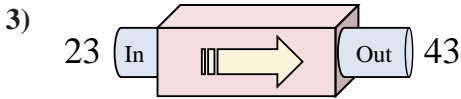
Determine which rule the function machine is using.



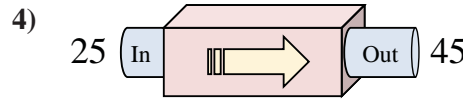
- A. Subtract 25
- B. Add 21
- C. Subtract 21
- D. Subtract 17



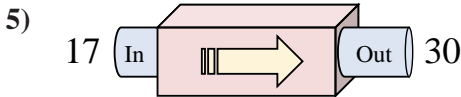
- A. Subtract 23
- B. Add 26
- C. Add 19
- D. Subtract 18



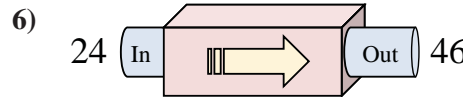
- A. Add 18
- B. Subtract 21
- C. Add 20
- D. Subtract 15



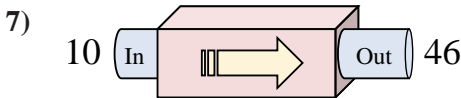
- A. Subtract 20
- B. Add 20
- C. Add 25
- D. Add 24



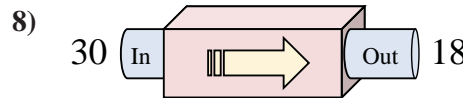
- A. Subtract 10
- B. Add 12
- C. Add 17
- D. Add 13



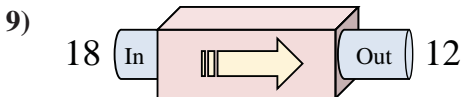
- A. Add 24
- B. Add 20
- C. Add 22
- D. Subtract 17



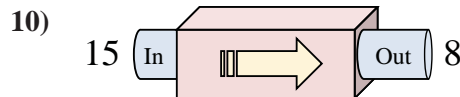
- A. Add 36
- B. Add 33
- C. Add 32
- D. Add 41



- A. Subtract 13
- B. Subtract 12
- C. Subtract 14
- D. Add 14



- A. Add 1
- B. Subtract 1
- C. Subtract 6
- D. Subtract 7



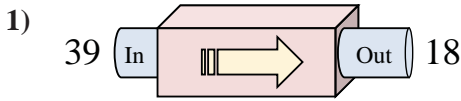
- A. Subtract 9
- B. Add 12
- C. Subtract 12
- D. Subtract 7

Answers

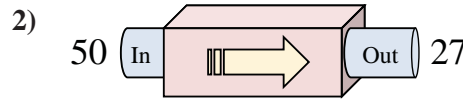
1. _____
2. _____
3. _____
4. _____
5. _____
6. _____
7. _____
8. _____
9. _____
10. _____



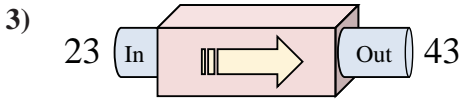
Determine which rule the function machine is using.



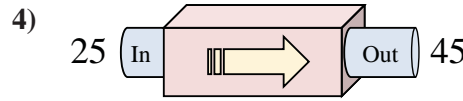
- A. Subtract 25
- B. Add 21
- C. Subtract 21
- D. Subtract 17



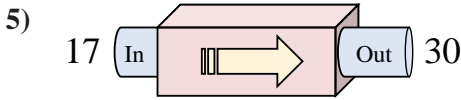
- A. Subtract 23
- B. Add 26
- C. Add 19
- D. Subtract 18



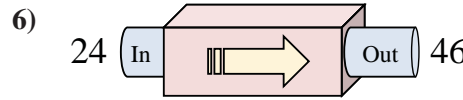
- A. Add 18
- B. Subtract 21
- C. Add 20
- D. Subtract 15



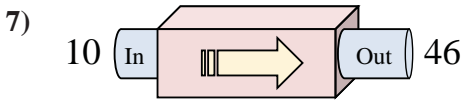
- A. Subtract 20
- B. Add 20
- C. Add 25
- D. Add 24



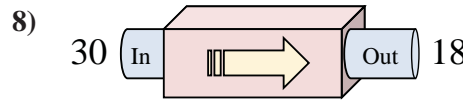
- A. Subtract 10
- B. Add 12
- C. Add 17
- D. Add 13



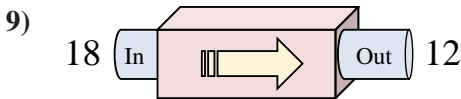
- A. Add 24
- B. Add 20
- C. Add 22
- D. Subtract 17



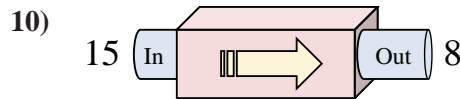
- A. Add 36
- B. Add 33
- C. Add 32
- D. Add 41



- A. Subtract 13
- B. Subtract 12
- C. Subtract 14
- D. Add 14



- A. Add 1
- B. Subtract 1
- C. Subtract 6
- D. Subtract 7



- A. Subtract 9
- B. Add 12
- C. Subtract 12
- D. Subtract 7

Answers

- 1. **C**
- 2. **A**
- 3. **C**
- 4. **B**
- 5. **D**
- 6. **C**
- 7. **A**
- 8. **B**
- 9. **C**
- 10. **D**