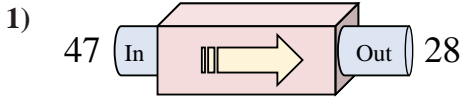
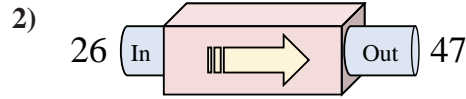




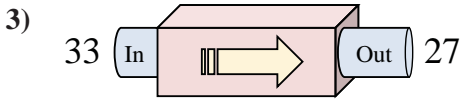
Determine which rule the function machine is using.



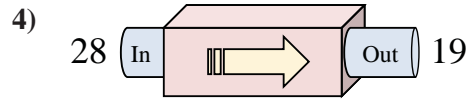
- A. Subtract 22
- B. Subtract 21
- C. Subtract 19
- D. Subtract 17



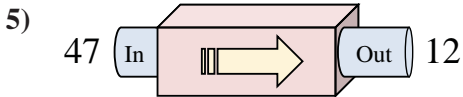
- A. Add 21
- B. Add 17
- C. Add 20
- D. Subtract 22



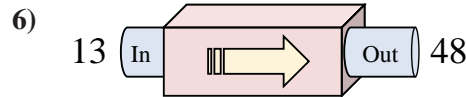
- A. Add 11
- B. Subtract 6
- C. Subtract 1
- D. Add 5



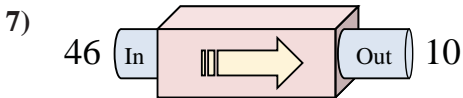
- A. Subtract 14
- B. Subtract 13
- C. Subtract 9
- D. Subtract 6



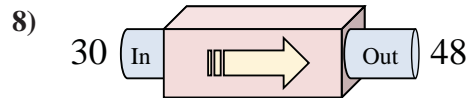
- A. Subtract 35
- B. Subtract 33
- C. Add 39
- D. Subtract 40



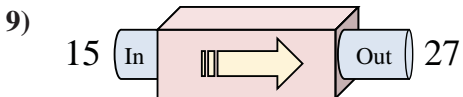
- A. Add 30
- B. Subtract 33
- C. Add 35
- D. Add 37



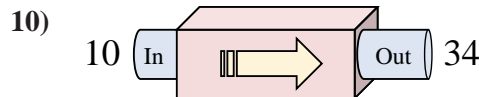
- A. Add 36
- B. Subtract 38
- C. Subtract 40
- D. Subtract 36



- A. Add 15
- B. Add 18
- C. Add 22
- D. Add 16



- A. Subtract 12
- B. Add 11
- C. Add 13
- D. Add 12



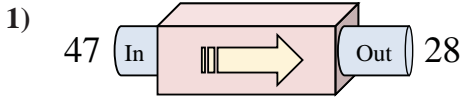
- A. Add 29
- B. Add 24
- C. Add 20
- D. Subtract 28

Answers

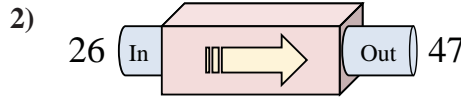
1. _____
2. _____
3. _____
4. _____
5. _____
6. _____
7. _____
8. _____
9. _____
10. _____



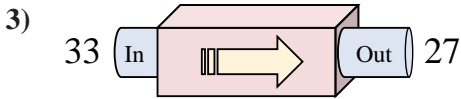
Determine which rule the function machine is using.



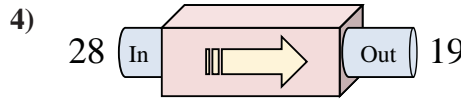
- A. Subtract 22
- B. Subtract 21
- C. Subtract 19
- D. Subtract 17



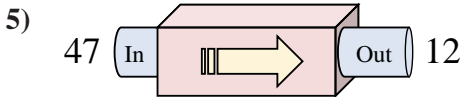
- A. Add 21
- B. Add 17
- C. Add 20
- D. Subtract 22



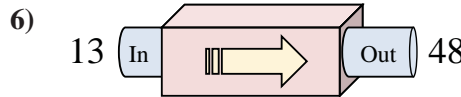
- A. Add 11
- B. Subtract 6
- C. Subtract 1
- D. Add 5



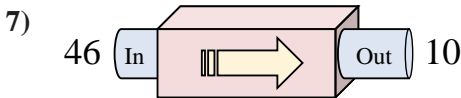
- A. Subtract 14
- B. Subtract 13
- C. Subtract 9
- D. Subtract 6



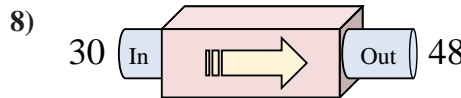
- A. Subtract 35
- B. Subtract 33
- C. Add 39
- D. Subtract 40



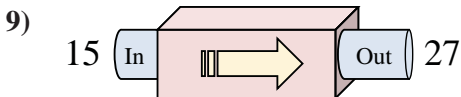
- A. Add 30
- B. Subtract 33
- C. Add 35
- D. Add 37



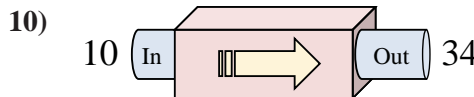
- A. Add 36
- B. Subtract 38
- C. Subtract 40
- D. Subtract 36



- A. Add 15
- B. Add 18
- C. Add 22
- D. Add 16



- A. Subtract 12
- B. Add 11
- C. Add 13
- D. Add 12



- A. Add 29
- B. Add 24
- C. Add 20
- D. Subtract 28

Answers

- 1. **C**
- 2. **A**
- 3. **B**
- 4. **C**
- 5. **A**
- 6. **C**
- 7. **D**
- 8. **B**
- 9. **D**
- 10. **B**