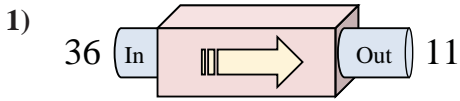
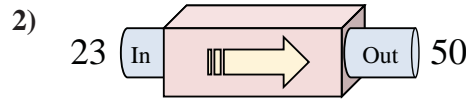




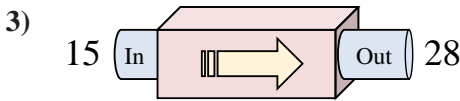
Determine which rule the function machine is using.



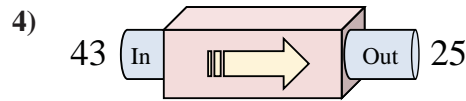
- A. Subtract 24
- B. Subtract 25
- C. Subtract 22
- D. Add 22



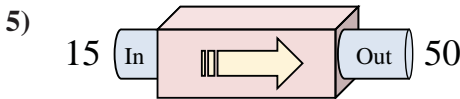
- A. Add 31
- B. Add 24
- C. Add 25
- D. Add 27



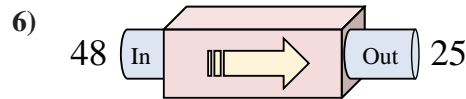
- A. Add 15
- B. Add 10
- C. Add 13
- D. Add 14



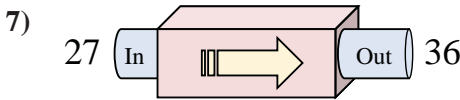
- A. Subtract 18
- B. Subtract 21
- C. Add 21
- D. Subtract 17



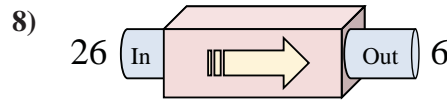
- A. Add 35
- B. Add 40
- C. Add 39
- D. Subtract 32



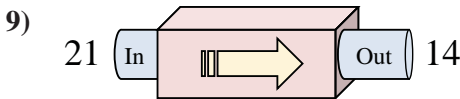
- A. Subtract 18
- B. Subtract 23
- C. Subtract 24
- D. Add 28



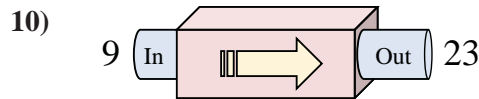
- A. Add 8
- B. Subtract 5
- C. Add 7
- D. Add 9



- A. Add 22
- B. Subtract 25
- C. Subtract 18
- D. Subtract 20



- A. Add 5
- B. Subtract 12
- C. Subtract 6
- D. Subtract 7



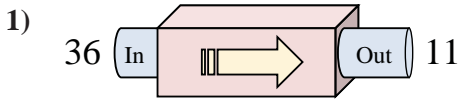
- A. Subtract 17
- B. Add 13
- C. Add 15
- D. Add 14

Answers

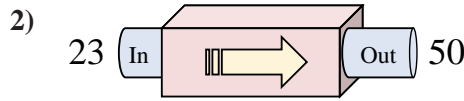
1. \_\_\_\_\_
2. \_\_\_\_\_
3. \_\_\_\_\_
4. \_\_\_\_\_
5. \_\_\_\_\_
6. \_\_\_\_\_
7. \_\_\_\_\_
8. \_\_\_\_\_
9. \_\_\_\_\_
10. \_\_\_\_\_



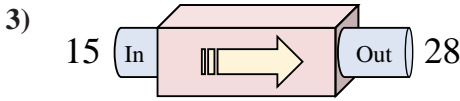
Determine which rule the function machine is using.



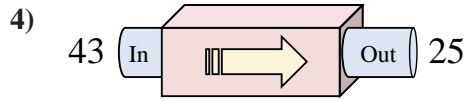
- A. Subtract 24
- B. Subtract 25
- C. Subtract 22
- D. Add 22



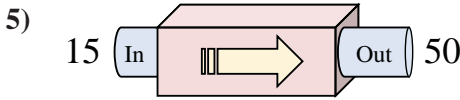
- A. Add 31
- B. Add 24
- C. Add 25
- D. Add 27



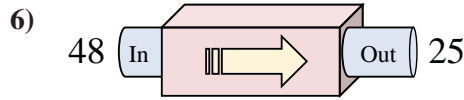
- A. Add 15
- B. Add 10
- C. Add 13
- D. Add 14



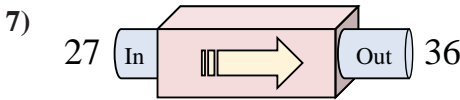
- A. Subtract 18
- B. Subtract 21
- C. Add 21
- D. Subtract 17



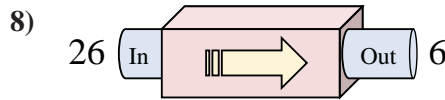
- A. Add 35
- B. Add 40
- C. Add 39
- D. Subtract 32



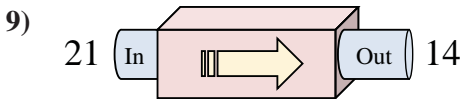
- A. Subtract 18
- B. Subtract 23
- C. Subtract 24
- D. Add 28



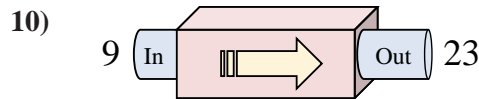
- A. Add 8
- B. Subtract 5
- C. Add 7
- D. Add 9



- A. Add 22
- B. Subtract 25
- C. Subtract 18
- D. Subtract 20



- A. Add 5
- B. Subtract 12
- C. Subtract 6
- D. Subtract 7



- A. Subtract 17
- B. Add 13
- C. Add 15
- D. Add 14

Answers

- 1. **B**
- 2. **D**
- 3. **C**
- 4. **A**
- 5. **A**
- 6. **B**
- 7. **D**
- 8. **D**
- 9. **D**
- 10. **D**