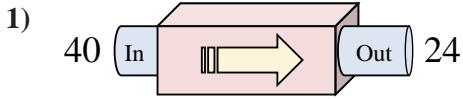
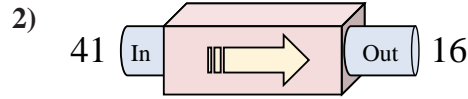




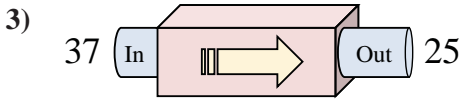
Determine which rule the function machine is using.



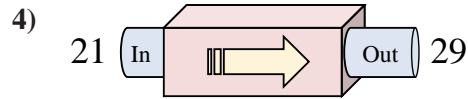
- A. Add 19
- B. Subtract 14
- C. Subtract 16
- D. Subtract 18



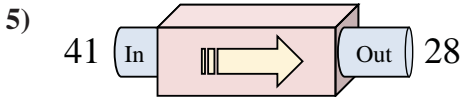
- A. Subtract 23
- B. Subtract 26
- C. Subtract 28
- D. Subtract 25



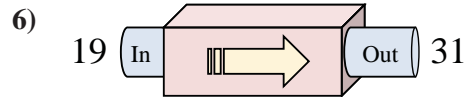
- A. Add 8
- B. Subtract 16
- C. Subtract 13
- D. Subtract 12



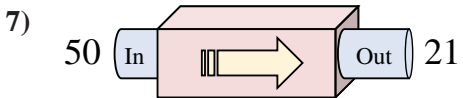
- A. Add 8
- B. Add 9
- C. Add 7
- D. Add 3



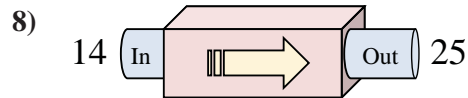
- A. Subtract 13
- B. Add 11
- C. Subtract 9
- D. Subtract 8



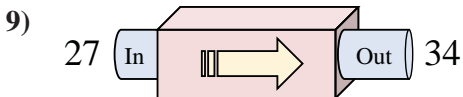
- A. Add 17
- B. Add 12
- C. Add 9
- D. Add 11



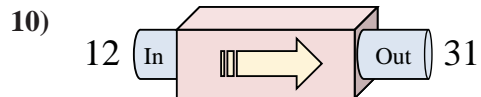
- A. Add 32
- B. Subtract 29
- C. Subtract 25
- D. Subtract 30



- A. Add 15
- B. Add 13
- C. Add 11
- D. Add 6



- A. Add 3
- B. Add 5
- C. Add 8
- D. Add 7



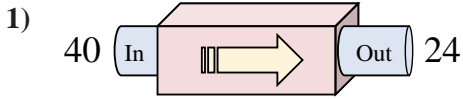
- A. Add 20
- B. Subtract 23
- C. Add 19
- D. Add 23

Answers

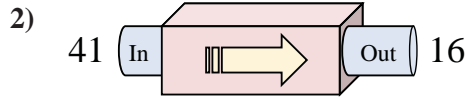
1. _____
2. _____
3. _____
4. _____
5. _____
6. _____
7. _____
8. _____
9. _____
10. _____



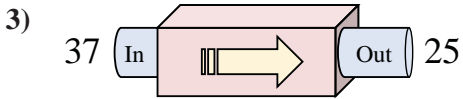
Determine which rule the function machine is using.



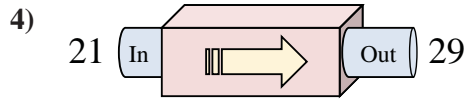
- A. Add 19
- B. Subtract 14
- C. Subtract 16
- D. Subtract 18



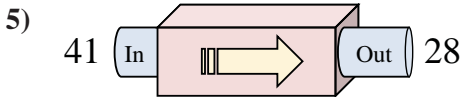
- A. Subtract 23
- B. Subtract 26
- C. Subtract 28
- D. Subtract 25



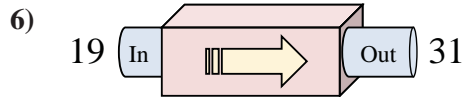
- A. Add 8
- B. Subtract 16
- C. Subtract 13
- D. Subtract 12



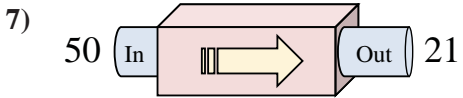
- A. Add 8
- B. Add 9
- C. Add 7
- D. Add 3



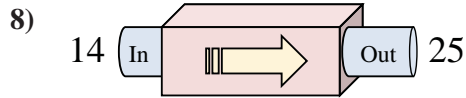
- A. Subtract 13
- B. Add 11
- C. Subtract 9
- D. Subtract 8



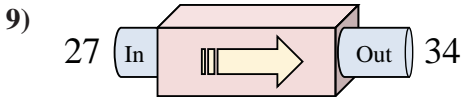
- A. Add 17
- B. Add 12
- C. Add 9
- D. Add 11



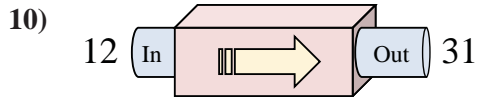
- A. Add 32
- B. Subtract 29
- C. Subtract 25
- D. Subtract 30



- A. Add 15
- B. Add 13
- C. Add 11
- D. Add 6



- A. Add 3
- B. Add 5
- C. Add 8
- D. Add 7



- A. Add 20
- B. Subtract 23
- C. Add 19
- D. Add 23

Answers

- 1. **C**
- 2. **D**
- 3. **D**
- 4. **A**
- 5. **A**
- 6. **B**
- 7. **B**
- 8. **C**
- 9. **D**
- 10. **C**