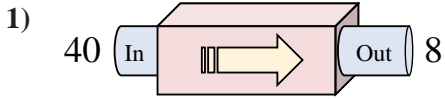
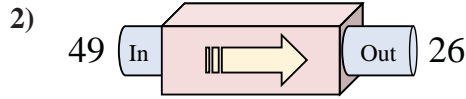




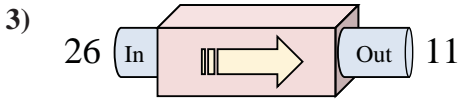
Determine which rule the function machine is using.



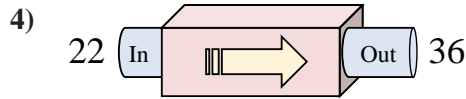
- A. Add 34
- B. Subtract 35
- C. Subtract 32
- D. Subtract 29



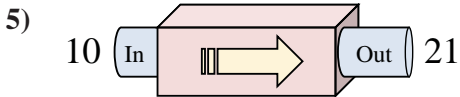
- A. Add 21
- B. Subtract 23
- C. Subtract 21
- D. Subtract 25



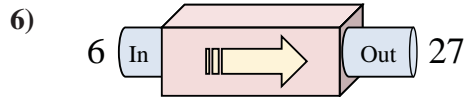
- A. Add 20
- B. Subtract 11
- C. Subtract 16
- D. Subtract 15



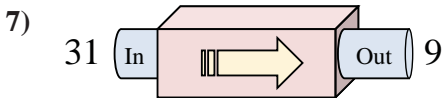
- A. Subtract 14
- B. Add 14
- C. Subtract 13
- D. Add 19



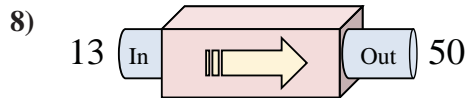
- A. Add 14
- B. Add 11
- C. Add 8
- D. Add 7



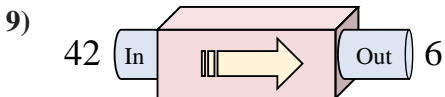
- A. Add 19
- B. Subtract 21
- C. Add 21
- D. Add 26



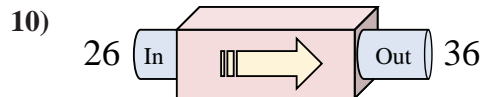
- A. Add 22
- B. Subtract 22
- C. Subtract 18
- D. Add 23



- A. Subtract 37
- B. Add 36
- C. Add 37
- D. Add 42



- A. Subtract 41
- B. Subtract 37
- C. Subtract 39
- D. Subtract 36



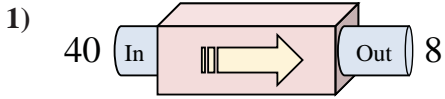
- A. Add 10
- B. Add 9
- C. Add 5
- D. Add 7

Answers

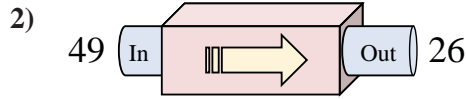
1. _____
2. _____
3. _____
4. _____
5. _____
6. _____
7. _____
8. _____
9. _____
10. _____



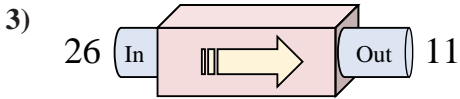
Determine which rule the function machine is using.



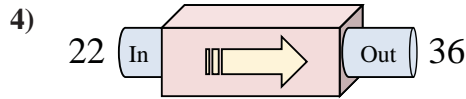
- A. Add 34
- B. Subtract 35
- C. Subtract 32
- D. Subtract 29



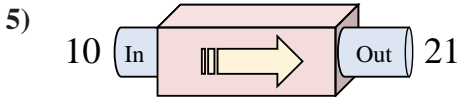
- A. Add 21
- B. Subtract 23
- C. Subtract 21
- D. Subtract 25



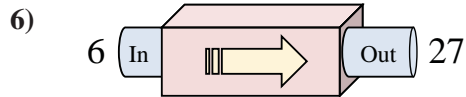
- A. Add 20
- B. Subtract 11
- C. Subtract 16
- D. Subtract 15



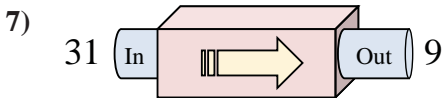
- A. Subtract 14
- B. Add 14
- C. Subtract 13
- D. Add 19



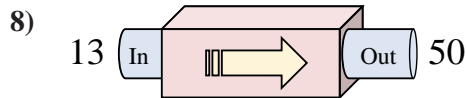
- A. Add 14
- B. Add 11
- C. Add 8
- D. Add 7



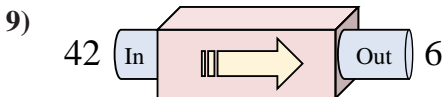
- A. Add 19
- B. Subtract 21
- C. Add 21
- D. Add 26



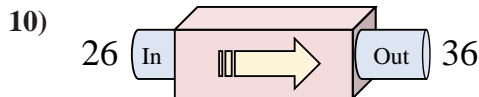
- A. Add 22
- B. Subtract 22
- C. Subtract 18
- D. Add 23



- A. Subtract 37
- B. Add 36
- C. Add 37
- D. Add 42



- A. Subtract 41
- B. Subtract 37
- C. Subtract 39
- D. Subtract 36



- A. Add 10
- B. Add 9
- C. Add 5
- D. Add 7

Answers

- 1. **C**
- 2. **B**
- 3. **D**
- 4. **B**
- 5. **B**
- 6. **C**
- 7. **B**
- 8. **C**
- 9. **D**
- 10. **A**